

INTERNATIONAL INDIAN SCHOOL, DAMMAM

EVS WORKSHEET NO. 5

L – 10 FOOD WE EAT

NAME: _____ CLASS: I - _____ DATE: _____


Q1. FILL IN THE BLANKS:

1. Food gives us _____ to work and play.
2. We eat _____ in the afternoon.
3. Fruits and vegetables should be _____ well before eating.
4. We should drink _____ everyday.




Q2. WRITE TRUE OR FALSE:

1. Food helps us to grow. _____
2. We should throw or waste food. _____
3. We get eggs and meat from animals. _____
4. We eat lunch in the evening. _____
5. We get our food only from plants. _____




Q3. UNDERLINE THE CORRECT ANSWER:

1. An animal that gives us milk (cow / dog).
2. We eat (breakfast / dinner) in the morning.
3. We should not eat (stale / fresh) food.



Q4. CIRCLE THE HEALTHY FOOD:




INTERNATIONAL INDIAN SCHOOL DAMMAM

CLASS - 1 EVS WORKSHEET NO : 6 LESSON - 5 MY SCHOOL

NAME: _____ SECTION: _____ DATE: _____

Q1. Identify and name the picture.



Q2. Fill in the blanks.

- a. Our teachers rest or do their work here. _____
- b. The place where we can buy or eat our food. _____
- c. Different kinds of books are borrowed and read here. _____
- d. We should keep our school _____ and _____

Q3. Name the following (Learn orally)

- a. Principal _____
- b. Headmistress _____
- c. Class teacher _____
- d. Hindi teacher _____

Q4. Write true or false

- a. We must obey and respect our teachers _____
- b. We should scribble on the walls _____
- c. Every school has an office _____
- d. We can talk loudly and shout in the classroom _____

INTERNATIONAL INDIAN SCHOOL, DAMMAM

CLASS 1- EVS WORKSHEET NO:7

L-21 TRANSPORT

Name: _____ Sec: _____ Date: _____







Fill in the blanks

1. We use different means of transport to _____.
2. Most _____ move on petrol or diesel.
3. _____ and _____ are used to travel to far –off places.
4. We use public transport such as _____ and _____ to travel.
5. _____ is a vehicle pulled by an animal.

Q.2.Name the following

1. Vehicles that we use on land: _____ and _____.
2. Vehicles that we use on water: _____ and _____.
3. Vehicles that we use in air: _____ and _____.

Q.3.Identify the pictures and write “L” for Land, “W” for Water, “A” for Air transport.

| | | |
|-----------------------------------------------------------------------------------------------------------------|-----------------------------------------------------------------------------------------------------------------|-------------------------------------------------------------------------------------------------------------------|
|  <input type="checkbox"/> |  <input type="checkbox"/> |  <input type="checkbox"/> |
|  <input type="checkbox"/> |  <input type="checkbox"/> |  <input type="checkbox"/> |

INTERNATIONAL INDIAN SCHOOL, DAMMAM

CLASS-I EVS WORKSHEET NO: 8


L-6 PLANTS AROUND US

Name: _____ Sec: _____ Date: _____

Q.1. Fill in the blanks

1. There are different kinds of _____ growing around us.
2. Plants that need help to stand straight are called _____.
3. _____ is an example of tree.
4. _____ are small plants with woody stems.
5. Plants with weak stems grow along the ground are called _____.
6. Seeds need water, air and sunlight to grow into new _____.

Q.2. Circle the plant products



Q.3. Name the following

1. Big and tall plants with thick stems: _____.
2. Two shrubs: _____, _____.
3. Two herbs : _____, _____.

Q.4. Underline the correct word

1. (**Rose / Grass**) is a plant with woody stem.
2. We get gum and paper from (**plants / animals**).
3. (**Pumpkin / Bean**) plant is a creeper.

INTERNATIONAL INDIAN SCHOOL, DAMMAM.

CLASS 1 E.V.S. WORKSHEET NO: 9

LESSON NO: 18 - THE EARTH

Name: _____ Sec: _____ Date: _____

Q1. Fill in the blanks.

1. The earth is made up of _____ and _____.

2. The earth _____ like a top.

3. Water is present as _____ on high mountains.

4. We live on the _____.

Q2. Write True or False

1. The earth has much more water than it has land. _____

2. The earth keeps moving around the sun all the time. _____

3. Plastic bags are not harmful for our earth. _____

4. We should keep the earth dirty. _____

Q3. Underline the correct answer.


1. Large areas of dry lands are called (deserts / hills).

2. The side of the earth facing the sun has (night / day).

3. The area between hills and mountains are called (valleys / plains).

Q4. Identify, name and colour the different landforms shown in the picture.

(Hints : Base of the mountain should be light brown where as the tips should be left white. the hill should be coloured dark brown and the plains green.)



INTERNATIONAL INDIAN SCHOOL, DAMMAM

CLASS -1 EVS WORKSHEET NO:10

LESSON -19 SKY

NAME:..... SEC: DATE:

Q1.Fill in the blanks:

1. We can see many _____ shining brightly in the sky at night.
2. _____ look like white balls of cotton floating in the sky.
3. The moon _____ its shape every day.
4. _____ form patterns in the sky.




Q2. Write "True" or "False".

1. Dark clouds bring rain.
2. On a clear sunny day, the sky looks black.
3. When the sun shines through the rain, we see a rainbow.
4. We see the sun at night.

Q3.Underline the correct answer:

1. When the sun sets it is (day / night).
2. (Stars / Sun) twinkle only at night.
3. The rainbow has (five / seven) colours.
4. The sun is a (big / small) ball of fire.



• Q4.Identify and circle the things we see in the sky.

