

# INTERNATIONAL INDIAN SCHOOL ,DAMMAM

STD II

COMPUTER SCIENCE WORKSHEET-1

(LESSON 1 & 2)

NAME: \_\_\_\_\_ SECTION: \_\_\_\_\_ DATE: \_\_\_\_\_

**1. Choose the correct option from the bracket and fill in the blanks**

**( Icons, Palmtop, CPU, Microphone, Desktop computer)**

- a. \_\_\_\_\_ is the brain of the computer.
- b. The small pictures on desktop are called \_\_\_\_\_.
- c. \_\_\_\_\_ is a type of computer which will fit into our palm.
- d. \_\_\_\_\_ is used to record sound.
- e. Computers that are kept on desks are called \_\_\_\_\_.

**2. What are the four main parts of the computer system:**

- a. \_\_\_\_\_
- b. \_\_\_\_\_
- c. \_\_\_\_\_
- d. \_\_\_\_\_



### 3. Circle the matching icon

a. Do not forgets information



b. Can take decisions



c. Never gets bored




d. Can make mistakes




### 4. Label the following

a.



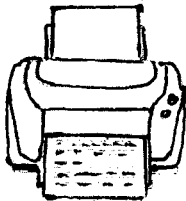
---

b.




---

c.



---

d.



---