

INTERNATIONAL INDIAN SCHOOL, DAMMAM

Std- II EVS L-17 DIRECTIONS Worksheet No:10

Name : _____ Sec _____ Date: _____

I . Who am I?

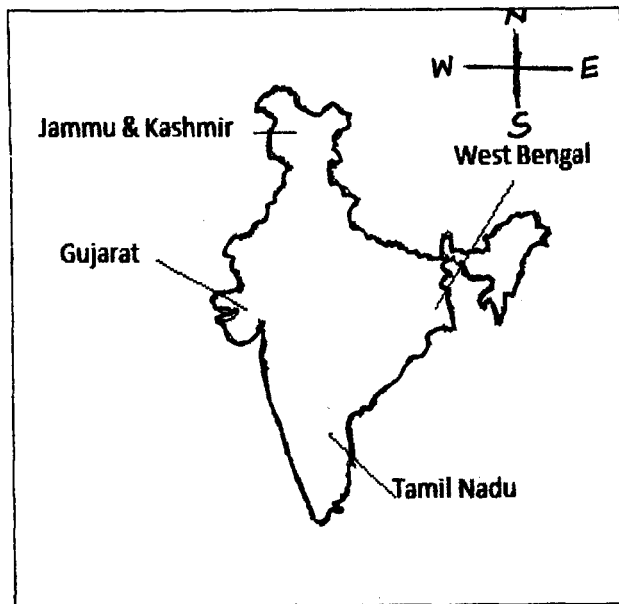
- 1) I am an instrument with a needle that always shows where the North direction is- _____
- 2) I always rise in the east and set in the west. _____
- 3) I am opposite to the East direction. _____

compass

West

sun

II. See the map of India and find out in which directions the following states are located:



- 1) Tamil Nadu _____
- 2) Gujarat _____
- 3) West Bengal _____
- 4) Jammu and Kashmir _____

III. Look at the picture and answer the following:

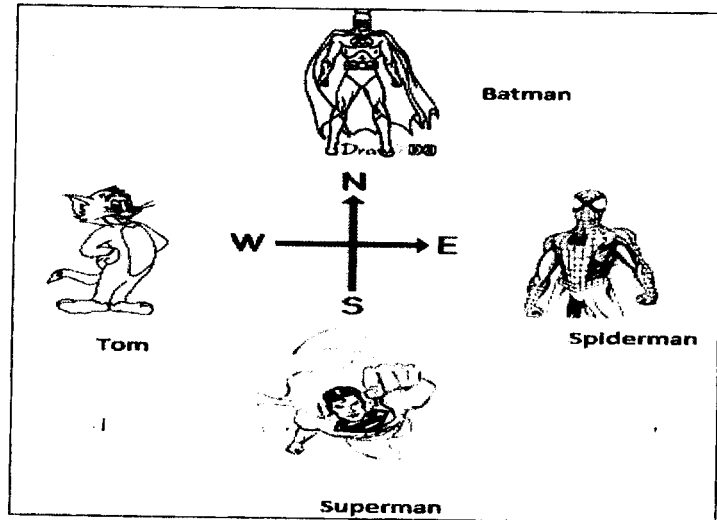
Write the name of the character whose picture is in the following directions:

1) North _____

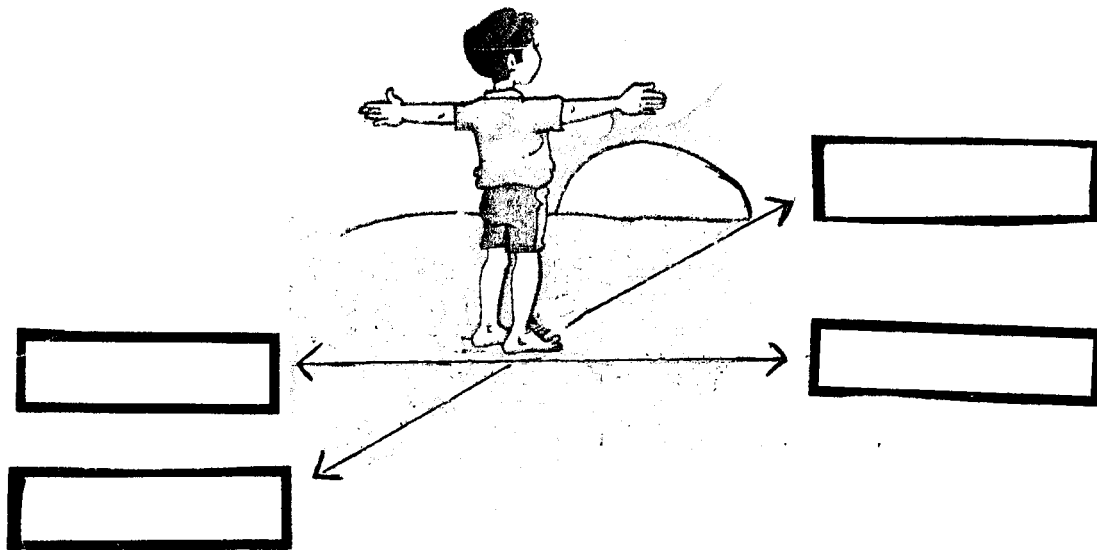
2) South _____

3) East _____

4) West _____



IV. Look at the picture and name the directions.



Teacher's Signature: _____




INTERNATIONAL INDIAN SCHOOL, DAMMAM

Std. II E V S L - 15 MORE ABOUT PLANTS Worksheet No. 11

Name : _____ Sec. : _____ Date : _____

Q 1. Identify and name the five different kinds of plants :


(creeper, tree, herb, shrub, climber)



Q 2. Name the following :

1. The strong stem of a tree. _____
2. Plants that have weak stems and grow along the ground. _____
3. The part of a plant which carries water to the leaves and stores food. _____
4. Plants with weak stems which need support to stand straight. _____

Q 3 Match the following :



()

a) leaf



()



()

b) root



()



()

c) stem



()

Q 4. Circle the odd one :

a) fruits, medicines, milk, paper

b) sunlight, flower, seed, stem

c) hibiscus, tulsi, rose, grass

Q 4. Write the functions of the following parts of a plant.

a) root : _____

b) leaf : _____

Plants breathe through tiny holes called stomata.

Teacher's signature: _____


INTERNATIONAL INDIAN SCHOOL – DAMMAM

STD – II EVS WORKSHEET NO: 12

LESSON – 14 SAFETY RULES

NAME : _____ SEC : _____ ROLL NO : _____ DATE : _____

I. Colour the pictures which show that safety habits are being followed:




II. Fill in the blanks. Choose the right word from the box.

ambulance safety rules first aid antiseptic lotion stairs

1. We must follow _____ in our daily life.
2. We must not run up or down the _____.
3. The first medical help given to anyone in case of an accident is called _____.
4. For cuts and wounds _____ has to be applied.
5. If a person needs to be taken to a hospital we call an _____.


III. Circle things that go into a first aid kit.



Pencil



ANTISEPTIC OINTMENT



Pillow

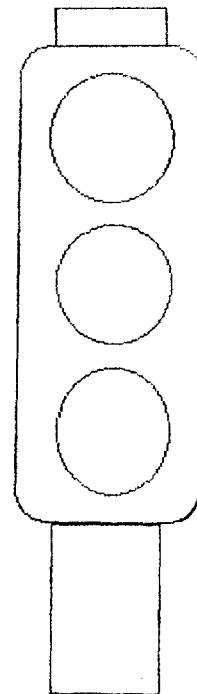


Candy



Scarf

IV. Colour the traffic lights and write the meaning of each light.



Teacher's signature: _____

INTERNATIONAL INDIAN SCHOOL –DAMMAM

STD II







E.V.S

L-19 MEANS OF COMMUNICATION

W.S. NO: 13

Name: _____ Sec. _____ Date: _____

I. Identify the different means of communication and write the missing letters:

 <p>_ M _ I L</p>	 <p>F _ X M _ C H I _ E</p>	 <p>_ O _ _ _ E P _ O _ E</p>
 <p>N _ W _ P _ _ E _</p>	 <p>_ E L _ _ _ O _ E</p>	 <p>R _ D _ O</p>

II. Choose the means of communication for the following situations:

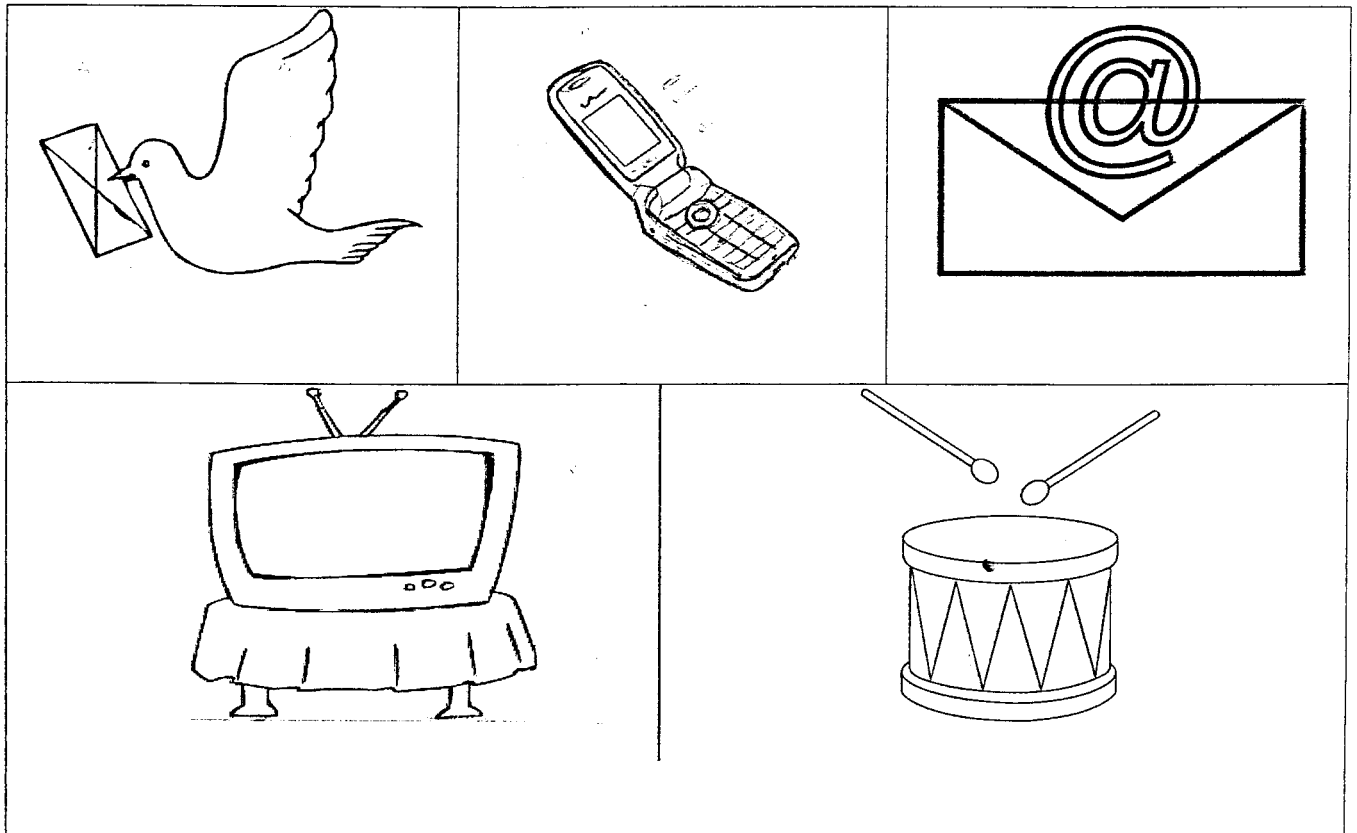
a) Rohan was absent to school. How will he communicate with his friend to know the absent work ? _____
(newspaper / mobile phone)



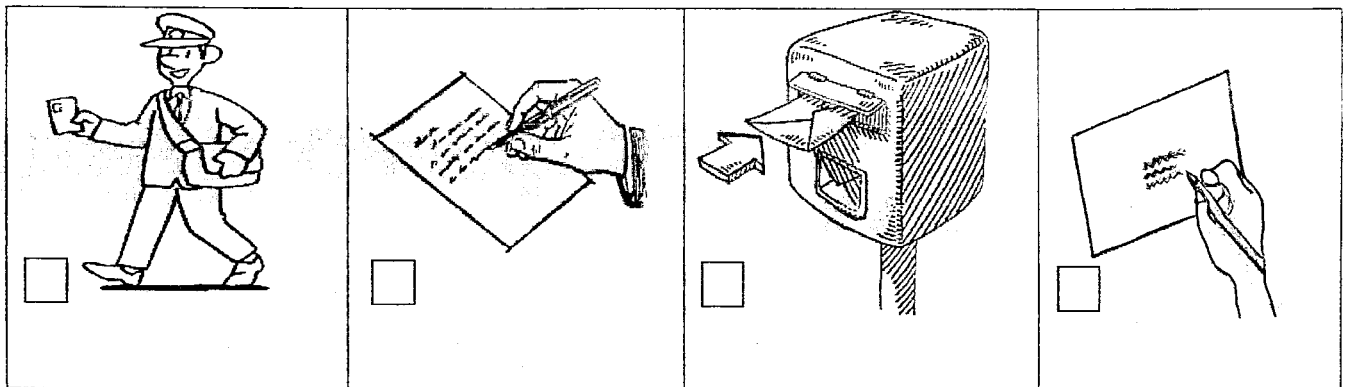
b) Sara wants to send a parcel to her friend. Which means of communication she would choose? _____
(faxmachine / postal service)



III. Cross out the old means of communication and colour the new ones:



IV. Arrange the following pictures in proper order.



V. Fill in the blanks:

1. The telephone was invented by _____.
2. The _____ is the store house of information.

Communication
is what makes a team strong

Teacher's Signature _____

Name: _____ Sec: _____ Date: _____

I Underline the correct answer:

1. The means of transport that moves on water is

- a. aeroplane b. train c. ship



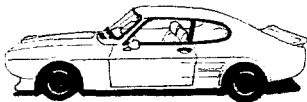
2. Slow means of transport...

- a. car b. cycle rickshaw c. train

3. We can travel long distances comfortably by a

- a. train b. bicycle c. scooter

II Number these means of transport from the slowest to the fastest:





III Circle the odd one in each group:

1. a) car b) bus c) scooter d) bicycle
2. a) bullock cart b) tonga c) train d) cycle rickshaw
3. a) roadways b) boat c) waterways d) airways

IV Give the expanded form of CNG: _____

V Name the vehicles which do not need fuel to move:



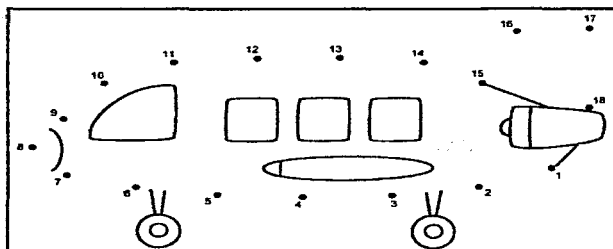
VI Name the following :

1. Two very fast moving vehicles: a) _____ b) _____
2. Two vehicles which are used to carry goods from one place to another
a) _____ b) _____

VII You are planning some outings. Write the correct mode of transport you choose in the spaces provided:

1. You are going for a school field trip. _____
2. You are going to visit a village across the river. _____
3. You are going to India for holidays _____
4. You are going on a trip from Mumbai to Goa _____

VIII Join the dots, write its name and colour the picture:



***Don't wear headphones or talk on a phone while crossing the road.**

Teacher's signature: _____