

**INTERNATIONAL INDIAN SCHOOL, DAMMAM (2017-18)**

**STD II EVS L-18 MEANS OF TRANSPORT WORKSHEET NO:14**

Name: \_\_\_\_\_ Sec: \_\_\_\_\_ Date: \_\_\_\_\_

**I. Arrange the vehicles from the fastest to the slowest.**

rickshaw	aeroplane	car	cycle
----------	-----------	-----	-------

1. \_\_\_\_\_ 2. \_\_\_\_\_  
3. \_\_\_\_\_ 4. \_\_\_\_\_

**II. Name the following.**

1. Two vehicles used to carry goods from one place to another:

- a) \_\_\_\_\_ b) \_\_\_\_\_

2. Two very fast moving vehicles:


- a) \_\_\_\_\_ b) \_\_\_\_\_

**III. Write true or false.**

1. We can travel long distances comfortably by a train. \_\_\_\_\_  
2. Aeroplane is the fastest means of transport. \_\_\_\_\_  
3. Steamer is a means of land transport. \_\_\_\_\_

**IV. Underline the correct words.**

1. (Cycle / **Bullock cart**) is run by manpower.  
2. (**Train** / Ship) is a means of land transport.  
3. A (**bicycle** / car) has two wheels.  
4. (**Tonga** / car) is a means of transport run by animals.



V. Circle the odd one out.

1. a) car                      b) bus                      c) aeroplane                      d) bicycle
2. a) aeroplane                      b) ship                      c) helicopter                      d) balloon
3. a) roadways                      b) waterways                      c) boat                      d) airways


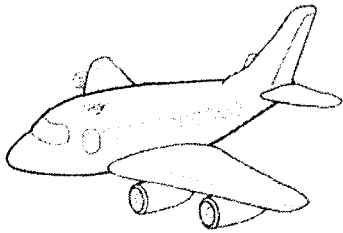
VI. Find eight means of transport in the word search and colour it.



Y	B	E	T	A	X	I	W	O
H	B	M	R	N	A	V	Z	E
S	U	Q	A	Q	V	A	N	A
Z	S	H	I	P	D	L	P	U
C	F	Y	N	O	O	L	M	N
T	X	C	V	P	U	C	C	V
B	I	C	Y	C	L	E	Y	D
E	Y	A	T	A	T	S	P	R
R	O	R	O	W	B	O	A	T



VII. Choose the correct means of transport to go to the following places.



1. LuLu Hypermarket - \_\_\_\_\_
2. India - \_\_\_\_\_






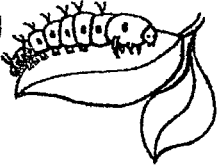






Don't wear headphones or talk on the phone while crossing the road.

Teacher's signature: \_\_\_\_\_





LESSON 14: OUR CLOTHES

Name: \_\_\_\_\_ Roll #: \_\_\_\_\_ Div: \_\_\_\_\_ Date: \_\_\_\_\_

I. Match the following with the correct numbers in the empty circles:

II. Colour the stars RED for costume and YELLOW for uniforms:

			
--	--	---	--

III. Look at the pictures below and fill in the blanks:



1. When it is hot, we wear \_\_\_\_\_ (cotton / silk) clothes as they absorb sweat and keep our body cool.



2. On a cold day, we wear \_\_\_\_\_ (woollen / cotton) clothes to keep our body warm.



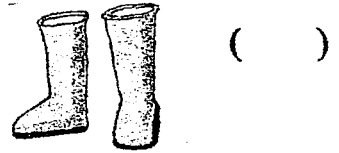
3. Doctors and nurses wear \_\_\_\_\_ (costumes / uniforms).

IV. Use the key given below to solve the puzzles and then match with the pictures:

A	B	C	D	E	F	G	H	I	J	K	L	M	N	O	P	Q	R	S	T	U	V	W	X	Y	Z
1	2	3	4	5	6	7	8	9	10	11	12	13	14	15	16	17	18	19	20	21	22	23	24	25	26

1. Summer season

19	11	9	18	20



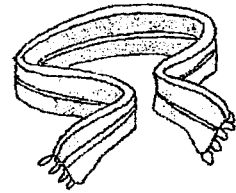
2. Winter season

13	21	6	6	12	5	18


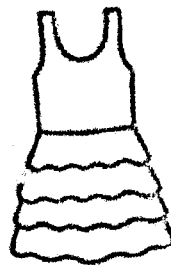


3. Rainy season

7	21	13	2	15	15	20	19



V. Encircle the clothes that are worn in winter:



\*\*\*\*\*

Teacher's Signature: \_\_\_\_\_

INTERNATIONAL INDIAN SCHOOL-DAMMAM

STD II EVS L- 24 Weather and Seasons Worksheet No: 16

Name: \_\_\_\_\_ Class & Sec: \_\_\_\_\_ Date: \_\_\_\_\_

**I. Fill in the blanks with suitable words.**

rainy, autumn, Spring , Summer , winter

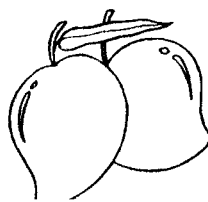
1. \_\_\_\_\_ is the hottest season.
2. The weather is very pleasant during the \_\_\_\_\_ season.
3. We usually wear woollen clothes and use heaters during the \_\_\_\_\_ season.
4. \_\_\_\_\_ comes between winter and summer.
5. We wear raincoats and use umbrellas during the \_\_\_\_\_ season.

**II. Write T for true and F for false.**

1. The rainy season in India is known as monsoon. \_\_\_\_\_
2. The autumn season comes after the monsoon. \_\_\_\_\_
3. Spring is the coldest season of the year. \_\_\_\_\_
4. Changes in seasons affect our food and clothing. \_\_\_\_\_
5. The weather of a place is the same every day. \_\_\_\_\_


**III. Complete the following sentence.**

1. Fruits like \_\_\_\_\_  
\_\_\_\_\_ in summer.




IV. Match the following using the picture clues.

1.



trees shed their leaves (      )

2.




wettest time of the year (      )

3.



woollen clothes (      )

4.



cool drinks & ice creams (      )

❖ Climate is what we expect,  
weather is what we get.

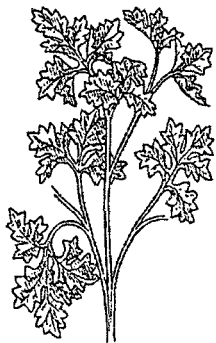



Teacher's sign: \_\_\_\_\_

INTERNATIONAL INDIAN SCHOOL , DAMMAM

STD II EVS L - 7 MORE ABOUT PLANTS WORKSHEET NO - 17

Name : \_\_\_\_\_ Sec : \_\_\_\_\_ Date : \_\_\_\_\_

I. Identify and name the five different kinds of plants .



II. Name the following :

1. The strong main stem of a tree. \_\_\_\_\_
2. Plants that have weak stems and grow along the ground. \_\_\_\_\_
3. Plants that have weak stems and need support to stand straight. \_\_\_\_\_
4. Small plants with soft stems. \_\_\_\_\_
5. Small plants with woody stems. \_\_\_\_\_

III. Circle the odd one:


- a) fruits , medicines , milk , paper
- b) sunlight , flower , seed , stem
- c) hibiscus , tulsi , rose , grass

IV. Write one function of each of the following parts of the plants:

a) roots : \_\_\_\_\_  
\_\_\_\_\_

b) leaves : \_\_\_\_\_  
\_\_\_\_\_

c) stem : \_\_\_\_\_  
\_\_\_\_\_



Teacher's Signature : \_\_\_\_\_



# INTERNATIONAL INDIAN SCHOOL-DAMMAM

STD II EVS

L-20 The Earth

Worksheet No: 18

2017-'18

Name: \_\_\_\_\_ Class & Sec: \_\_\_\_\_ Date: \_\_\_\_\_

## I. Fill in the blanks.

1. A small mountain is called a \_\_\_\_\_.
2. The earth is also a \_\_\_\_\_.
3. A lowland between hills or mountains is called a \_\_\_\_\_.
4. We should keep our earth \_\_\_\_\_ and \_\_\_\_\_.
5. A plateau is also known as a \_\_\_\_\_.

## II. Who am I?

1. I am a landform where lots of sand is found. \_\_\_\_\_
2. I am the largest water body. \_\_\_\_\_
3. I am also known as the ship of the desert. \_\_\_\_\_
4. I am a model of the earth. \_\_\_\_\_

## III. Match the following.

1. The air surrounding the earth - waterfall ( )
2. The cleanest form of fresh water - atmosphere ( )
3. Water falls from a great height - rainwater ( )
4. The tip of a mountain - plains ( )
5. Flat lands - peak ( )

IV. Unscramble the jumbled words.

1. ERTESD




2. MTAINOUN

3. LLEVAY

4. NOECA

---

V. Identify the pictures, name them and colour.



Earth provides enough for every man's need, but not every man's greed.

Teacher's sign: \_\_\_\_\_

# INTERNATIONAL INDIAN SCHOOL – DAMMAM

STD-II

EVS

L-21 OUR UNIVERSE

WORKSHEET NO.19

NAME: \_\_\_\_\_ SEC. \_\_\_\_\_

DATE: \_\_\_/\_\_\_/\_\_\_


## I. FILL IN THE BLANKS:

1. \_\_\_\_\_ have their own light.
2. Sunlight helps plants to \_\_\_\_\_.
3. When there is no moon in the sky, it is known as the \_\_\_\_\_.
4. Planets move around the sun in their \_\_\_\_\_.
5. Sunlight kills \_\_\_\_\_.
6. When the moon is round like a big ball, it is called the \_\_\_\_\_.
7. There are \_\_\_\_\_ planets in our solar system.

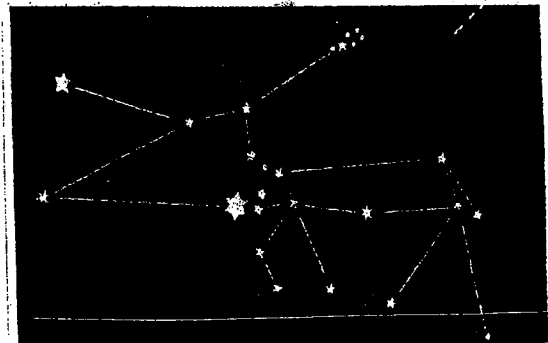
## II. Who am I:

1. We are heavenly bodies and move around the sun. \_\_\_\_\_.
2. I am the farthest planet from the sun. \_\_\_\_\_.
3. I was the ninth planet. Now I am known as a dwarf planet. \_\_\_\_\_.
4. I have no light of my own, I change my shape daily. I move around the earth.  
\_\_\_\_\_.

## III. Name these constellations:



\_\_\_\_\_



\_\_\_\_\_

**IV. Answer the following:**

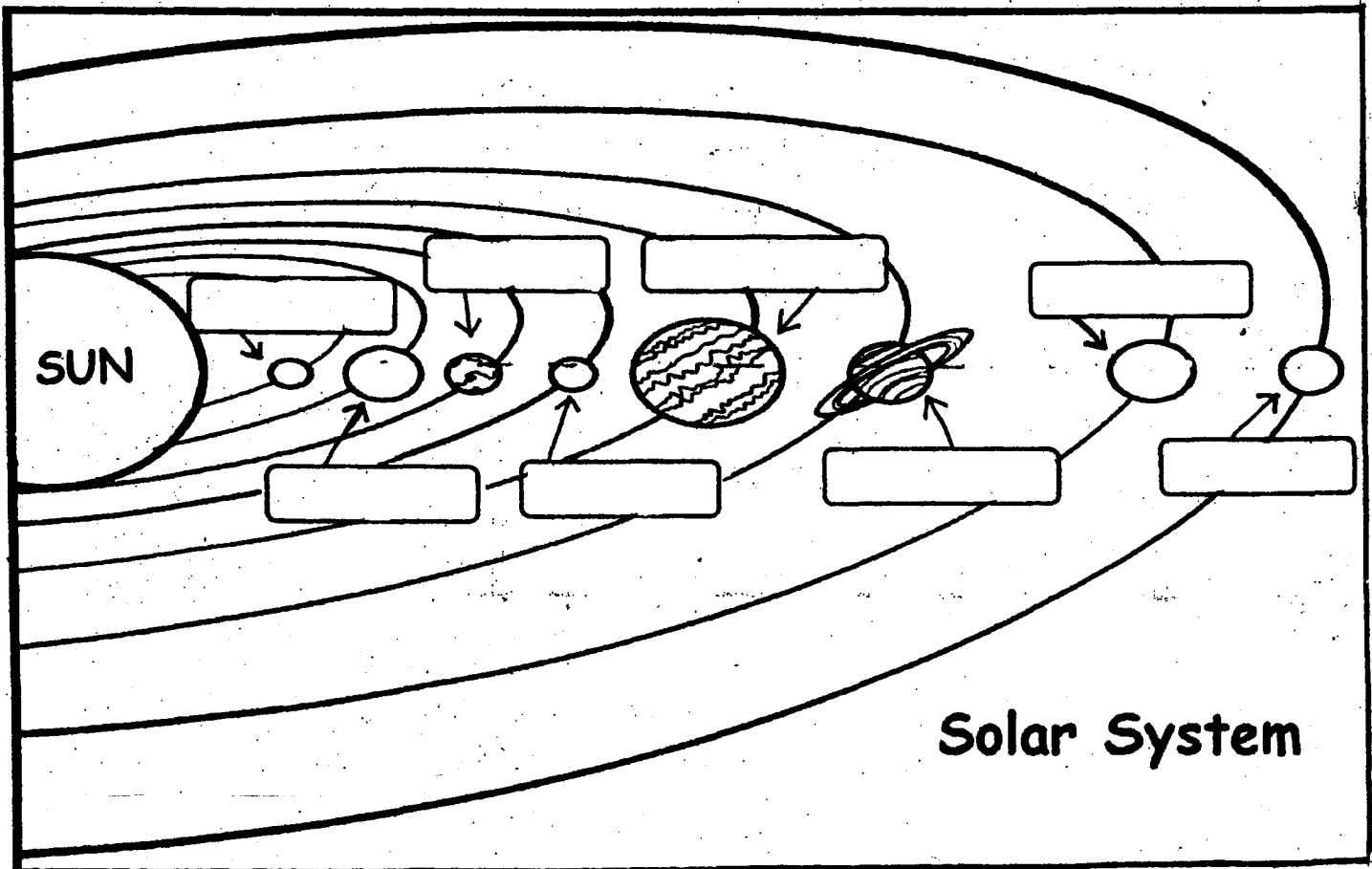
Q1. How does the sun help us?

A1. \_\_\_\_\_  
\_\_\_\_\_  
\_\_\_\_\_

Q2. The earth is also known as the 'Blue Planet' Why?

A2. \_\_\_\_\_  
\_\_\_\_\_  
\_\_\_\_\_

**V. Write the names of the eight planets that move around the sun.**




Teacher's signature: \_\_\_\_\_

**INTERNATIONAL INDIAN SCHOOL, DAMMAM**  
**STD-II EVS REVISION WORKSHEET FOR ANNUAL EXAM 2017-2018**

Name: \_\_\_\_\_ Class: \_\_\_\_\_ Sec: \_\_\_\_\_ Date: \_\_\_\_\_

**I. Who am I?**

1. I have a weak stem and I grow along the ground- \_\_\_\_\_
2. I give you wool- \_\_\_\_\_
3. I am also known as monsoon- \_\_\_\_\_
4. I am the most colourful season of the year- \_\_\_\_\_
5. Now I am called a dwarf planet- \_\_\_\_\_
6. I am also known as a tableland- \_\_\_\_\_



**II. Name the following :**

1. We make belts, shoes, sandals, bags etc. with this- \_\_\_\_\_
2. Two water bodies- \_\_\_\_\_ , \_\_\_\_\_
3. Large areas of land that are very dry and are covered with sand- \_\_\_\_\_
4. The planet nearest to the sun- \_\_\_\_\_
5. The layer of air around the earth- \_\_\_\_\_
6. This season comes after monsoon- \_\_\_\_\_
7. Big, tall plants with trunk, branches and leaves- \_\_\_\_\_
8. They grow underground and hold the plant firmly to the ground- \_\_\_\_\_

**III. Match the following :**

- |                  |             |     |
|------------------|-------------|-----|
| 1. Flowers bloom | fresh water | ( ) |
| 2. Fixed path    | uniform     | ( ) |
| 3. River         | herb        | ( ) |
| 4. A pilot       | spring      | ( ) |
| 5. Soft stem     | orbit       | ( ) |



**IV. Re-arrange the jumbled letters using the clues given and write the correct name of the following pictures:**

1.They have many branches and grow very close to the ground .



b h s s u r

---


2.Special clothes worn for a special purpose.



m o u s e c t

---

3.The largest water body.



a e o n c

---

4.A group of stars that form a shape in the sky.



i a e l s o n t o l n t c

---

5. It is the wettest time of the year.



o n o n o s m

---

**V. Fill in the blanks :**

1. \_\_\_\_\_ are the substances that are essential for growth.
2. Woollen clothes keep our body \_\_\_\_\_.
3. We wear swimming \_\_\_\_\_ when we go to swim.
4. The \_\_\_\_\_ of very high mountains are usually covered with snow.
5. \_\_\_\_\_ is a highland that is flat at top and looks like a table .
6. The moon keeps changing its \_\_\_\_\_.

**VI. Write true or false and rewrite the false statements correctly:**

1. The stem absorbs water and nutrients from the soil for the whole plant. \_\_\_\_\_

---

---

2. We also wear clothes made of silk in winter . \_\_\_\_\_

---

3. The sun moves around the planet. \_\_\_\_\_

---

4. We love to have hot food in winter. \_\_\_\_\_

---

**VII. Answer the following :**

Q1. What are the different parts of a plant ?

A. \_\_\_\_\_

---

Q2. Why do we wear clothes?

A. \_\_\_\_\_

---

Q3. Name the five main seasons of India.

A. \_\_\_\_\_  
\_\_\_\_\_

Q4. Name the different natural features found on the earth.

A. \_\_\_\_\_  
\_\_\_\_\_

**VIII. Cross the odd one out :**

1. hibiscus , cotton , spinach , tulsi
2. wool , leather , silk , cotton
3. mountain , hill , plateau , lake
4. Jupiter , Sun , Neptune , Mars
5. windy , summer , autumn , spring



**IX. Complete the following statements :**

1. Weather is the condition of the \_\_\_\_\_  
\_\_\_\_\_
2. Sea water is salty and cannot be used for \_\_\_\_\_  
\_\_\_\_\_
3. Stars look very small because \_\_\_\_\_  
\_\_\_\_\_
4. Wearing clean clothes is a \_\_\_\_\_
5. The earth is also known as the Blue Planet because \_\_\_\_\_  
\_\_\_\_\_



X. Write the names of the planets in order of their distance from the sun :

2<sup>nd</sup>      5<sup>th</sup>      6<sup>th</sup>      8<sup>th</sup>

[ ]      [ ]      [ ]      [ ]

XI. Complete the crossword puzzle :

Across

Down

1. We use this in rainy season.
2. small plants with woody stems.



1. It is the seventh planet .
2. When water collects in a large area it forms a \_\_\_\_\_.
3. This is made up of leather.

1↓      3↓      2↓

1 →		M						
	N		T				E	
2 →		H						


**XII. Identify the following pictures and complete the information about each:**

1.



They cannot stand \_\_\_\_\_. They need some \_\_\_\_\_ like walls ,sticks etc to grow .  
They are known as \_\_\_\_\_ .

2.



We use these in \_\_\_\_\_ season. They are usually made of \_\_\_\_\_ and \_\_\_\_\_ .

3.



High hills are called \_\_\_\_\_. The tip of the mountain is called its \_\_\_\_\_ .

**XIII. Draw , name and colour:**

Any one thing we use in winter season	Any one landform	Any one shape of the moon

**PRACTICE**  
MAKES  
*perfect*