

INTERNATIONAL INDIAN SCHOOL, DAMMAM

SUMMATIVE ASSESSMENT- II 2015- 16

ENGLISH-CLASS III

TIME: 2 hrs

NAME : _____

MARKS : ORALS: _____ /10

ROLL NO : _____

WRITTEN: _____ / 50

SECTION : _____

TOTAL: _____ /60

INVIGILATOR'S SIGN : _____

EXAMINER'S SIGN : _____

INSTRUCTIONS:

1. Read the paper thoroughly before answering the questions.
 2. Check the paper before submitting.
-

PART A

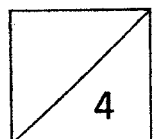
Q. I. Choose the suitable 'Conjunctions' and fill in the blanks. $\frac{1}{2} \times 4 = 2 M$

because and but or

1. Mike fell down _____ hurt his feet.
2. You can either stand up _____ sit down.
3. The pond was full of water _____ of all the rain.
4. Sally wanted to play outside _____ it was so cold.

Q. II. Choose the correct form of verb from the brackets. $\frac{1}{2} \times 4 = 2 M$

1. Sana _____ baseball every day. (play, plays)
2. Lisa always _____ (do, does) well in tests on division.
3. Birds _____ (fly, flies) in the sky.
4. The last train _____ (leave, leaves) the station at 10 p.m.



Q. III. Fill in the blanks with suitable 'Prepositions' from the box. $\frac{1}{2} \times 6 = 3$ M

behind on until across at to

1. There is a bridge _____ the river.
2. He went _____ his friend's house.
3. We like going to cinema _____ Fridays.
4. They played football _____ it got dark.
5. The thief was hiding _____ the door.
6. The concert began _____ 6 o' clock.

Q. IV. Change the following sentences into 'Past Tense'.

$1 \times 3 = 3$ M

1. I swim in the lake every day.

2. Spencer drives his new car to school.

3. Sara blows out all of the candles on her birthday cake.

Q. V. Complete the sentences using the words given in the boxes in the correct order. Use 'and' if needed.

$\frac{1}{2} \times 3 = 1 \frac{1}{2}$ M

1. I have some old _____ photographs of my mother.
2. A _____ cat is wandering in the street.
3. There are _____ clouds floating in the air.

black white

dirty brown

black big

Q. VI. Circle the words which describe the groups.

$\frac{1}{2} \times 3 = 1 \frac{1}{2}$ M

- | | | | | | |
|---|-----------|---------|-------------|-----------|----------|
| 1 | Apple | Fruits | Orange | Grape | Lemon |
| 2 | Jamaica | Italy | Switzerland | Countries | India |
| 3 | Sauce pan | Spatula | Spoon | Cooker | Utensils |

Q. VII. Change the following sentences from Simple Present Tense to Present Continuous Tense.

1 x 3 = 3 M

1. Pauline lives in Hong Kong. _____

2. Abhay goes to a new school next term.

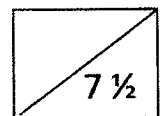
3. The children build sandcastles on the beach.

Q. VIII. Join the following pair of sentences with 'but, or, because, and'. 1 x 3 = 3 M

1. She came to my home. She baked a cake with me.

2. Ritu ran away. She was afraid of dogs.

3. I looked for my shoes beneath my bed. I could not find them.



Q. IX. **Put Apostrophe in the correct places and rewrite the sentences.** 1x2= 2 M

1. Put Mithuns book back on the shelf please.

2. These are the childrens toys.

Q. X. **Rewrite the given sentences using 'Commas' and 'And'.** 1 x 1= 1 M

1. Mom bought grapes oranges bananas strawberries.

Q. XI. **See the phrases given below and tick ✓ the adjectives used in the correct order and cross X the wrong ones.** $\frac{1}{2} \times 4 = 2$ M

1. an old interesting movie

2. a cute little dog

3. my favourite red sandals

4. a white small car

Q. XII. **Pick the part of the animals from the box and write against the animals that have them.** $\frac{1}{2} \times 4 = 2$ M

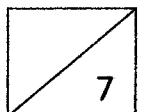
claws	paws	antlers	hooves
-------	------	---------	--------

1. Dog _____

2. Moose _____

3. Horse _____

4. Tiger _____



Q. XIII. Complete the following sentence using " don't " or " doesn't ". $\frac{1}{2} \times 4 = 2 \text{ M}$

1. My mother _____ go to work , she is a home maker.
2. We eat pizza but we _____ eat burgers.
3. Rahul likes to play tennis but he _____ like cricket.
4. They _____ like to play in the rain.

PART B

Q. I. Give one word for the following. $\frac{1}{2} \times 2 = 1 \text{ M}$

1. complaint about something not very important _____
2. moved slowly from side to side _____

Q. II. Frame sentences for the following.(Any two) $1 \times 2 = 2 \text{ M}$

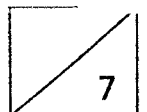
1. delicious _____

2. moaned _____

3. envy _____

Q. III. Complete the following. $\frac{1}{2} \times 4 = 2 \text{ M}$

1. But all troubles have _____.
2. Out of it came _____ that quickly filled the _____ and covered the ground.
3. Tom wanted to stay at home and go for _____.



Q. IV. Write the 'Opposites' of the words given in brackets. $\frac{1}{2} \times 3 = 1 \frac{1}{2} M$

1. The room smelled of _____ air and mold. (fresh)
2. He had no hope of getting _____. (behind)
3. Rita _____ (hated) the classroom rules.

Q. V. Who said this to whom? $\frac{1}{2} \times 2 = 1 M$

1. "No, never mind. Don't call anybody".
A. Who said : _____
B. To whom : _____

Q. VI. Fill in the blanks with the 'Contractions' of the words given in brackets. $\frac{1}{2} \times 3 = 1 \frac{1}{2} M$

1. _____ his most recent novel? (What is)
2. I really wish people _____ drop their litter in the street. (Would not)
3. _____ go outside and ride our bicycles. (Let us)

Q. VIII. Give the word meaning. (Any two) $1 \times 2 = 2 M$

1. dangling : _____
2. contained : _____
3. jerked : _____

Q. IX. Answer the following questions. (Any three)

2 x 3 = 6 M

1. What were the things that were wrong with the Earth?

2. a) Why was Tom very sad on Monday morning?

b) What did Sid think was the matter with Tom?

3. What did the first two bags contain? How did they help the Earth?

4. How did Aunt Polly pull out the loose tooth?

PART C

Q. X. Read the following passage and answer the given questions.

1 x 5 = 5 M

THE BEE

Bees live in a house that is called a hive. There are three kinds of bees: workers, drones and queens. Only one queen bee can live in each hive. If she is lost or dead, the other bees will stop their work.

Bees are very wise and busy little creatures. They all join together to build cells of wax for their honey. Each bee takes its proper place and does its own work. Some go out and gather honey from the flowers; others stay at home and work inside the hive. The cells which they build are all of one shape and size, and no room is left between them. The cells are not round. They have six sides.

Did you ever look into a glass hive to see the bees while at work? It is pleasant to see how busy they always are. But the drones do not work. Before winter comes, all the drones are driven from the hive so that they don't eat the honey which they did not gather.

It is not safe for children to handle bees. Bees have a painful sting that they use in their defense.

Answer the following questions. (Question no 1 to 4 to be answered in complete sentences.)

1 Name the three kinds of bees.

2 The drones are driven from the hive before winter. Why?

3 How many sides does a cell in the hive have?

4 Why is it not safe for children to handle bees?

5 From the above passage find the opposite of

A. found _____

B. outside _____

