

INTERNATIONAL INDIAN SCHOOL, DAMMAM
UPPER PRIMARY SECTIONS
ANNUAL EXAM (MARCH - 2018)
SUBJECT : ENVIRONMENTAL STUDIES

CLASS – III

DATE : _____

NAME : _____

TIME : - 2 HOURS

SECTION : _____

ROLL NO : _____

MARKS : _____/60

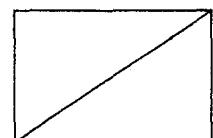
Instructions:-

1. Read the questions carefully and attempt all.
 2. Recheck your paper thoroughly before submission.
-

I. Choose the correct answer :

(1/2X10=5 M)

- 1) _____ is a mammal.
a) frog b) lizard c) whale
- 2) _____ leaves are used to colour hand and feet.
a) mehendi b) betel c) mint
- 3) Insects have _____ legs.
a) 2 b) 6 c) 8
- 4) There are _____ systems in our body.
a) five b) ten c) eight
- 5) Water helps us to _____ waste matter from our body.
a) grow b) eliminate c) digest
- 6) _____ animals prefer dark and damp places.
a) wild b) pet c) crawling



- 7) Silk worms give us _____.
- a) honey b) milk c) silk
- 8) More than _____ of our body is made of water.
- a) one fourth b) three fourths c) two thirds
- 9) _____ is a black and yellow flying insect.
- a) wasp b) leech c) bugs
- 10) A _____ is a house on wheels.
- a) mud-house b) house boat c) caravan

II. Fill in the blanks :

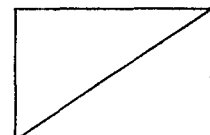
(1X10=10 M)

- 1) The main source of water is _____.
- 2) A _____ house is free from diseases.
- 3) The food from the mouth goes to the _____.
- 4) A spider catches a prey in its _____.
- 5) The _____ is smaller than the earth.
- 6) Cows use their tails to drive away _____.
- 7) _____ is known as bird of prey.
- 8) A group of cells together forms a _____.
- 9) _____ feathers form the wings of a bird.
- 10) _____ depend only on plants for their food.

III. Match the following :

(1/2X6=3 M)

1.	houses	omnivores	
2.	spice	amavasya	
3.	brain	irrigation	
4.	new moon	receives and sends messages	
5.	tubewell	turmeric	
6.	bear	kutchha and pucca	



IV. Write True or False. Correct the false statements:

(3 M)

1) House boats are found in Kashmir. _____

2) Birds have teeth. _____

3) Full moon is called as Purnima. _____

4) Roots are called food factories of the plant. _____

V. Name the following :

(1X4=4M)

1) Lives in a well organized nest _____.

2) Treats sick or injured animals _____.

3) A Greek word which means air carrier _____.

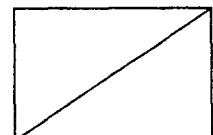
4) It has a sharp, chisel like beak _____.

VI. Categorise the following :

(1/2X4=2M)

[Herb , Climber , Shrub , Creeper]

1.	tulsi , spinach	
2.	hibiscus , rose	
3.	pumpkin , watermelon	
4.	grapevine , bittergourd	



VII. Circle and colour any FIVE names of birds and animals hidden in the grid:

(1X5=5 M)

P	A	R	R	O	T	X	Z	V
E	L	E	P	H	A	N	T	W
N	O	L	T	R	B	O	H	K
G	V	Z	I	F	V	Z	O	X
U	F	Q	G	U	S	B	R	A
I	A	M	E	C	T	C	S	T
N	I	O	R	Z	U	A	E	L

VIII. Give Reasons:

(1X2=2M)

1) We feel mostly with our fingers because _____

2) Trees shed their leaves in autumn because _____

IX. Read the clues and solve the riddles :

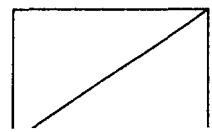
(1/2X4=2M)

1) The Earth gets its light from me . Who am I ?

2) I am the ship of the desert .

3) I can be used to make perfumes.

4) I am used in multistoreyed buildings to reach your flat.



X. Define the following:

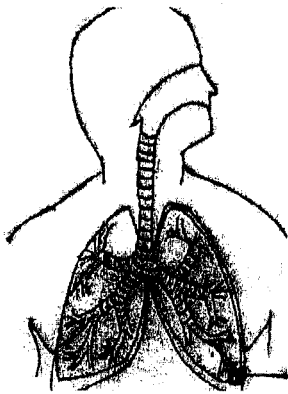
(1X2=2M)

1) Atmosphere - _____


2) Photosynthesis- _____

XI. Identify the pictures:


(1/2X4=2M)



1) _____



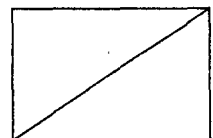
2) _____



3) _____



4) _____



XII. Write short answer for the following : (Any Four)

(2X4=8 M)

1) What are constellations ?

2) Why are houseflies dangerous ?

3) What is rain water harvesting ?

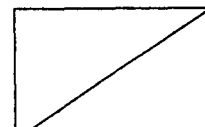
4) What does a house protect us from ?

5) What are domestic animals ?

XIII. Answer the following : (Any One)

(3X1=3 M)

1) What are bones ? List the function of bones.



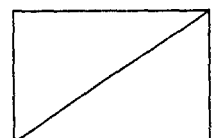
2) List FIVE ways to protect and save life on the earth.

XIV. Answer in detail : (Any One)

(4X1=4 M)

1) Differentiate between rotation and revolution of the earth.

2) List the functions of the FIVE sense organs.



XV. Draw, colour and label the parts of a plant :

(5 Marks)

