

INTERNATIONAL INDIAN SCHOOL DAMMAM
UPPER PRIMARY SECTION
SUMMATIVE ASSESSMENT-1 (JUNE-2014)

CLASS-III

ENVIRONMENTAL STUDIES

Time: 2 hrs

Name: _____

MARKS: ORALS: _____ / 10

Section: _____

WRITTEN: _____ / 50

Roll No: _____

TOTAL: _____ / 60

Instructions: 1. Read the questions carefully and answer according to the instructions.
2. Read and check your paper thoroughly before submission.

Q.I FILL IN THE BLANKS:

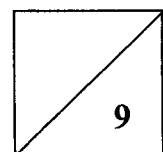
(1x5=5 Marks)

1. The leaves in a cactus are converted into _____.
2. Aquatic birds have _____ that help them to swim in water.
3. Fir trees grow on _____.
4. Vulture's nest looks like a _____.
5. When seeds are put in wet soil, they start _____.

Q.II CHOOSE THE CORRECT ANSWER:

($\frac{1}{2} \times 8 = 4$ Marks)

1. _____ are our green friends.
a) Animals b) Birds c) Plants
2. The part of a bird's body that helps it to change its direction during flight is _____.
a) bones b) tail c) beak
3. An elephant showers water on its body by using its _____.
a) ears b) tail c) trunk
4. A new born bird has a lot of _____ feathers.
a) body b) flight c) down
5. _____ plants grow in water.
a) Desert b) Mountain c) Aquatic
6. We eat the _____ of spinach.
a) leaves b) roots c) stem



7. Birds build their nest by using _____.


- a) cement and sand b) sticks and twigs c) bricks and steel

8. _____ gives us oil.

- a) Mango b) Cactus c) Sunflower

Q.III IDENTIFY THE PICTURE AND LABEL IT :

($\frac{1}{2} \times 4 = 2$ Marks)



Q.IV MATCH THE FOLLOWING :

($\frac{1}{2} \times 6 = 3$ Marks)

- | | | |
|------------|-----------------|-----|
| 1. Whale | aquatic bird | () |
| 2. Mint | cricket bat | () |
| 3. Kiwi | desert plant | () |
| 4. Willow | herb | () |
| 5. Pelican | aquatic animal | () |
| 6. Cactus | flightless bird | () |

Q.V GIVE REASON :

($1 \times 2 = 2$ Marks)

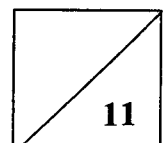
1. Aquatic birds have oil glands because _____
_____.

2. Lotus plant can grow only in water because _____
_____.

Q.VI NAME THE FOLLOWING :

($1 \times 4 = 4$ Marks)

1. Feathers that cover the body of a bird - _____.
2. The process by which plants make their own food - _____.
3. The place where a coconut tree grows - _____.
4. The bird that makes its nest in tree trunks - _____.



Q.VII WRITE TRUE OR FALSE. IF FALSE, WRITE THE CORRECT STATEMENT (3 Marks)

1. Tailorbird sews its nest with its beak. ()

_____.

2. The pine tree grows in water. ()

_____.

3. A properly watered plant stands upright and erect. ()

_____.

4. Bird's bones are hollow and filled with water. ()

_____.

Q.VIII COLOUR AND WRITE THE ANSWERS FROM THE GRID GIVEN BELOW (1x6=6Marks)

1. The muscles that help a bird to move its wings up and down - _____.

2. _____ is made from wood of plants.

3. _____ is a desert animal that needs little water to live.

4. They are called the kitchen of the plants - _____.

5. Wild animals drink water from _____.

6. _____ flies at low heights.

F	L	I	G	H	T	M	U	S	C	L	E	S
U	D	G	P	S	K	G	X	P	L	D	S	D
R	G	S	O	L	D	K	F	A	T	R	P	G
N	R	T	L	T	R	M	Y	R	D	K	K	C
I	S	D	E	S	E	R	T	R	A	T	L	A
T	P	X	A	V	L	X	O	O	H	D	K	R
U	Q	Q	V	N	F	Z	I	W	L	D	S	T
R	I	V	E	R	T	Y	K	T	T	R	P	C
E	Y	J	S	M	Y	I	L	M	D	T	G	X


Q.IX ANSWER IN A WORD OR A SENTENCE

(1x5=5 Marks)

1. A step to protect trees - _____.
2. Any one use of nest - _____.
3. Plants make their own food in the leaves with the help of _____, _____ and _____.
4. Plants with soft and green stems - _____.
5. Long and flat feathers that help a bird to fly - _____.

Q.X LOOK AT THE PICTURE AND SOLVE THE FOLLOWING RIDDLE

(½ x4=2 Marks)



I live in the _____
I store water in my _____
I am known as _____
Who am I? I am a _____

Q.XI ANSWER THE FOLLOWING QUESTIONS (Any Four)

(1x4=4 Marks)


1. Name two plants that grow in warm places.

2. How do plants get water ?

3. Circle the odd one and give reason.

(a) cotton (b) tea (c) banyan (d) wood

4. Write the names of the following:





5. Describe an aquatic animal with an example.

6. Name a bird that

(a) flies over long distances - _____.

(b) never makes its own nest - _____.

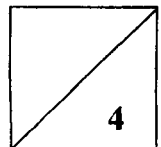
Q.XII ANSWER THE FOLLOWING QUESTIONS (Any Two)

(2 x2=4 Marks)

1. Describe a shrub and a tree. Give an example of each.

2. Distinguish between the nest of a sparrow and a weaver bird. (Write any one difference)

3. Draw, colour and label a cactus.



Q.XIII ANSWER THE FOLLOWING QUESTION (Any One)

(1x4=4 Marks)

1. How is the bird's body suited for flying?

2. How do we depend on plants?

Q.XIV LABEL THE FOLLOWING PICTURE (Any four)

($\frac{1}{2}$ x4=2 Marks)

