

INTERNATIONAL INDIAN SCHOOL, DAMMAM
UPPER PRIMARY SECTION
SUMMATIVE ASSESSMENT – 2 (MARCH– 2014)

CLASS: III	TIME: 2 hours
SUBJECT : <u>Environmental Science</u>	MARKS: ORALS = /10
Name: _____ Sec: _____ Roll No: _____	WRITTEN = /50
Instructions:	TOTAL = /60

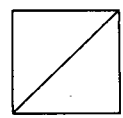
1. Read the questions carefully and attempt all.
2. Read your paper thoroughly before submission.

I. FILL IN THE BLANKS: (1x 5=5Marks)

1. Soil is the upper most layer of the earth's _____.
2. Manure and Fertilizers supply _____ to the crops.
3. Kidneys are parts of the _____ system.
4. _____ is an imaginary line between North pole and South pole.
5. We learn, think and act with the help of our _____ system.

II. CHOOSE THE CORRECT ANSWER: (1/2 x 6 = 3 Marks)

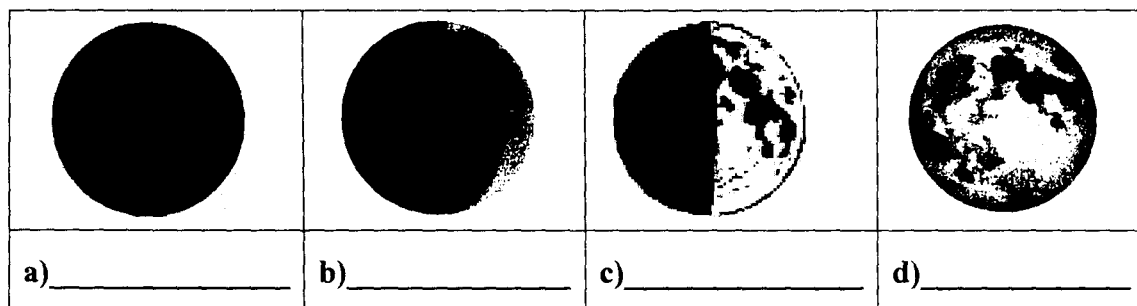
1. A group of tissue form _____.
a) an organ b) the cells c) a system
2. Our body has a frame work of more than _____ bones.
a) 250 b) 200 c) 300
3. _____ is used for making buildings.
a) Clay b) Sand c) Gravel
4. The moon takes _____ to change from New moon to Full moon.
a) 14days b) 28days c) 27.3 days
5. The soil which contains lot of humus _____.
a) sand b) loam c) gravel
6. Our body uses _____ to burn food and release energy.
a) carbon dioxide b) oxygen c) water



III. GIVE REASON:**(1x2 =2 Marks)**

1. Life is not possible on the moon because _____

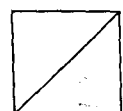
2. We should not cover our face while sleeping because _____

IV. LABEL THE DIFFERENT PHASES OF THE MOON:**(1/2x4 =2 Marks)****V. MATCH THE FOLLOWING:****(1/2x6 =3 Marks)**

1. Veterinary doctor	Model of earth	
2. Globe	Protection of animals	
3. Wildlife Sanctuaries	Digestive system	
4. Liver	Tasting pickle	
5. Tongue	Receives messages	
6. Brain	Injured animals	

VI. NAME THE FOLLOWING:**(1x5= 5 Marks)**

1. A heavenly body that revolves round a planet is called _____.
2. A large dome of muscle that contracts and flattens while breathing _____.
3. The movement of the earth that causes Summer and Winter _____.
4. The only planet to have water _____.
5. The vessels bringing blood towards heart _____.



VII. WRITE True OR False & CORRECT THE FALSE STATEMENT: (3 Marks)

1. The earth revolves around the sun from North to South. _____

2. More than two-thirds of our body is made up of water. _____

3. Moon is our nearest neighbour in space. _____

4. Factories make air clean. _____

VIII. ANSWER IN A WORD:

(1x5=5 Marks)

1. The system that helps to produce babies. _____

2. The hardest part of our body. _____

3. To make air clean and land green, we must plant them. _____

4. The soil which is used to make pots and toys. _____

5. The organ that pumps blood to all parts of our body. _____

IX. COLOUR & WRITE THE ANSWERS FROM THE GRID GIVEN BELOW: (1x5=5 Marks)

1. The Government of India started _____ to protect the tigers.

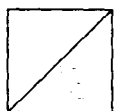
2. Shouting in the class causes _____ pollution.

3. Food from the mouth goes to _____.

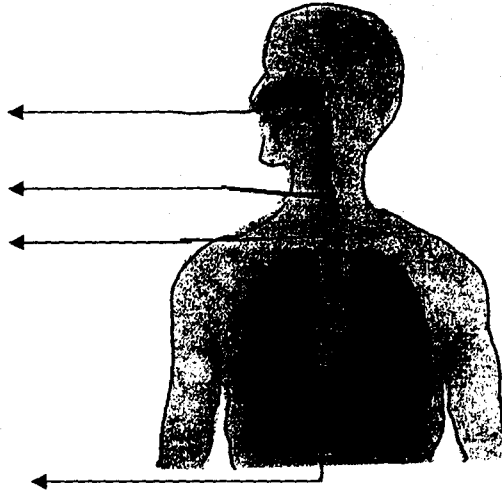
4. All sense organs send their messages to the brain through _____.

5. The moon _____ the light of the sun.

A	C	O	G	H	L	O	F	Q	R	F	E
P	R	O	J	E	C	T	T	I	G	E	R
M	Q	P	S	N	B	C	P	S	R	O	E
N	N	R	A	R	S	T	W	L	O	A	F
R	O	V	S	N	E	R	V	E	S	C	L
C	I	L	K	P	L	A	S	T	L	A	E
I	S	T	O	M	A	C	H	N	A	T	C
A	E	N	A	T	T	A	T	U	W	N	T
B	O	T	B	R	I	N	W	I	O	C	S




X. LABEL THE PARTS OF THE RESPIRATORY SYSTEM: (1/2x4 =2 Marks)



XI. LOOK AT THE PICTURES AND NAME THE MOVEMENT OF THE EARTH, THEY ARE CAUSED BY: (1/2x2 =1 Mark)



a)-----



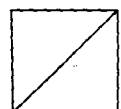
b)-----

XII. ANSWER THE FOLLOWING QUESTIONS: ANY FOUR (1x4=4 Marks)

1. What happens to the chest when you breathe in and breathe out?

2. Define pollution.

3. What is a system?



4. What do you mean by atmosphere?

5. What is Revolution?

XIII. ANSWER THE FOLLOWING QUESTIONS: ANY TWO (2x2=4 Marks)

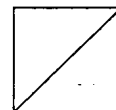
1. What is full moon?

2. Define constellation. Name any two constellations.

3. **Draw and label any two sense organs:**

a)

b)



XIV ANSWER THE FOLLOWING : ANY ONE

(1x3=3 Marks)

1) Write any three good breathing habits.

2) Write any three causes of water pollution.

XV. DRAW, COLOUR AND LABEL SOIL PROFILE:

(1x3=3 Marks)

