

INTERNATIONAL INDIAN SCHOOL DAMMAM

UPPER PRIMARY SECTION

SUMMATIVE ASSESSMENT – 2 (MARCH 2015)

CLASS – III

ENVIRONMENTAL STUDIES

TIME 2 hrs

Name : _____

MARKS : ORALS: _____/10

Section: _____

WRITTEN: _____/50

Roll No: _____

TOTAL: _____/60

Instructions: 1. Read the question carefully and answer according to the instructions.

2. Read and check your paper thoroughly before submission.

Q.I : FILL IN THE BLANKS :

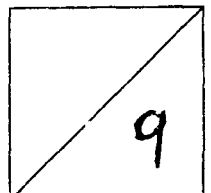
(1X5 = 5 Marks)

1. Gandhiji taught us to be _____ and follow the path of _____.
2. We use _____ to make direct call to people living in other countries.
3. A _____ of a state highlights the progress the state has made.
4. _____ produced by the motor vehicles causes air pollution.

Q.II : CHOOSE THE CORRECT ANSWER:

(1/2x8 =4 Marks)

1. _____ is a wireless instrument.
a) fax machine b) television c) mobile phone.
2. _____ is a regional festival.
a) Gandhi Jayanti b) Onam c) Christmas.
3. _____ is a cheapest means of communication.
a) postal system b) telegram c) fax
4. Most of the pollution is caused by _____.
a) animals b) humans c) plants



5. E-mails are sent through _____.

- a) letters b) computers c) parcels

6. A pin code has _____ digits.

- a) 8 b) 6 c) 7

7. A _____ is send from a telegraph office.

- a) fax b) postcard c) telegram

8. The sound produced by loud speakers causes _____ pollution.

- a) noise b) air c) soil

Q.III : MATCH THE FOLLOWING:

(1/2X4=2Marks)

- | | | | |
|-------------|---|-------------|--------|
| 1. Stamp | - | envelope | () |
| 2. Letter | - | telegram | () |
| 3. Pin code | - | postman | () |
| 4. Message | - | post office | () |

Q.IV : WRITE THE FULL FORM OF :

(1X2=2Marks)

1. PIN:- _____

2. STD:- _____

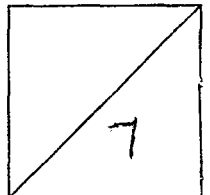
QV : READ THE CLUES AND SOLVE THE RIDDLES :

(1X3=3Marks)

1. I am the second President of India: _____

2. Plant me more, I will clean your air: _____

3. I take the salute from the parade on Republic Day : _____



QVI : NAME THE FOLLOWING :

(1X5=5Marks)

1. A courier mail service provided by the post office: _____
2. Name Gandhiji's Samadhi: _____
3. A natural resource used in large quantities and may soon get finished: _____
4. Name the first Prime Minister of India: _____
5. A festival of Sikhs: _____


Q.VII : UNDERSTAND THE RELATION AND COMPLETE THE FOLLOWING:

(1X2=2Marks)

1. Republic Day: **Rajpath** Independence Day: _____
2. Sewage : **Water** Smoke : _____

Q. VIII : IDENTIFY AND WRITE THE NAME BELOW:

(1X2=2Marks)



Q.IX : WRITE TRUE OR FALSE, IF FALSE CORRECT THE STATEMENT :

(1/2X6=3Marks)

1. We should throw household waste into rivers. _____

2. Bathing animals in rivers causes water pollution. _____

3. Postcards are a means of communication. _____

4. When we celebrate National Festivals in school, the manager of our school hoists the National Flag: _____

Q. X : GIVE REASON :

(1X3=3Marks)

1. We should not waste natural resources because _____

2. We should write PIN code on a letter because _____

3. Jawaharlal Nehru's birthday is celebrated as Children's Day because _____

Q. XI: FILL IN THE BLANKS AND COMPLETE THE GRID :

(1X 6=6Marks)

1. _____ Day is celebrated on 5th June.


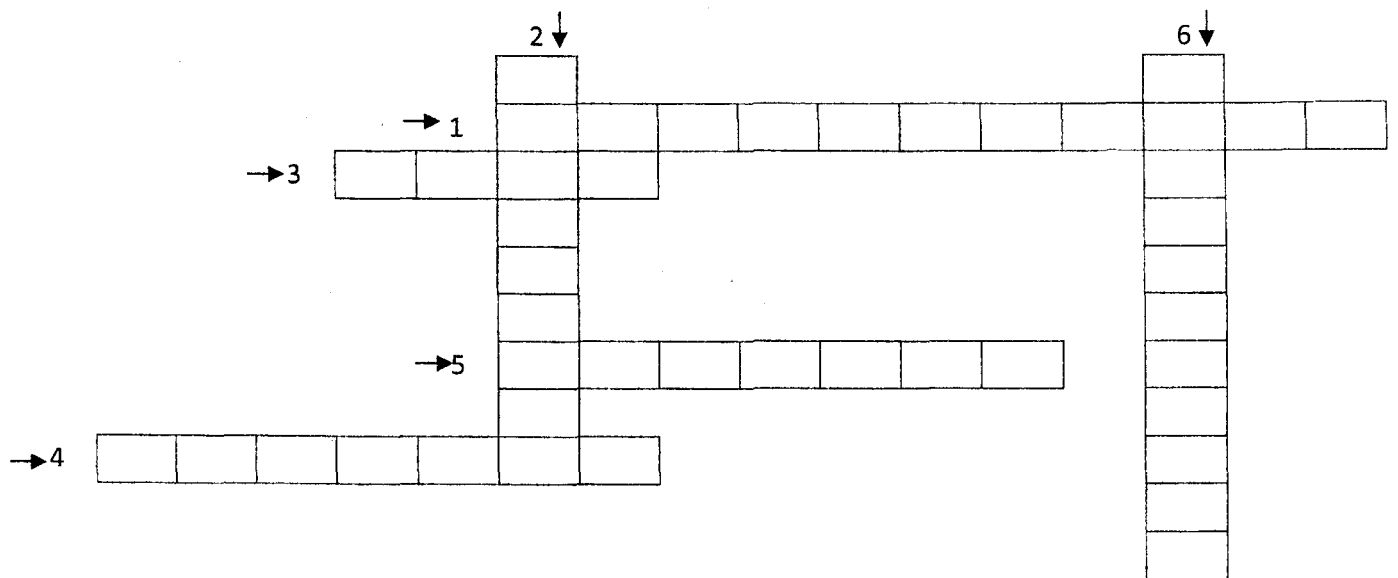
2. Teacher's Day is celebrated in this month. _____

3. The father of our nation is popularly known as _____

4. Holi is the festival of _____

5. Children who won this award will participate in Republic day. _____

6. Festivals are a time of _____



Q. XII: Write a short note on the following (Any 3) :

(2 x 3 = 6)

1. What are the causes of air pollution?

2. Define communication.


3. How do we celebrate festivals?

4. What are natural resources? Give two examples.

Q. XII): Answer the following (Any 1):

(3 x 1 = 3)

1. When and how is Teacher's Day celebrated?



2. Write any three causes of noise pollution.

Q. XIV. Answer in detail (Any 1)

(4 x 1 = 4)

1. How can we prevent water pollution?

2. Write a short note on Republic Day.

