

INTERNATIONAL INDIAN SCHOOL, DAMMAM

UPPER PRIMARY SECTION

SUMMATIVE ASSESSMENT –II (MARCH-2016)

CLASS: - III ENVIRONMENTAL STUDIES TIME:-2 HOURS

NAME: _____ ORALS _____ /10

SECTION: _____ WRITTEN: _____ /50

ROLL NO: _____ TOTAL _____ /60

Instructions:

1. Read the questions carefully and attempt all.
2. Read and check your paper thoroughly before submission

I. Fill in the blanks

(1 X 5 M)

1. The large dome of muscles that contracts and flattens while breathing is _____.
2. The moon _____ the light of the sun.
3. The air we breathe out contains _____ and _____.
4. Dirty air and water are called _____ air and water.
5. The meaning of the Greek word artery is _____.

II. Name the following

(1 X 5 M)

1. The fouling of natural resources by human activities. _____.
2. The system that helps to produce babies. _____.
3. It contains the dead remains of plants and animals. _____.
4. Organs that make us aware of our surroundings. _____.
5. The flat ends of the earth. _____.

III. Choose the correct answer

(½ X 6=3 M)

1. A group of tissues forms _____.
a) a system b) the cell c) an organ
2. Name the soil which is used for making buildings.
a) sand b) loam c) clay
3. _____ is the nearest neighbour of earth in space.
a) sun b) moon c) Venus
4. The phase of the moon comes after the new moon is _____.
a) half-moon b) crescent moon c) full moon
5. We learn, think and act with the help of _____ system.
a) nervous b) respiratory c) circulatory
6. The bottom layer of soil made of solid rocks is called _____.
a) top soil b) sub soil c) bed rock

IV. Match the following

(½ x 6=3M)

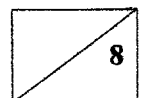
1	Two-third of our body	constellation	
2	Air pollution	Wind pipe	
3	Model of the earth	tongue	
4	Respiratory system	generators	
5	Tasting pickle	made of water	
6	Group of stars	globe	

V. Give reasons

(1x2=2M)

1. We mostly feel with our fingers because _____

2. Loam is the best soil for growing crops because _____



VI. Choose the answers from the grid and fill in the blanks given($\frac{1}{2} \times 10=5$ M)

1. The Government of India has started _____ to protect tigers.
2. A body that revolves round a planet is called a _____
3. Most of the pollution is caused by _____.
4. Our body uses _____ to burn food and energy.
5. The vessels bringing blood towards the heart _____

A	C	S	A	T	E	L	L	I	T	E	W
H	E	R	R	T	A	F	J	N	M	P	N
P	R	O	J	E	C	T	T	I	G	E	R
V	S	L	U	K	S	H	O	L	P	N	D
E	E	H	N	N	T	G	T	N	T	M	T
H	U	M	A	N	S	B	E	I	N	S	E
U	X	M	O	E	H	V	V	E	I	N	S
H	U	S	A	Y	S	X	C	H	E	S	V
G	O	S	G	E	O	X	Y	G	E	N	O

VII. Write true or false. Correct the false statement.

(3 M)

1. The brain receives messages and gives order for action. _____

2. Wild life sanctuaries are set up to protect certain plants. _____

3. Kidneys are part of excretory system. _____

4. One-fourth of the earth's surface is covered with water. _____

VIII. Define the following(1X 3=3 M)

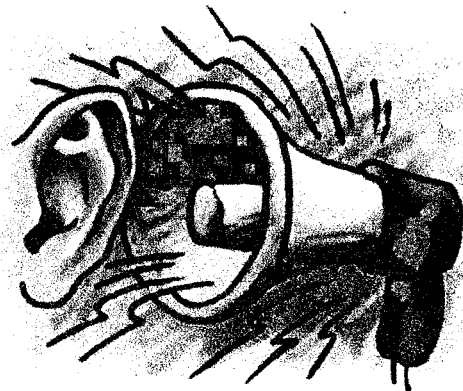
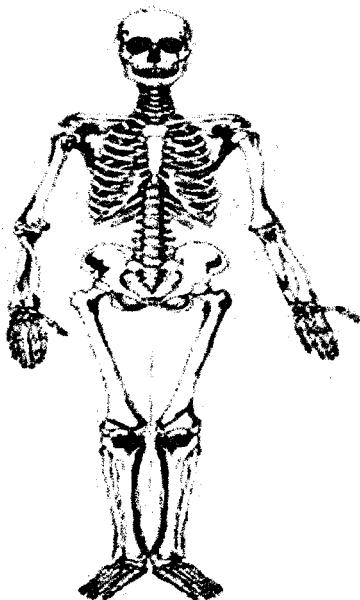

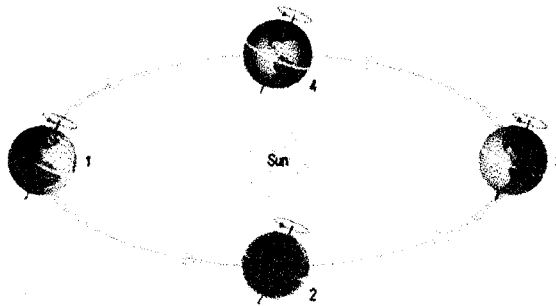
1. Atmosphere: _____

2. Breathing: _____

3. Natural Resources: _____

IX. Identify the pictures

($\frac{1}{2} \times 4 = 2$ M)



X. Answer the following (Any 3)

(2x3=6M)

1. What are the functions of blood?

2. Why do farmers add manures and fertilizers to the soil?

3. What is full moon?

4. Define digestion. Name any two organs of digestive system.

XI. Answer the following (any2)

(3X2) =6M)

1. Write any three good breathing habits.

2. Write any three causes of water pollution.

3. What are bones? List two functions of bones.

XII. Answer the following (Any 1)

(4x1=4 M)

1. What are the different kinds of soil? Explain

2. Differentiate between rotation and revolution of the earth.

Ans:- _____

XIII. Draw, Colour and label soil profile

(3 M)