

INTERNATIONAL INDIAN SCHOOL-DAMMAM

UPPER PRIMARY SECTIONS – CLASS III

EVS WORKSHEET FOR SA-1(JUNE -2016)

UNIT-2 WORK AND PLAY L-3 GAMES WE PLAY

NAME: _____ SEC: _____

I. Fill in the blanks :

1. _____ is the National Sport of India.
2. Games help us to _____.
3. _____ and _____ games have become very popular among children today.

II. Name the following Games:

1. Traditional games _____
2. Indoor games _____
3. Outdoor games _____
4. Adventuresports _____

III. Give reason.

1. Computer games should not be played for long hours
because _____

IV. In the Grid given below are hidden names of five games colour them and write down.

K	H	O	K	H	O	T
A	O	A	D	O	Y	E
B	C	P	R	P	A	N
A	K	Y	R	S	M	N
D	E	I	S	C	E	I
D	Y	E	U	O	D	S
I	A	K	A	T	A	E
T	M	M	L	C	E	O
E	D	A	P	H	S	Y

- 1) _____
- 2) _____
- 3) _____
- 4) _____
- 5) _____

UNIT 4- SHELTER L-5 MY HOUSE

I. Fill in the blanks :

1. A clean house is free from _____.
2. People who move from place to place live in a _____.
3. In Shimla houses are made of _____ or _____.
4. In olden times man lived on _____ and in _____.

II. Choose the correct answer

1. The kitchen waste goes into _____. (Streets / compost pit / roadside)
2. Stilt houses can be seen in _____. (Shimla / Kashmir / Assam)
3. In India most people live in _____. (Cities / villages / flats)
4. In Rajasthan people live in a _____ house, ^{the roof of} which is made up of _____ bushes. (Thorny / mud / bricks)
5. A _____ is a house on wheels. (Igloo / houseboat / caravan)

III. Write true or false, if false correct the statements.



1. Assam is a place having heavy rainfall _____.

2. Multistoreyed buildings are found in villages _____.

3. In Delhi roofs of houses are made of thorny bushes _____.

4. An elevator is used to reach our flat in a multistoreyed building _____.

IV. Identify and name the type of house



V. Identify the given pictures and fill in the blanks :



This is a _____

It is made of _____

It is used as a _____ shelter.



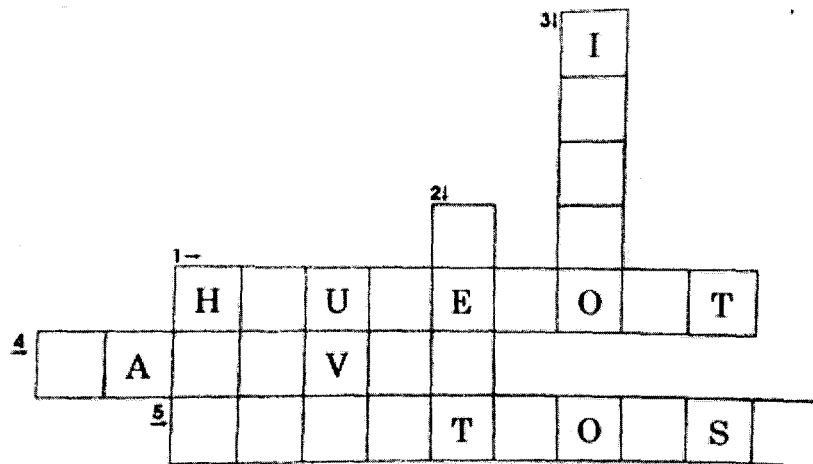
It is an _____. It is made of _____ and _____.
_____ live in it.



It is a _____ house.
It is made above the _____ level.
A _____ is used to reach them.

VI. Complete the following crossword with the help of given clues :

1. Kashmir
2. Temporary shelter
3. Made of snow and ice
4. A house on wheels
5. Assam



Unit 7 WATER L-9 Uses of Water

I. Fill in the blanks :

1. Water helps us to eliminate _____ matter from our body.
2. The main source of water is _____.
3. The most important way of conserving water is _____.
4. Water helps to _____ our food.
5. Rain water gets collected in _____ and ponds.
6. Water is _____.
7. Water is the home to many _____ and _____.
8. In cities the rain water is collected in _____.
9. Underground water is taken out with the help of _____ and _____.
10. _____ is another way by which water can be conserved.

II. Choose the correct answer

1. Water helps to carry _____ to different parts of the body.(food, waste, dust particles).
2. _____ need water to make their food.(Animals, Plants, Soil)
3. Liquids are measured in _____.(Centimetre, Litres, Kilogram)
4. Water dissolves _____ present in the soil. (dust particles, nutrient, waste material).

III. Name the following:

1. Any two rivers of India.

2. Any two uses of water.

3. Any two sources of water.

IV. Write true or false, if false write the correct statement

1. Recycling is an important way to conserve water. _____

2. We should use shower to bath. _____

3. We should reduce the wastage of water. _____

4. There is a shortage of clean drinking water in cities. _____

V. Match the following

- | | | |
|----------------------|--------------------|-----|
| 1. Water | Water Conservation | () |
| 2. River/Ponds/Lakes | The life-giver | () |
| 3. Recycling | Sources of Water | () |
| 4. Tube wells | Cities | () |
| 5. Filter Tanks | Underground Water | () |

VI. Give Reasons



1. Water should be stored only in clean containers because _____

2. Water should be recycled because _____

VII. Answer the following questions.

1. How is water supplied in cities? Or how do people living in cities get water?

VIII. Identify the following pictures



UNIT 14 NATURAL RESOURCES L-20 NATURE'S GIFTS

I. Fill in the blanks

1. Important natural resources are _____, water and soil.
2. The government of India started _____ to protect the tigers.
3. Things given to us by nature are called _____.
4. _____ need soil to grow.
5. _____ treats sick or injured animals.
6. To grow better crops, the soil should contain enough air, water and _____.

II. Answer in one word.

1. It is mixed with cement for making building _____
2. It is the home for many small animals _____
3. World environment day is celebrated on _____
4. Air becomes fresh by them _____
5. The soil that does not hold water _____

III. Match the following:

- | | | |
|----------------------------|----------------------|-----|
| 1. Humus | wildlife sanctuaries | () |
| 2. cattle bathing | minerals | () |
| 3. wild animals | bottom layer of soil | () |
| 4. bedrock | water pollution | () |
| 5. manures and fertilizers | loam | () |

IV. Give reasons:

1. Soil is very useful because _____

2. We fall sick because _____

3. The government of India has started project tiger to protect tigers because _____

V. State true or false ,if false correct the statement :

1. Air becomes fresh by trees. _____
2. Loudspeakers cause water pollution. _____
3. The earth is the only planet to have water. _____
4. Soil is the uppermost layer of the earth's crust. _____
5. We should throw garbage in a park or garden. _____

VI. Answer the following:

1. How can we prevent noise pollution?

2. How can we make our earth more clean and green?

