

INTERNATIONAL INDIAN SCHOOL, DAMMAM  
UPPER PRIMARY SECTION  
SUMMATIVE ASSESSMENT - I (JUNE - 2014)

CLASS - III  
SUBJECT - URDU

TIME: 2 hours

MARKS: ORALS = /10

WRITTEN = /50

TOTAL = /60

Name: \_\_\_\_\_ Sec: \_\_\_\_\_ Roll No: \_\_\_\_\_

I. Write missing letters for the following:

Marks:  $\frac{1}{4} \times 16 = 4$

	ج	ش			پ		ا
ز		ر	ذ		د	خ	
ع		ط	ض			س	ژ
	م			ک		ف	
				ے		ہ	و

II. Write the given alphabet in order:

Marks:  $\frac{1}{4} \times 16 = 4$

(۱) پ ٹ ت ب

\_\_\_\_\_

(۲) ح ج خ ج


\_\_\_\_\_

(۳) ڈ د ذ

\_\_\_\_\_

(۴) ز ژ ر ر

\_\_\_\_\_



III. Write what comes after:

Marks:  $\frac{1}{2} \times 4 = 2$

\_\_\_\_\_ ج (۲) \_\_\_\_\_ د (۳) \_\_\_\_\_ ث (۲) \_\_\_\_\_ پ (۱)

IV. Write what comes before:

Marks:  $\frac{1}{2} \times 4 = 2$

\_\_\_\_\_ م \_\_\_\_\_ گ (۲) \_\_\_\_\_ ش (۳) \_\_\_\_\_ ل (۲) \_\_\_\_\_ (۱)

V. Write Urdu alphabets for the following:

Marks:  $\frac{1}{2} \times 8 = 4$

\_\_\_\_\_ Meem (4) \_\_\_\_\_ Zwad (3) \_\_\_\_\_ Khai (2) \_\_\_\_\_ Te (1)  
\_\_\_\_\_ Noon (8) \_\_\_\_\_ Seen (7) \_\_\_\_\_ Swad (6) \_\_\_\_\_ Zal (5)

VI. Write given numbers in Urdu Numerals:

Marks:  $\frac{1}{2} \times 6 = 3$

	دو		تین
	آٹھ		پچھ
	پانچ		چار

VII. Write in Split Form for the following words:

Marks:  $\frac{1}{2} \times 10 = 5$

	(۶) جون		(۱) تاپ
	(۷) جيپ		(۲) باٺ
	(۸) چپ		(۳) ٺاڻا
	(۹) باجي		(۴) خان
	(۱۰) ناچا		(۵) تاج

VIII. Write in Joint Form for the following words:

Marks:  $\frac{1}{2} \times 10 = 5$

	(۶) ن اچ		(۱) بات
	(۷) ب اج ا		(۲) پ ا پ ا
	(۸) پ ان		(۳) ج ان
	(۹) ت اب		(۴) دا دا
	(۱۰) و ا د ي		(۵) ي ا د

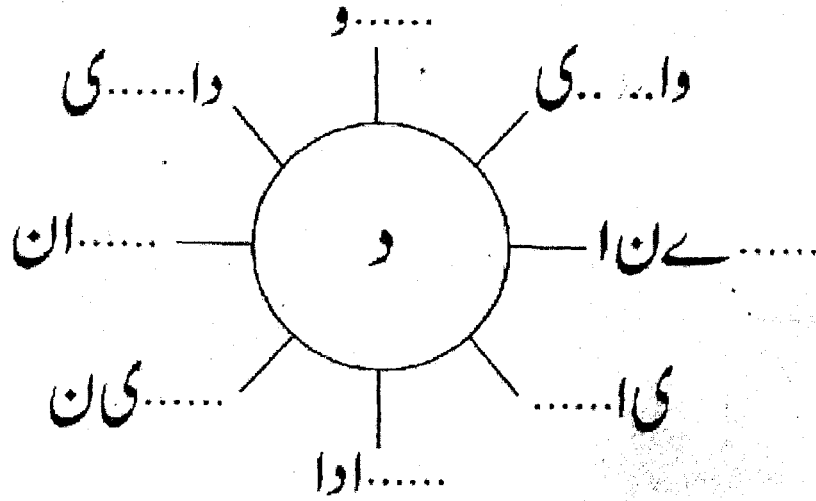
IX. Put Zabar, Zer and Pesh for the following words to make meaningful words:

Marks:  $\frac{1}{4} \times 10 = 2\frac{1}{2}$

بن	اب	تب	جب	نب
چپ	ان	پن	جن	دن

- X. Look at the circle, fill in the missing letter and make words from the following circle  
(Joint Form):

Marks: 1 x 8 = 8




	(۵)
	(۶)
	(۷)
	(۸)

	(۱)
	(۲)
	(۳)
	(۴)

- XI. Put dots for the following to make a meaningful word:

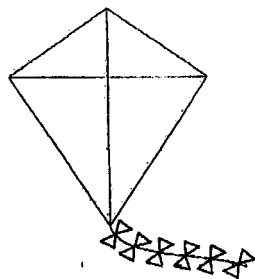







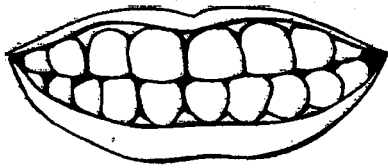
Marks:  $\frac{1}{4} \times 6 = 1\frac{1}{2}$

ما	حا	ما	ما	ما	حا
----	----	----	----	----	----




XII. Write first letter for the following:

Marks:  $\frac{1}{2} \times 10 = 5$




XIII. Name the following pictures: (Joint Form)


Marks: 1 x 4 = 4




(۲)



(۱)



(۶)



(۳)

