

INTERNATIONAL INDIAN SCHOOL, DAMMAM

CLASS -1 MATHS WORKSHEET NO: 6

PLACE VALUE STEP 1,2 and 3

NAME: _____

SEC: _____

DATE: _____

Q1. Write how many ones are there in each.



_____ ones




_____ ones



_____ ones




_____ ones




_____ one



_____ ones



_____ ones



_____ ones

O stands for ONES

and

T stands for TENS

TABLE OF ONES

1 one = 1

2 ones = 2

3 ones = 3

4 ones = 4

5 ones = 5

6 ones = 6

7 ones = 7

8 ones = 8

9 ones = 9

Q2. Fill in the blanks.

a) 7 ones = _____

f) 8 _____ = 8

b) 9 _____ = 9

g) 1 _____ = 1

c) 0 ones = _____

h) 2 _____ = 2

d) 4 ones = _____

i) 5 _____ = 5

e) _____ ones = 6

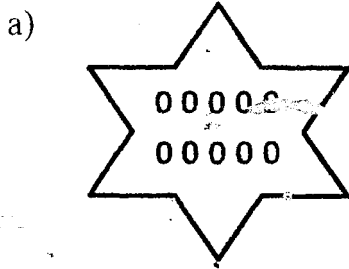
j) 6 ones = _____

NOTE:

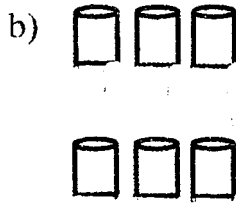
0 ones = 0

10 ones = 10 = 1 ten


Q3. Write how many tens are there in each.



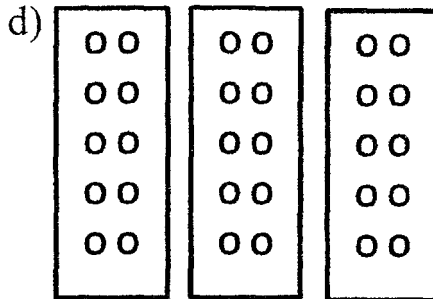
_____ ten



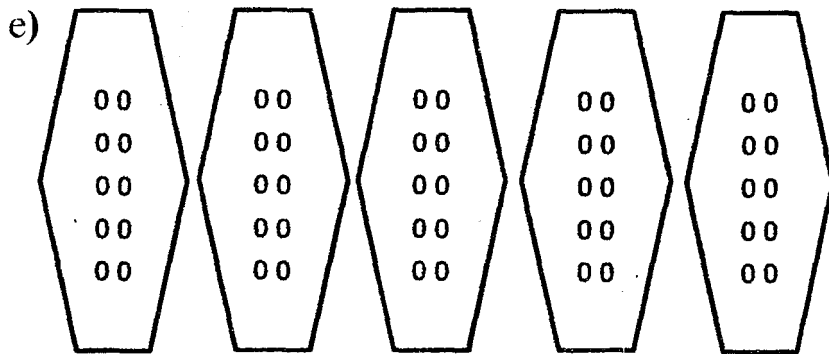
_____ tens



_____ tens



_____ tens



_____ tens

<u>TABLE OF TENS</u>	
1 ten =	10
2 tens =	20
3 tens =	30
4 tens =	40
5 tens =	50
6 tens =	60
7 tens =	70
8 tens =	80
9 tens =	90

NOTE:
 0 tens = 0
 1 ten = 10 ones

Q4. Fill in the blanks

a) 10 ones = _____ ten

f) 5 _____ = 50

b) 7 tens = _____

g) 1 _____ = 10

c) _____ tens = 80

h) 6 tens = _____

d) 10 _____ = 1 ten

i) 9 tens = _____

e) 0 tens = _____

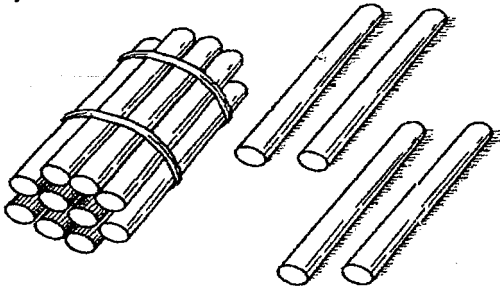
j) _____ tens = 20

INTERNATIONAL INDIAN SCHOOL, DAMMAM
MATHS WORKSHEET (PLACE VALUE) NO: 7

NAME: _____ CLASS: 1 _____ DATE: _____

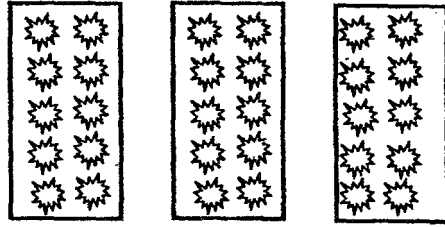
Q1) Write how many tens and how many ones are there in the following:

a)



_____ and _____

b)



_____ and _____

Q2) Split into tens and ones:

27	
Tens	Ones

8	
Tens	Ones

65	
Tens	Ones

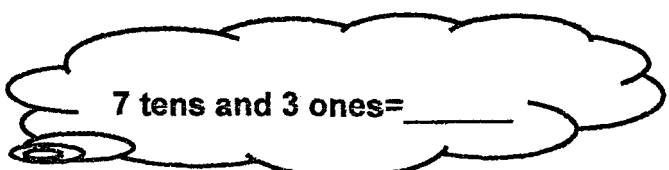
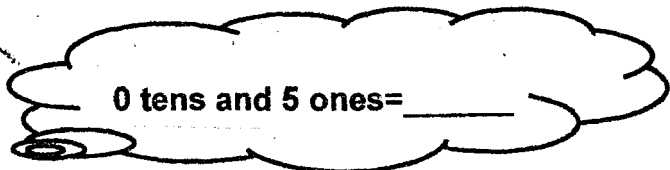
Q3) Fill in the blanks:

- a) 4 = _____ tens and 4 _____
- b) The place of 9 in 93 is _____
- c) _____ = 5 tens and 0 ones
- d) The place value of 6 in 56 is _____
- e) 72 = 7 _____ and 2 _____

Q3) Write the Place and Place Value of the following circled numerals:

	Numerals	Place	Place value
a)	1 6		
b)	9 8		
c)	7		

Q4) Join Tens and Ones and write the numeral:



Q5) Expand and solve:

(a) $18 =$ _____

$=$ _____ $+$ _____ $=$ _____

(b) $50 =$ _____

$=$ _____ $+$ _____ $=$ _____




(c) $9 =$ _____

$=$ _____ $+$ _____ $=$ _____

Q6) Draw, expand and solve:

<p>(a) 8</p> <p>$=$ _____ and _____</p> <p>$=$ _____ $+$ _____ $=$ _____</p>	<p>(b) 22</p> <p>$=$ _____ and _____</p> <p>$=$ _____ $+$ _____ $=$ _____</p>
---	--

Q7) Match the following:

a		20	
b	2 tens	1 ten and 2 ones	
c		3 tens and 5 ones	
d		6 ones	

INTERNATIONAL INDIAN SCHOOL ,DAMMAM

CLASS-1

MATHS WORKSHEET NO: 8

SUBTRACTION

NAME: _____ SEC: _____ DATE: _____

Guidelines for subtraction

Subtraction means "to take away".

We use the minus (-) sign for subtraction.

Example: $7 - 4 =$ _____

- (a.) Keep the first number in your mind, i.e. 7. .
- (b) Take the second number on your finger (open 4 fingers).
- (c) Count backwards and go on folding your fingers (i.e. before 7 ... 6, 5, 4, 3).
- (d) The number counted on the last finger is the answer. i.e. $7 - 4 = 3$.

TO TAKE AWAY.....



Q1. Subtract by striking out the pictures:



$6 - 3 =$ _____



$8 - 0 =$ _____

Q2. Subtract by drawing pictures:

a. $5 - 5 =$ _____

b. $9 - 4 =$ _____

INTERNATIONAL INDIAN SCHOOL - DAMMAM

Worksheet No: 9

Class-1

NAME: _____ SEC: _____ DATE: _____

MONTHS OF THE YEAR (For orals only)

There are twelve months in a year. They are:



I. Answer the following questions:

Q1. How many months are there in a year?

A1. There are _____ months in a year.

Q2. Which is the first month of the year?

A2. _____ is the first month of the year.

Q3. Which month comes after March?

A3. _____ comes after March.

Q4. Which is the fifth month of the year?

A4. _____ is the fifth month of the year.

Q5. Which month comes before November?

A5. _____ comes before November.

Q6. Name two months that come after July.

A6. _____ and _____ come after July.

II. Name the following:

1. The month that comes between May and July. _____

2. The present month. _____

3. The last month of the year. _____

4. The shortest month of the year. _____

INTERNATIONAL INDIAN SCHOOL –DAMMAM

MATHS REVISION WORKSHEET (2018-2019) CLASS - 1

NAME: _____ SEC: _____ DATE: _____

Q1. Fill in the missing numerals.

788				
	794			
				802
			806	

Q2. Write the next four numerals.

a. 806, _____, _____, _____, _____

b. 797, _____, _____, _____, _____

c. 599, _____, _____, _____, _____

d. 884, _____, _____, _____, _____

Q3. Write the number names for the following.

a. 83 - _____

b. 100 - _____

c. 88 - _____

d. 79 - _____

e. 92 - _____

Q4. Count backward from 19 to 10.

19										10
----	--	--	--	--	--	--	--	--	--	----

Q5. Write the numerals for the following.

a. Seventy four - _____

b. Ninety three - _____

c. Eighty - _____

d. Eighty six - _____

Q6. Subtract by striking out.



$$8 - 4 = \underline{\hspace{2cm}}$$



$$5 - 0 = \underline{\hspace{2cm}}$$

Q7. Subtract by drawing pictures.

a. $9 - 6 = \underline{\hspace{2cm}}$

b. $7 - 7 = \underline{\hspace{2cm}}$

Q8. Circle the numbers that has 6 in the tens place.

56	60	46	66	62
----	----	----	----	----

Q9. Fill in the blanks.

a) $68 = 6$ _____ and _____ ones. c) _____ ones = 10

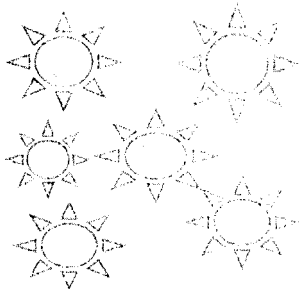
b) $74 =$ _____ tens and 4 _____. d) 6 _____ = 60

Q10. Write the place and place value of the circled numbers.

Numerals	Place	Place value
⑦8		
⑤		
③6		
9⑨		

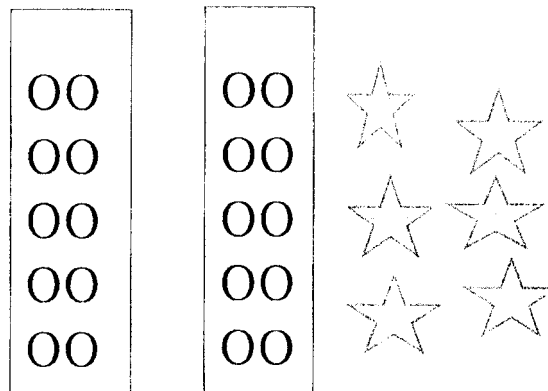
Q11. Observe and fill in the blanks

a.



_____ tens.

b.



_____ tens and _____ ones

Q12.Solve.

a. $76 + 8 =$ _____

c. $8 - 5 =$ _____

e. $63 + 6 =$ _____

b. $87 + 0 =$ _____

d. $18 - 6 =$ _____

f. $4 - 4 =$ _____

Q13. Solve the following.

a) 9

-4

b) 8

+1

c) 7

-7

d) 5

+4

e) T O

5 4

+2 3

f) T O

6 8

-3 6

g) T O

1 8

+7 0

h) T O

7 5

-5 5

Q14.Expand and solve.

a. $93 =$ _____

$=$ _____ $+$ _____ $=$ _____

b. $40 =$ _____

$=$ _____ $+$ _____ $=$ _____

Q15 . Split into tens and ones

Numerals	Tens	Ones
a. 63		
b. 5		
c. 99		
d. 12		

Q16. Circle the same numbers.

736	367	637	736
879	798	879	987

Q17. Draw,expand and solve.

<p>a. 24</p> <p>= _____</p> <p>= _____ + _____ = _____</p>	<p>b. 7</p> <p>= _____</p> <p>= _____ + _____ = _____</p>
---	--

Q18. Match the following.

a. Before 30	Take away	
b. 47	0	
c. 9 - 9	29	
d. Subtraction	4 tens and 7 ones	

FOR ORAL EXAM

Q1. Say the multiplication table of 3 & 10.

Q2. Answer the following questions in a sentence.

- a. How many months are there in a year? Name them.
- b. Which month comes after June?
- c. Which is the last month of the year?
- d. What is the face of the clock called?
- e. What is the long hand of the clock called?

Q3. What is the time shown in each clock?

