

INTERNATIONAL INDIAN SCHOOL, DAMMAM

UPPER PRIMARY SECTIONS

ANNUAL EXAMINATION 2017-2018

SUBJECT: E.V.S

CLASS: IV

DATE: \_\_\_\_\_

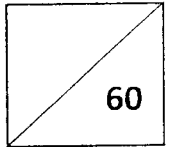
NAME: \_\_\_\_\_

TIME: 2 Hours

ROLL NO: \_\_\_\_\_

MAX. MARKS 60

SEC: \_\_\_\_\_

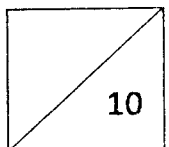


PART – A

I. Fill in the blanks with correct answer:

10 x 1 = 10

1. \_\_\_\_\_ is the process in which water vapour changes into water due to cooling.
2. \_\_\_\_\_ of grassland by animals leave the soil open to water and wind.
3. Waste should be disposed properly without harming the \_\_\_\_\_.
4. \_\_\_\_\_ are part of our heritage.
5. Animals that give birth and feed their young ones are called \_\_\_\_\_.
6. \_\_\_\_\_ is the chief source of water.
7. Members elected for Municipal Corporation are called \_\_\_\_\_.
8. \_\_\_\_\_ in is the process of natural decomposition of organic waste.
9. The two ends of the earth are called the \_\_\_\_\_.
10. Some taste buds stop working as we get \_\_\_\_\_.



II. **Choose the correct answer:**

8 x 1/2 = 4

1) The heat of the \_\_\_\_\_ dries up the puddle:

- a) sun      b) fire      c) moon

2) Dysentery is caused by:

- a) air pollution      b) water pollution      c) noise pollution

3) Which among this is not a taste?:

- a) sweet      b) cold      c) sour

4) Animals that sleep during the day and hunt at night are called:

- a) aerial animals      b) aquatic animals      c) nocturnal

5) Which of the following cannot be recycled?

- a) glass      b) metal      c) soil

6) Trees are the \_\_\_\_\_ of the earth.

- a) heart      b) lungs      c) eyes

7) Hot molten rock is called:

- a) volcano      b) lava      c) vent

8) Every village has a \_\_\_\_\_.

- a) Municipal corporation      b) Panchayat      c) Parliament

III. **Say True or False. If the statement is false, write the correct statement:** 8 x 1/2 = 4

1) Mercury and Venus do not have moon. \_\_\_\_\_

\_\_\_\_\_

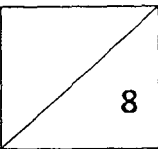
2) Ponds are bigger collection of water than lake. \_\_\_\_\_

\_\_\_\_\_

3) Smoke have harmful gases such as carbon monoxide and carbon dioxide. \_\_\_\_\_

\_\_\_\_\_

\_\_\_\_\_



4) The waste material that decomposes easily by natural process is called non biodegradable waste. \_\_\_\_\_

---

5) Plants absorb sound and help to reduce noise pollution. \_\_\_\_\_

---

6) Mayor is the Chairperson of the Municipal Corporation.

---

**IV. Circle the odd one out :**

**4 x 1/2 = 2**

- |    |               |                 |                |                |
|----|---------------|-----------------|----------------|----------------|
| 1) | a) crater     | b) lava         | c) magma       | d) sun         |
| 2) | a) pond water | b) tap water    | c) river water | d) sea water   |
| 3) | a) paints     | b) broken bulbs | c) chemicals   | d) leaves      |
| 4) | a) birds      | b) squirrels    | c) monkeys     | d) tree lizard |

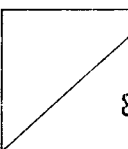
**V. Match the following: 6 x 1/2 = 3**

- |                    |                             |
|--------------------|-----------------------------|
| 1) Very hot rocks  | Diarrhoea _____             |
| 2) Organic waste   | Nitrogen oxide _____        |
| 3) Elected members | Garden litter _____         |
| 4) ORS             | Mantle _____                |
| 5) Braille         | Municipal Corporation _____ |
| 6) Acid Rain       | Coding system _____         |

**VI. Give reason:**

**2 x 1 1/2 = 3**

- 1) Planets don't collide each other.
- 
- 



2) We should not play loud music.

---

---

VII. Define:

2 x 1 ½ = 3

1) Planets

---

---

---

2) Waterfalls

---

---

---

VIII. Identify the following using clues:

5 x 1 = 5

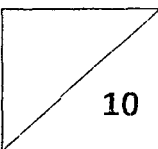
1) I am the biggest planet in the solar system, who I am ? \_\_\_\_\_

2) I am the head of the Panchayat, who I am ? \_\_\_\_\_

3) I live in a group called a pod, who I am ? \_\_\_\_\_

4) I am a river, I rise in Western Tibet in the Mansarovar,  
who I am ? \_\_\_\_\_

5) I am India's first satellite ,who I am ? \_\_\_\_\_



IX. Complete the grid and write the names in the blanks down: 5 x 1 = 5

Down

1) Water changes into water vapour \_\_\_\_\_

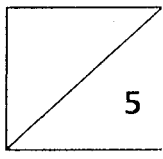
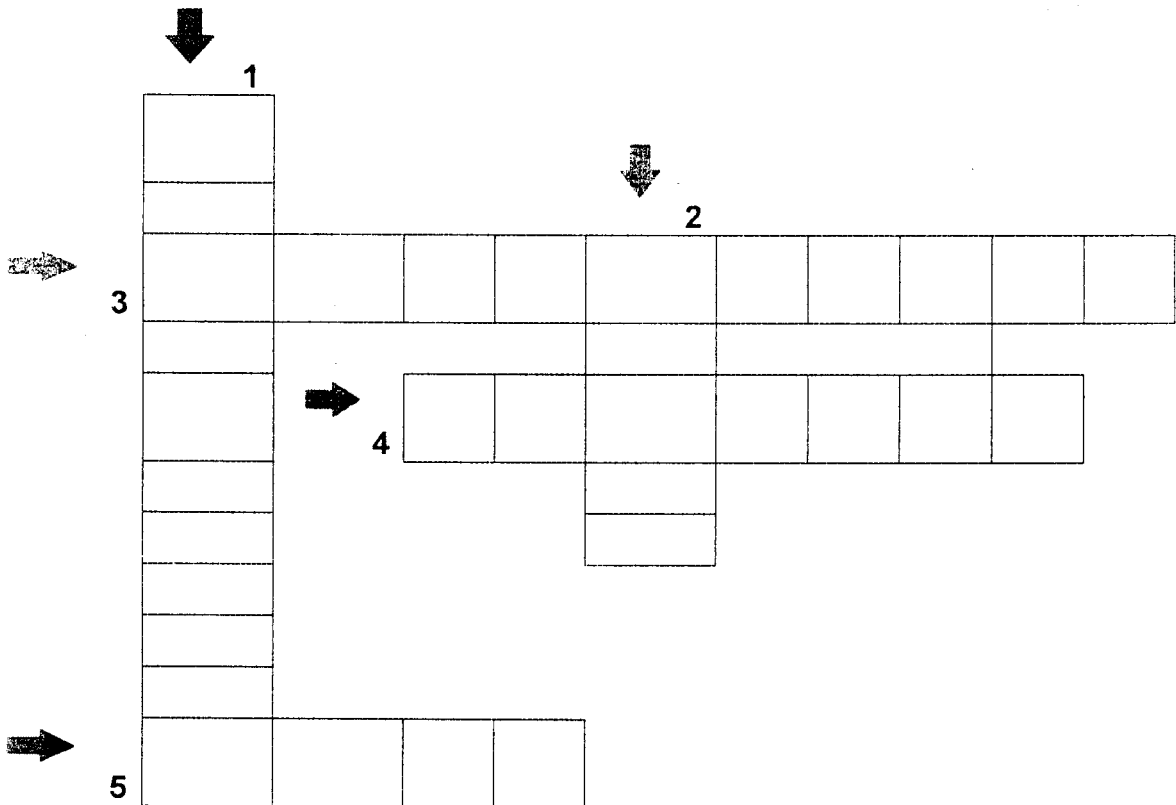
2) Path of the planet \_\_\_\_\_

Across

3) Scientist who study about stars \_\_\_\_\_

4) Natural environment of living things \_\_\_\_\_

5) Helps us to smell, breathe and taste \_\_\_\_\_

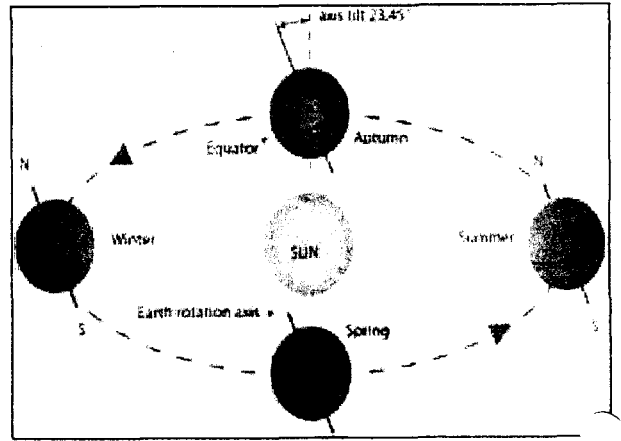


X. Identify the pictures :


4 x 1/2 = 2



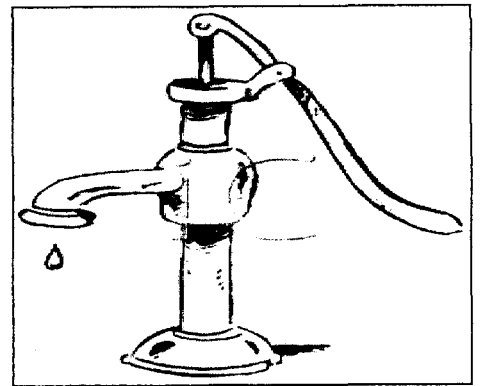
1. \_\_\_\_\_



2. \_\_\_\_\_



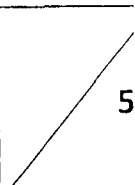
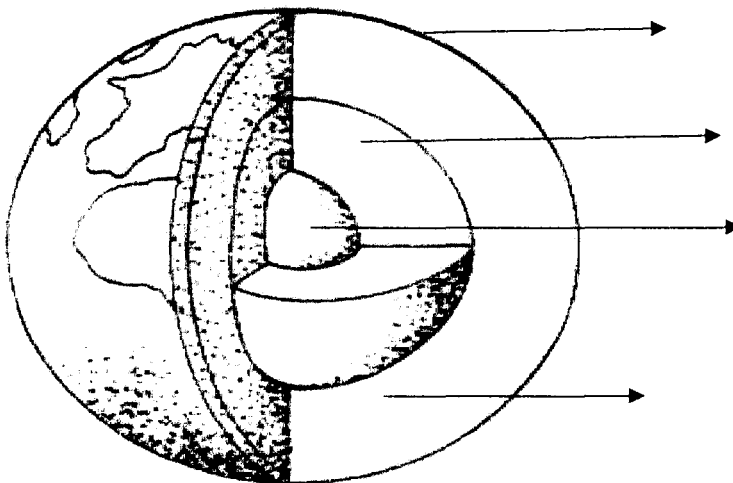
3. \_\_\_\_\_



4. \_\_\_\_\_

XI. Identify , colour and label the picture :

(1/2 X6=3)



**PART – B**  
**(To be done in the answer sheet )**

**I. Answer the following (any three):**

**3 x 2 = 6**

- 1) How was the Chipko Movement practiced and name any one women activists of the modern Chipko movement.
- 2) Why should we not damage plants?
- 3) How do we get salt from sea water?
- 4) Explain with two examples :
  - a) Aerial animals
  - b) Arboreal animals

**II. Answer the following (any two) :**

**2 x 3 = 6**

- 1) How can we check land pollution (any three points)
- 2) Write short note on equator.
- 3) a-How can we manage waste?  
b- How will we adopt zero waste frame of mind?

**III. Answer the following (any one):**

**1 x 4 = 4**

- 1) Differentiate between Rotation and Revolution? (any two points for each)

**OR**

- 2) What precaution should be taken to prevent the spread of water borne diseases? (any four points)

