

IV. Match the following.

(1/2 x 6 = 3 marks)

1.	Public Property	damages buildings and forests	
2.	Famous leaders of Chipko Movement	outer crust, mantle and core	
3.	Three main layers of the Earth	day and night	
4.	Agency that sets up fixed price shops	schools, parks, buses, etc	
5.	Rotation of the Earth causes	Sunderlal Bahuguna and Gaura Devi	
6.	Acid Rain	Municipal Corporation	

V. Name the following.

(1/2 x 6 = 3 marks)

1. The first artificial satellite launched by Russia on 4 October 1957.

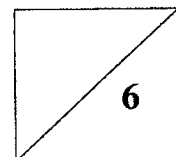
2. Smoke and fumes contain these harmful gases.

3. He is the head of the Panchayat.

4. The thin layer of the Earth mostly made up of rocks and soil.

5. This liquid in its pure form is a life giver.

6. The imaginary line drawn in the Southern Hemisphere.

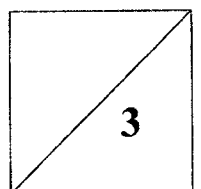


VI. Write the correct answer and encircle the correct answers in the grid.

(1/2 x 6 = 3 marks)

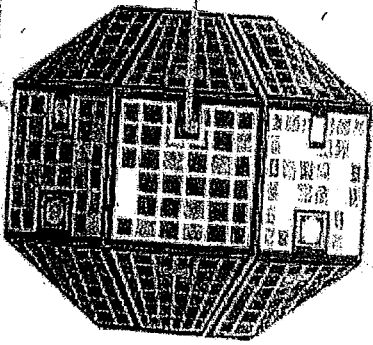
1. They are a part of our heritage. _____
2. Water and wind carry away this layer of soil. _____
3. This is the shape of the orbit. _____
4. These increase production but harm soil in the long run. _____
5. Animals living in water are killed due to this rain. _____
6. This agency supplies seeds and fertilisers to the farmers. _____

C	H	E	M	I	C	A	L	F	E	R	T	I	L	I	S	E	R	S	O
A	C	L	S	D	R	T	Y	M	P	B	A	Z	S	X	D	A	C	F	V
L	M	L	N	J	I	B	H	G	A	F	X	F	S	Z	E	C	U	I	B
B	C	I	V	U	M	R	M	O	N	U	M	E	N	T	S	I	A	J	Q
U	S	P	Z	I	P	T	N	V	C	F	H	S	T	H	H	D	B	H	W
I	C	T	A	V	M	I	F	C	H	E	C	J	Z	J	B	R	C	Y	E
F	B	I	I	O	A	P	S	E	A	C	T	K	V	G	N	A	D	T	T
D	U	C	F	D	F	L	E	A	Y	S	A	H	D	N	M	I	E	R	R
I	J	A	N	S	D	J	V	U	A	I	K	F	S	D	V	N	S	F	Y
B	G	L	V	L	A	M	U	M	T	O	P	L	A	Y	E	R	L	V	U



PART - B

A. Identify the following diagrams and answer accordingly. (1/2 x 4 = 2 marks)



1. It is the first satellite launched by India.



2. It is a movement to save forests.



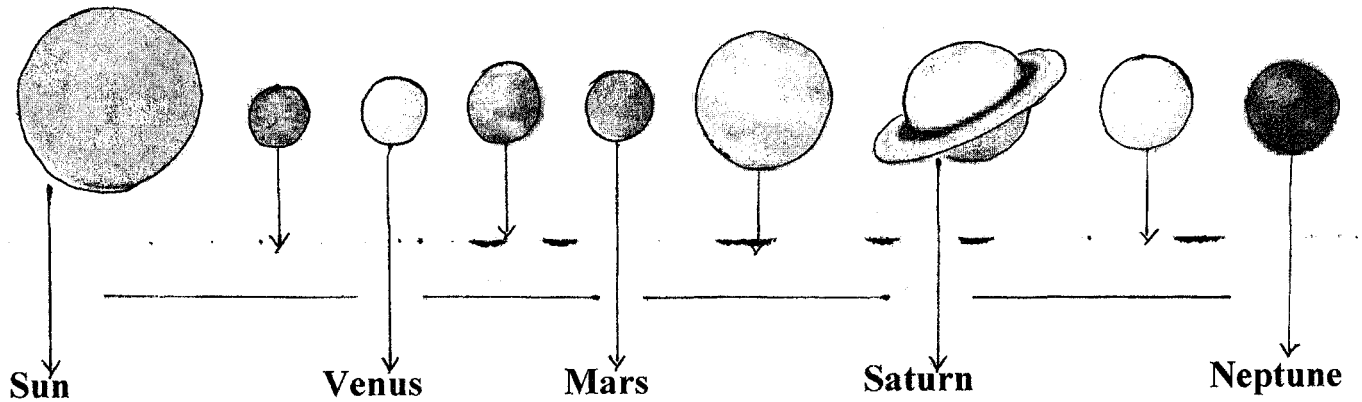
3. It is the planet on which we live.




4. Name the kind of pollution in the picture.

B. Name the planets of the Solar System.

(1/2 x 4 = 2 marks)



C. Name the two Public Properties in the following pictures. (1/2 x 2 = 1 mark)



PART – C

I. Answer the following in one or two sentences. (Any six only) (1x6=6 marks)

1. Who are Councillors?

2. Define Axis.

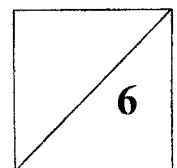
3. How was the Chipko Movement practised?

4. Write any one function of the NGO.

5. What is the main cause of air pollution?

6. Why are trees called the lungs of the Earth?

7. We do not see stars during the day. Why?



PART - D

To be done in the Answer sheet.

II. Give reasons. (Any two only)

(2 x 2 = 4 marks)

1. We should not play loud music.
2. The planets do not collide with each other while moving around the Sun.
3. We should not damage plants.

III. Answer the following questions. (Any four only)

(2 x 4 = 8 marks)

1. Write any four functions of the Municipal Corporation.
2. What is Pollution? State its four kinds.
3. What are Stars and what is Solar system?
4. What is Acid Rain?
5. Write a short note on Tropic of Cancer and Tropic of Capricorn.
6. Define Crust and Mantle.

IV. Answer in detail.

(1 x 3 = 3 marks)

1. Differentiate between Rotation and Revolution.

OR

2. How can we check land pollution and water pollution?

V. Draw the imaginary lines of the Earth and label them:

(1x3=3 marks)

