

**INTERNATIONAL INDIAN SCHOOL, DAMMAM**  
**UPPER PRIMARY SECTIONS**  
**SECOND TERM EXAMINATION - DECEMBER 2017**

**CLASS: IV**

**TIME: 2 Hours**

**SUBJECT: EVS**

**TOTAL MARKS: \_\_\_\_\_/60**

**Name: \_\_\_\_\_ Section: \_\_\_\_\_ Roll No: \_\_\_\_\_**

**Instructions:**

1. Read the Question Paper thoroughly.
2. Part – A, B & C to be done in the Question Paper.
3. Part – D to be done in the Answer Sheet.
4. Read the questions carefully and attempt all.
5. Read your paper before submission.

---

**PART – A**

**I. Fill in the blanks:**

**(½ x 10= 5 Marks)**

1. The people who live close to our house are called our \_\_\_\_\_.
2. A \_\_\_\_\_ makes its nest on the top of the tree.
3. \_\_\_\_\_ are pulled by horses.
4. A \_\_\_\_\_ is an elected body.
5. The \_\_\_\_\_ looks after and maintains the public property.
6. A \_\_\_\_\_ is an important part of the language of a map.
7. Partridges make their nest in the \_\_\_\_\_.
8. \_\_\_\_\_ should be given proper food, rest and shelter.
9. \_\_\_\_\_ are used for transportation of logs in forest and for jungle safari.
10. We should refuse to wear clothes made of animal \_\_\_\_\_.

---

**5**

**II. Choose the correct answer:**

**(½ x 10= 5 Marks)**

1. Agency which is not involved in community services:

- (a) panchayat (b) Municipal Corporation (c) NGO (d) banks

2. Which of these birds have talons?

- (a) crow (b) eagle (c) duck (d) partridge

3. Which of the following animal is called as a beast of burden?

- (a) elephant (b) ox (c) camel (d) horse

4. Public property is useful for

- (a) rich (b) poor (c) all of us (d) ministers

5. Which of the following is not a public property?

- (a) roads (b) letter boxes (c) swimming pools (d) street lamps

6. In neighbourhood services, which of the following is not available?

- (a) airport (b) school (c) post office (d) hospital

7. Cuckoo lays its eggs in the nest of this bird:

- (a) parrot (b) sparrow (c) owl (d) crow

8. In cold places, these are used as a means of transport.

- (a) camels (b) yaks (c) horses (d) elephants

9. Which of the following is not a task of Municipal Corporation?

- (a) hospitals (b) garbage disposal (c) primary schools (d) old-age homes

10. These birds make nest in the hollow of a tree or wall.

- (a) owl (b) tailorbird (c) weaver bird (d) woodpecker

**III. State True or False and correct the false statement: (½ x 10= 5 Marks)**

1. In linear scale, the line is divided into a number of parts and each part represents some ground distance. \_\_\_\_\_  
\_\_\_\_\_
2. Sparrows, finches and peacocks have sharp, strong and pointed beaks. \_\_\_\_\_  
\_\_\_\_\_
3. Animals provide us with food and are also used as a means of transport. \_\_\_\_\_  
\_\_\_\_\_
4. A Panchayat has 7 to 15 members with one-fourth representation of women. \_\_\_\_\_  
\_\_\_\_\_
5. The beak of the sword-billed hummingbird is shorter than its body. \_\_\_\_\_  
\_\_\_\_\_
6. In deep forests, reindeers are used as a means of transport. \_\_\_\_\_  
\_\_\_\_\_

**IV. Match the following:**

**(½ x 6= 3 Marks)**

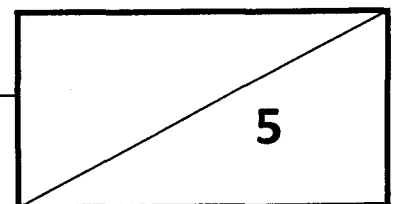
1.	parrots	Councilors or Corporators	
2.	pigeons	old-age homes	
3.	crow	Sarpanch or Pradhan	
4.	elected members	strong and hooked beak	
5.	NGO	short, hard and pointed beak	
6.	panchayat	perching birds	

V. Write the correct answer in the blank and encircle it in the grid:

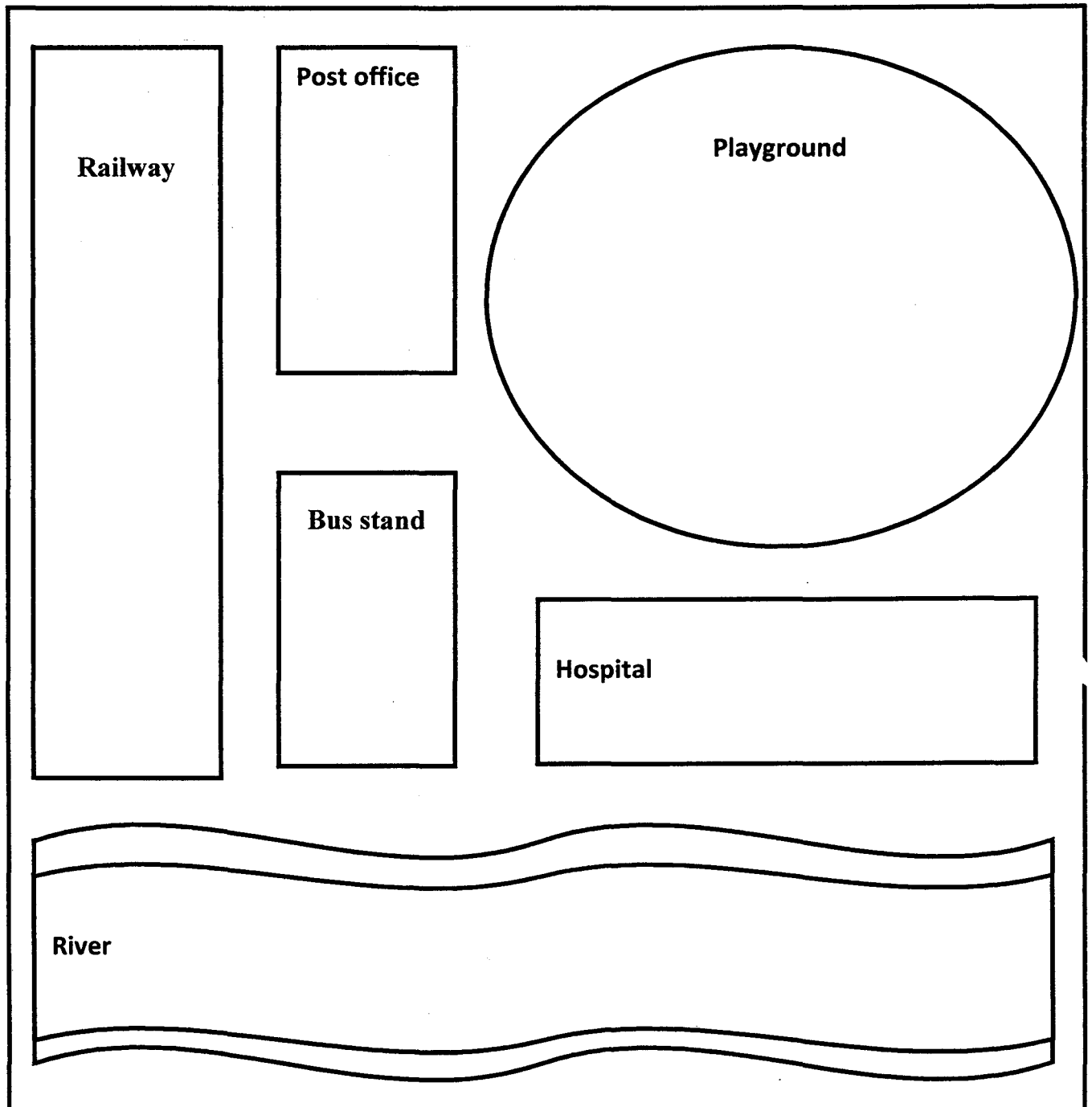
(1 x 5 = 5 Marks)

1. The head of a Municipal Corporation. \_\_\_\_\_
2. This service is found in our neighbourhood. \_\_\_\_\_
3. This bird makes big and strong nest with its entrance at the lower end of nest. \_\_\_\_\_
4. This bird has webbed feet. \_\_\_\_\_
5. This bird makes beautiful nest with leaves and thread. \_\_\_\_\_

D	B	T	A	I	L	O	R	B	I	R	D
A	C	D	S	T	B	Z	X	B	Y	I	J
M	S	M	Q	P	H	F	G	V	F	E	M
W	E	A	V	E	R	B	I	R	D	A	B
N	F	Y	G	M	R	C	B	X	Z	V	G
K	P	O	S	T	O	F	F	I	C	E	Y
U	M	R	W	M	N	Q	Q	W	E	R	T
H	P	T	A	I	Z	K	L	Y	T	O	S
N	R	J	N	O	W	P	X	Z	U	R	T




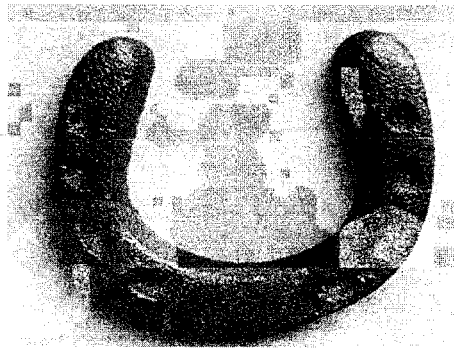

II. In the following sketch, draw any four symbols of the given names:  
( $\frac{1}{2} \times 4 = 2$  Marks)



2

PART - B

I. Identify the following diagrams and name them: (1 x 5 = 5 Marks)



**PART – C**

**I. Give reasons:**

**(1 x 5 = 5 Marks)**

1. Eagles have strong, sharp and hooked beaks \_\_\_\_\_  
\_\_\_\_\_

2. Wading birds have long legs \_\_\_\_\_  
\_\_\_\_\_

3. Animals like mules and donkeys are called beast of burden \_\_\_\_\_  
\_\_\_\_\_

4. Camel is called the 'Ship of the Desert' \_\_\_\_\_  
\_\_\_\_\_

5. We should not use clothes made of animal skin \_\_\_\_\_  
\_\_\_\_\_

**II. Name the following:**

**(1 x 5 = 5 Marks)**

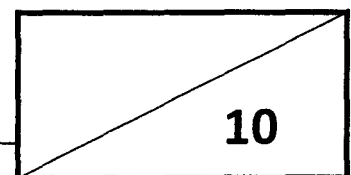
1. They have sharp, chisel-like beaks \_\_\_\_\_

2. Map making \_\_\_\_\_

3. They are a part of our heritage \_\_\_\_\_

4. It supplies seeds and fertilisers to farmers \_\_\_\_\_

5. They look after poor and orphaned children \_\_\_\_\_



**III. Answer the following in one or two sentences:**

**(1 x 5 = 5 Marks)**

1. Why do birds build nest?

---

---

---

2. What is a scale on map?

---

---

---

3. How are animals used to transport materials?

---

---

---

4. What materials do birds use for making their nests?

---

---

---

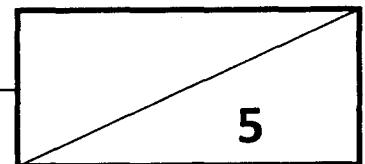
5. Why we should not damage plants?

---

---

---

---





**PART – D**

**(Do in the Answer Sheet)**

**I. Answer the following: (Any three) (2 x 3 = 6 Marks)**

1. How do parent birds look after their young ones?
2. What do you understand by the term NGO? Write any one function of it.
3. How should we take care of animals?
4. What is public property?

**II. Answer the following: (Any three) (3 x 3 = 9 Marks)**

1. Write any three functions of Panchayat.
2. How are beaks and claws of birds helpful to them?
3. Write a short note on types of scale.
4. Write any three functions of a Municipal Corporation.

---



**15**