

INTERNATIONAL INDIAN SCHOOL, DAMMAM

UPPER PRIMARY SECTION

SUMMATIVE ASSESSMENT – 2 (MARCH – 2015)

CLASS: V

TIME: 1 Hour

SUBJECT: GENERAL SCIENCE

MARKS: ORALS =

/5

Name: _____ Sec: _____ Roll No: _____

WRITTEN =

/25

Instructions:

TOTAL =

/30

1. Part A to be done in the Question Paper.
2. Part B to be done in the Answer Paper.
3. Read the question carefully and attempt all.
4. Read your paper thoroughly before submission.

PART-A

I Fill in the blanks:

{ $\frac{1}{2} \times 5 = 2\frac{1}{2}$ mark}

1. The _____ nerve connects retina to the brain.
2. Deficiency of iron causes _____.
3. The _____ column protect the spinal cord.
4. The muscles of the heart are _____ muscles.
5. _____ helps our body to get rid of undigested food.

II Write true or false:

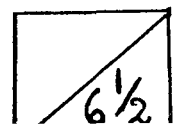
{ $\frac{1}{2} \times 5 = 2\frac{1}{2}$ mark}

1. The tongue detects the sense of smell. ()
2. A break in the bone is called a fracture. ()
3. Skeletal muscles work automatically. ()
4. Flat bones are found in the ribs. ()
5. Overcooking increases carbohydrates and vitamins in our food.()

III Name the following:

{ $\frac{1}{2} \times 3 = 1\frac{1}{2}$ mark}

1. Swelling of the throat glands. _____
2. The other name of communicable diseases. _____
3. A clean protective shield through which light enters the eye. _____



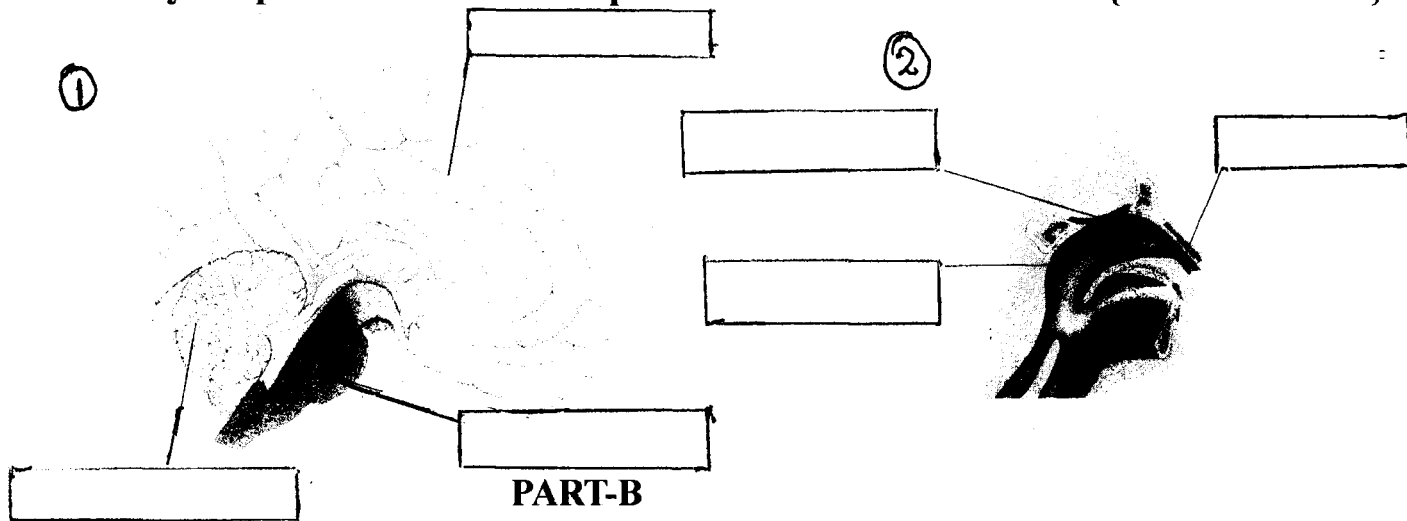
IV Match the following:

{ $\frac{1}{2} \times 5 = 2\frac{1}{2}$ mark}

- | | |
|-----------------------|------------------------------|
| 1. Vitamin A | Skeleton |
| 2. Rickets | Automatic action |
| 3. Framework of bones | Protects the internal organs |
| 4. Reflex action | Vitamin D |
| 5. Skin | Night Blindness |

V Identify the pictures and label the parts.

{ $\frac{1}{2} \times 2 = 3$ mark}



I Define the following:

{2mark}

1. Ligaments
2. Vitamins

II Answer the following: {ANY FOUR}

{ $\frac{1}{2} \times 4 = 6$ mark}

1. How do muscles work?
2. What is balanced diet?
3. How can you take care of your eyes? Write any 3 point.
4. How are communicable diseases spread?
5. Name any three types of movable joints.

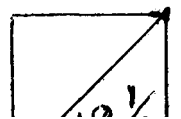
III Give reasons: {ANY TWO}

{ $\frac{1}{2} \times 2 = 3$ mark}

1. All food articles should be properly covered.
2. We should do regular exercise.
3. Food does not taste good when we suffer from common cold.

IV Distinguish between sensory nerves and motor nerves.

{2 mark}



INTERNATIONAL INDIAN SCHOOL –DAMMAM
SUMMATIVE ASSESSMENT – II – March - 2015
SOCIAL SCIENCE CLASS- V

Name: _____
Roll No: _____
Section: _____

Time: 1hr
Marks: Orals: /5
Written: /25
Total: /30

General Instructions:

1. Read the questions carefully before you answer.
2. Attempt all questions
3. Check your paper before submission

SECTION-A

(To be done in the question paper itself)

I. Fill in the blanks:

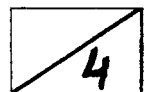
(1/2X4=2)

1. Division of people into groups of different social status is known as _____.
2. The multi-party system is a very important part of our _____.
3. Gandhiji asked the people to "DO or DIE" during the _____ movement.
4. The _____ is a permanent body. It cannot be dissolved.

II. Write the correct dates and events for the following:

(1/2X4=2)

1. Jallianwala Bagh Massacre _____
2. Indian National Congress formed _____
3. _____ 1945
4. _____ 1905



III. Give one word answer:

(1/2X5=2 1/2)

1. The early leaders of the congress were known as the _____.
2. Love and devotion for one's country _____.
3. Group of people having common aims and ideas _____.
4. Law making body in India is known as _____.
5. The whole country has been divided into _____.

IV. Write the famous personalities:

(1/2X4=2)

1. Leader of Indian National Army _____.
2. The soldiers declared the last Mughal Emperor as their leader _____.
3. The First President of Independent India was _____.
4. The Indian National Congress was started by an Englishman named _____.

V. State True or False:

(1/2X3=1 1/2)

1. Purna Swaraj means complete Independence. ()
2. Educated Indians introduced many social and religious reforms. ()
3. The Judges of the Supreme Court are appointed by the Prime Minister. ()

VI. Identify the following pictures:

(1/2X4=2)



1. _____ was a Revolutionaryist. 2. _____ present Speaker of Lok Sabha





3. _____ was a freedom fighter.



4. _____ was a social reformer.

SECTION-B

(To be done in the answer sheet)

VII. Define the following (Any two)

(1X2=2)

- 1.Coalition Government
- 2.Mutiny / Revolt
- 3.Racist Policy

VIII. Answer briefly (Any two)

(11/2X2=3)

1. Who elects the President of India?
2. Why did the English decide to partition Bengal?
3. Write any three names of leaders who led the First War of Independence.

IX. Write short note on (Any one)

(1X2=2)

1. Jallianwala Bagh Massacre
2. The Judiciary

X. Answer in details (Any two):

(2X3=6)

1. How were the Moderates different from the Radicals?
2. Write three differences between the Lok Sabha and the Rajya Sabha.
3. What factors helped the English to suppress the First War of Independence?

