

INTERNATIOANL INDIAN SCHOOL, DAMMAM
UPPER PRIMARY SECTIONS
TERM I EXAM 2017-2018
CLASS - V

SUBJECT: SOCIAL SCIENCE

DATE: 9th July 2017

Name: _____

Time: 1 Hour

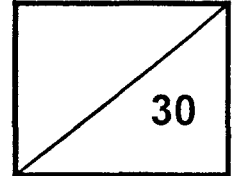
Roll No. _____

Max. Marks 30

Sec: V - _____

Instructions

- * Read the questions carefully and attempt all.
- * Read the paper thoroughly before submission.
- * Do Part - A and Part - B in the Question paper.
- * Do Part - C in the Answer Sheet.

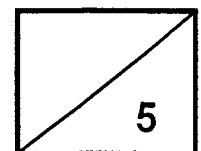


Part - A

I. **Fill in the blanks:**

1/2 x 10 = 5 Marks

1. The highest point of a mountain is called a _____ or a _____.
2. Changes in weather conditions give rise to _____.
3. _____ is the fifth largest country in Asia.
4. Places near the coast have a _____ climate.
5. Most deserts are located on the _____ side of continents and on the leeward side of mountains.
6. Water needed for irrigation and domestic use is obtained by _____ sea water.
7. Saudi Arabia is one of the largest producers of _____ in the world.
8. _____ and _____ deposited by rivers lead to the formation of plains.



II. Match the following:

$\frac{1}{2} \times 6 = 3$ Marks

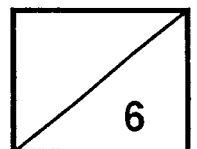
- | | |
|-----------------|----------------------|
| 1. Nomads | a) Extreme climate |
| 2. Frigid Zone | b) Old mountains |
| 3. Delhi | c) South America |
| 4. Rounded Peak | d) Saudi Arabia |
| 5. Andes | e) North America |
| 6. Rockies | f) Very cold weather |

III. Find the answers for the following in the grid given below:

$\frac{1}{2} \times 6 = 3$ Marks

- Ancient civilization came up in the _____.
- The cool air over the sea is _____.
- The nomadic people of Saudi Arabia are called _____.
- The largest and the highest plateau in the world is the _____ plateau.
- The earth is divided into _____ heat zones.
- The capital of Saudi Arabia is _____.

S	E	A	B	R	E	E	Z	E	O	R
R	E	H	E	J	R	P	L	I	R	I
P	B	E	D	O	U	I	N	S	T	Y
L	O	P	O	Q	R	T	Z	E	K	A
A	T	I	B	E	T	A	N	T	L	D
I	C	L	I	M	B	T	E	A	K	H
N	K	T	H	R	E	E	L	N	L	T
S	N	R	A	G	H	A	S	R	O	A



Part - B

I. Write the definition: (Any 3)

1 x 3 = 3 Marks

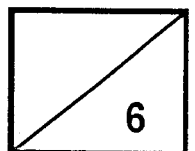
1. Wadi: _____

2. Humidity: _____

3. Canyon: _____

4. Mouth: _____

II. Draw, colour and label the Heat Zones of the Earth: 3 Marks



Part - C (Do in the Answersheet)

I. Give reason: (Any 2)

(1½ x 2 = 3 Marks)

1. Ludhiana is hotter than Shimla even though they are at the same distanced from the Equator. Why?
2. Men in Saudi Arabia mostly wear white clothes and keep their heads and necks covered. Why?
3. Jammu and Kashmir is a thinly populated state. Why?

II. Write in one sentence: (Any 3)

1 x 3 = 3 Marks

1. Which is the most important animal in Saudi Arabia?
2. How is a delta formed?
3. What are rapids?
4. Name the canyon found in the Colorado Plateau.

III. Write short answers: (Any 2)

2 x 2 = 4 Marks

1. What is the importance of plateaus?
2. Describe the climatic conditions in Torrid Zone.
3. Why is there a shortage of water in Saudi Arabia?

IV. Write answer in detail: (Any 1)

3 Marks

1. Describe the life of the Bedouins.
2. How are mountains useful to us?

