

International Indian School Dammam
Model Examination January 2018
Subject Geography Class XII

Time : 3 hours

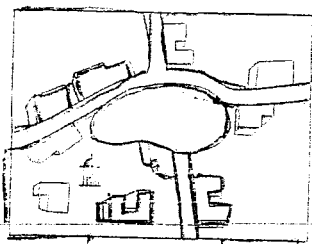
M.M 70

SET : A

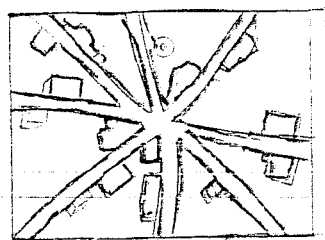
General instructions :

- All questions are compulsory.
 - Questions from 1 to 7 are of very short type answer and carry 1 marks each.
 - Questions from 8 to 13 are short type answers and carry 3 marks each.
 - Questions from 14 to 20 are long type answer and carry 5 marks each.
 - Question no 21& 22 are related to identification of geographical features on provided map of world and location and labeling on India map respectively.
-

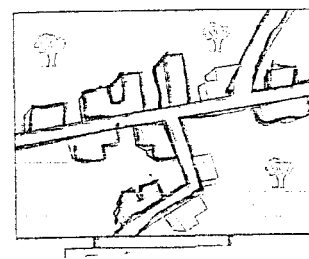
1. Name the second largest producer of sugar in India ? 1
2. What are naval ports ? Give one example of naval ports. 1
3. "There is a high yield of rice crop in the areas of Punjab and Haryana as compared to traditional rice growing region in India." Give reasons. 1
4. Give the meaning of 'clustered rural settlement of India. 1
5. Which highway connects North America and South America. 1
6. Give two example of non conventional sources of energy. 1
7. What do you understand by 'Ageing population'? 1
8. What are the three school of thought that has emerged in human geography in 1970s and made this subject more relevant to the socio-political reality in subject matter. 3
9. Differentiate between wet land farming and dry land farming. 3
10. Define the term 'Trade'. Mention the characteristic features of the two categories of trading centers ? 1+2=3
11. 'Urban Waste disposal is a serious problem in India.' Discuss. 3
12. What is a 'mineral' ? Name two important source of nuclear energy, abundantly found in India. Mention any two main characteristics of mineral resources. 1+1+1=3
13. Study the given diagram given below and answer the questions that follow.



A



B



C

13.1. Name the pattern of rural settlement as indicated A, B and C.

13.2. Write one characteristic feature of each.

$$\frac{1}{2} + 1\frac{1}{2} = 3$$

14. What is subsistence agriculture? Name its two categories. State three main features of each category. 1+1+3=5

15. Why are sugar factories located within the cane producing areas in India? Examine the significance of sugar industry to the economy of the country and also give a brief account of the major sugar industrial belt in India. 2+3=5

16. Describe the geographical, economic and strategic importance of the Suez Canal. 5

17. Why is conservation and management of water necessary in India? Mention several methods to conserve water resources. 2+3=5

18. Explain how the difference in natural resources, size of population and stages of economic development form the basis of international trade? 5

19. Discuss any five challenges due to the higher proportion of adolescent population in India though regarded as the youthful population having high potential. 5

20. How has the introduction of the Indira Gandhi Canal Irrigation System influenced the dry land of Rajasthan and the environmental condition of the region both positively and negatively? 5

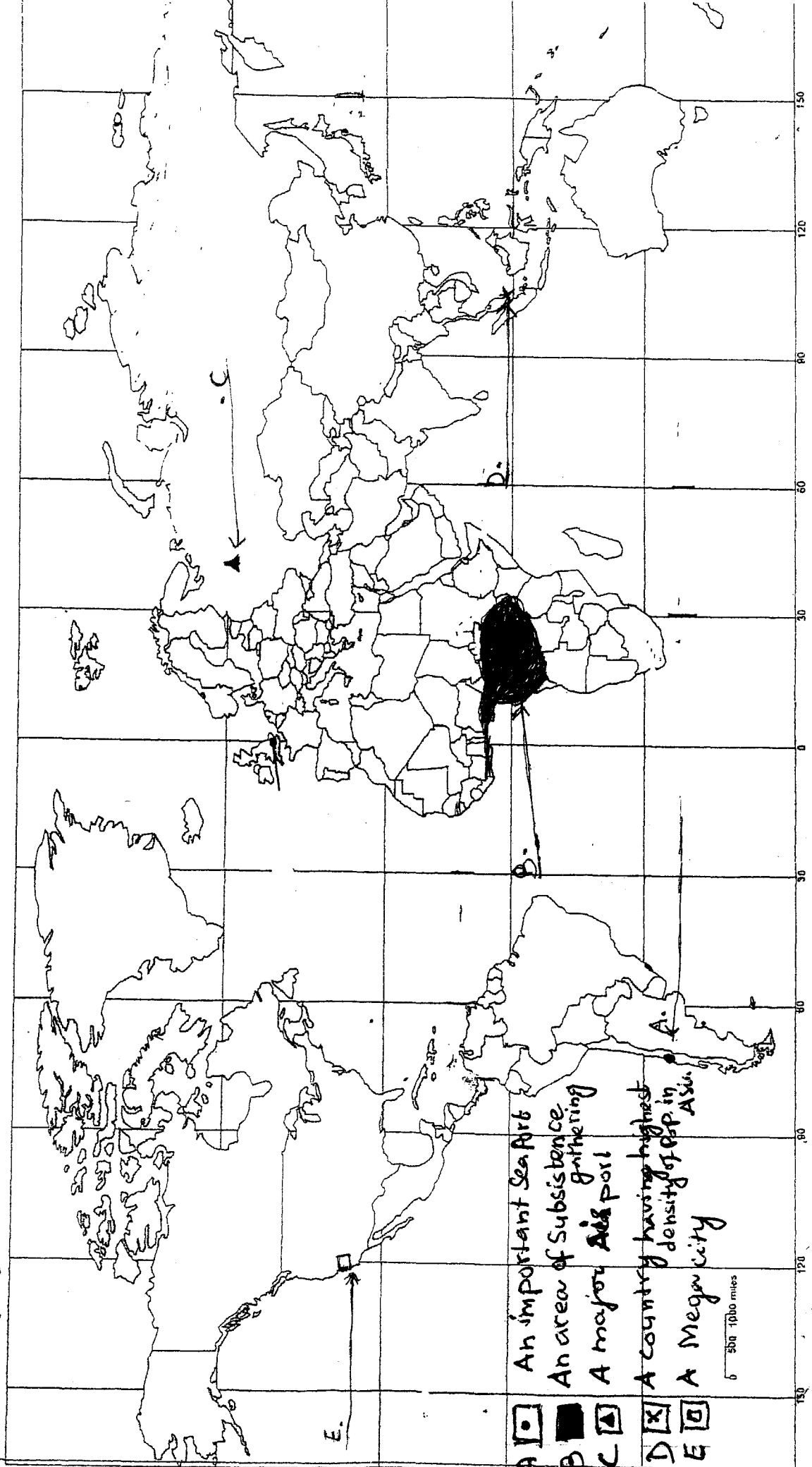
21. Identify the five geographical features shown on the political outline map of the world as A, B, C, D and E and write their correct names on the lines marked near them with the help of the following information. 5X1=5

- A. An important sea port
- B. An area of subsistence gathering
- C. A major air port
- D. The country having the highest density of population in Asia
- E. A mega city

22. Locate and label the following features with appropriate symbols on the given outline political map of India. 5X1=5

- (i) An integrated Iron and Steel Plant in Odisha
- (ii) The Northernmost International Airport
- (iii) Largest sugar cane producing State
- (iv) Only lignite coal field
- (v) An Software Technology park in Madhya Pradesh

SET A
Q. 26, 1



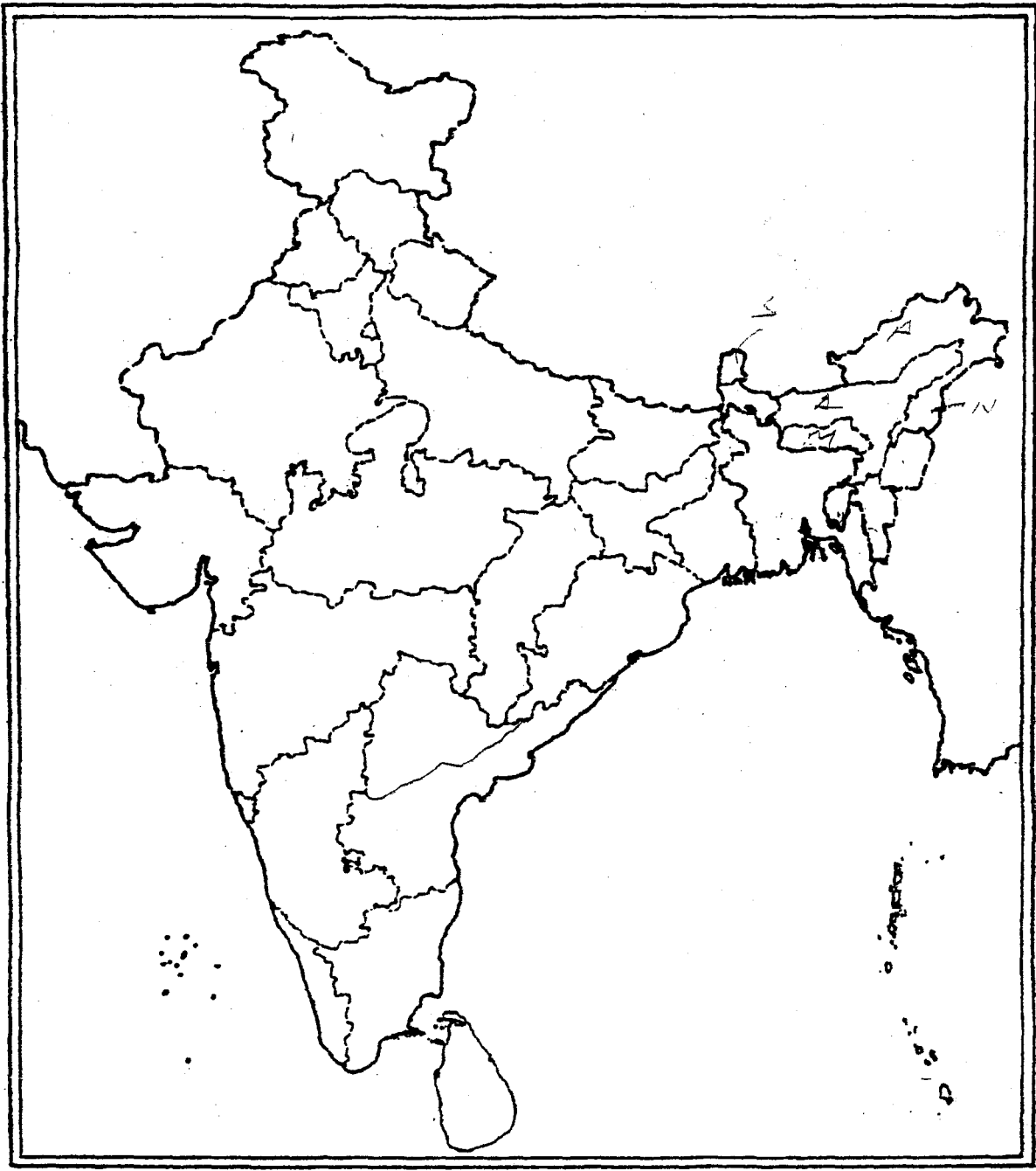
- A An important sea port
- B An area of subsistence gathering
- C A major air port
- D A country having highest density of pop. in Asia
- E A megacity

500 1000 miles

SET 'A'
Q.No 22

Outline Map of India (Political)

भारत का रेखा-मानचित्र (राजनीतिक)



International Indian School Dammam
Model Examination January 2018
Subject Geography Class XII

Time : 3hours

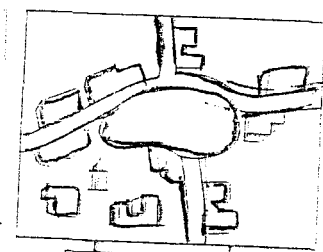
SET : B

M.M: 70

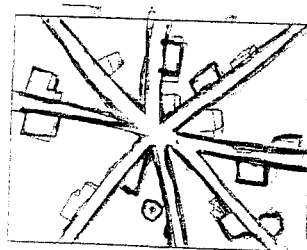
General instructions :

- All questions are compulsory.
 - Questions from 1 to 7 are of very short type answer and carry 1 marks each.
 - Questions from 8 to 13 are short type answers and carry 3 marks each.
 - Questions from 14 to 20 are long type answer and carry 5 marks each.
 - Question no 21& 22 are related to identification of geographical features on provided map of world and location and labeling on India map respectively.
-

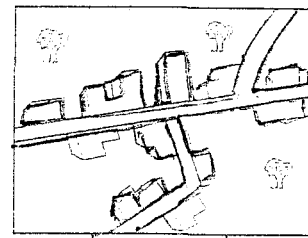
1. Name place which is known for the hub of petrochemical industry in India. 1
2. Which highway connects North America and South America. 1
3. What are naval ports ? Give one example of naval ports. 1
4. Give two example of conventional sources of energy. 1
5. " There is a high yield of rice crop in the areas of Punjab and Haryana as compared to traditional rice growing region in India." Give reasons . 1
6. - Give the meaning of 'Hamleted rural settlement of India. 1
7. What do you understand by 'Aging population' ? 1
8. Study the given diagram given below and answer the questions that follow .



A



B



C

8.1 Name the pattern of rural settlement as indicated A , B and C.

8.2 Write one characteristic features of each.

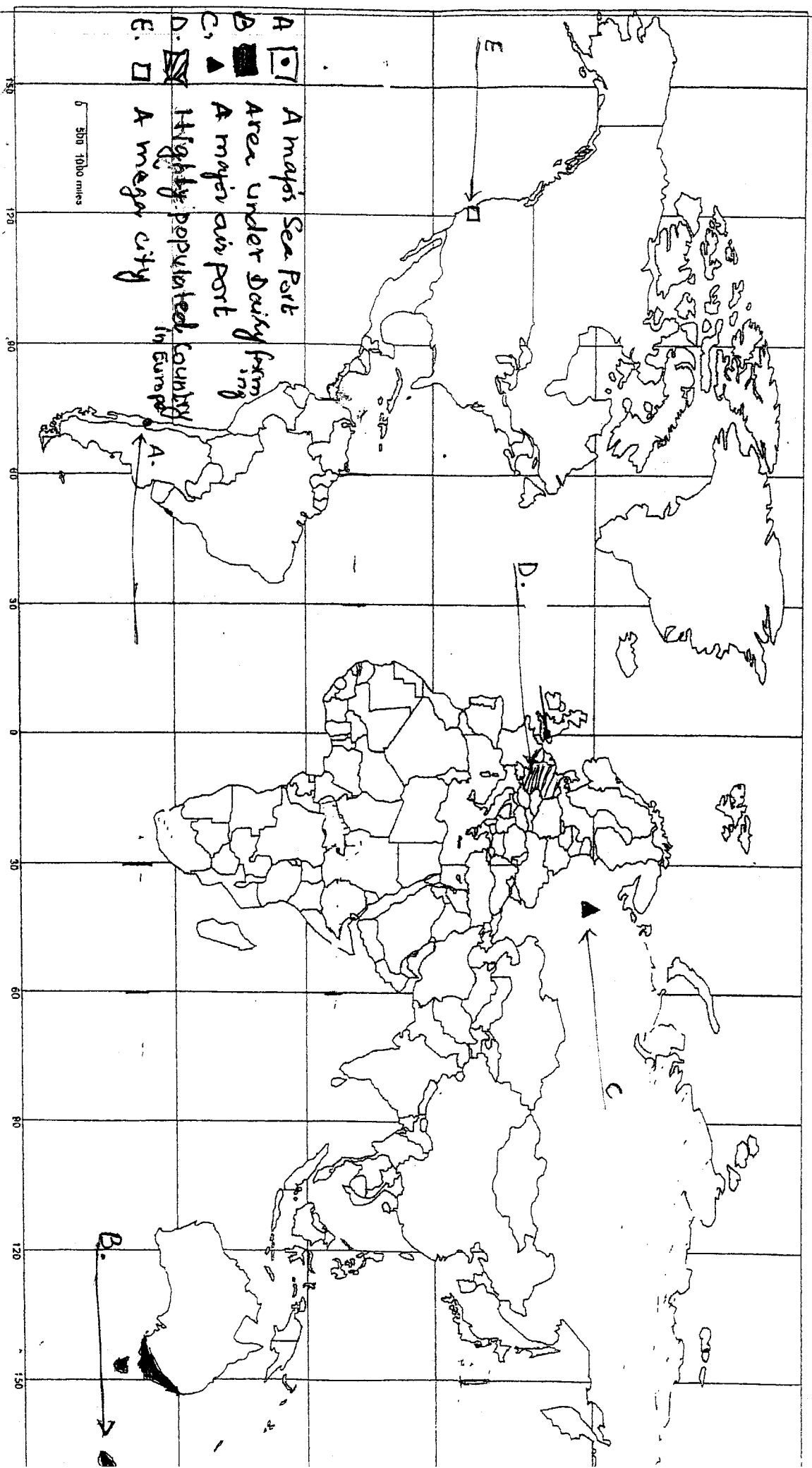
$\frac{1}{2} + \frac{1}{2} = 3$






9. What is a 'Geothermal Energy'? Where did first geothermal energy plant setup in India?

Suggest any two methods to conserve the exhaustible resources with example. 1+1+1=3

10. 'Urban Waste disposal is a serious problem in India.' Discuss. 3
11. Differentiate between protective irrigation and productive irrigation. 3
12. What are the three school of thought that has emerged in human geography in 1970s and made more relevant to the socio-reality to this subject matter? 3
13. Define the term 'Trade'. Mention the characteristic features of the two categories of trading centers ? 1+2=3
14. How has the introduction of Indira Gandhi Canal Irrigation System influenced in the dry land of Rajasthan the environmental condition of the region both positively and negatively ? 5
15. Discuss any five challenges due to higher proportion of adolescent population in India though regarded as the youthful population having high potential. 5
16. Explain how the difference in natural resources , size of population and stages of economic development form the basis of international trade. 5
17. What is a 'pastoralism'? Name its two categories practiced at the subsistence level and commercial level. State three main features of each category. 1+1+3=5
18. Describe the geographical, economic and strategic importance of Panama Canal. 5
19. Why are sugar factories are located within the cane producing areas in India ?
Examine the significance of sugar industry to the economy of country and also give a brief account of major sugar industrial belt in India. 2+3=5
20. Why is conservation and management of water necessary in India ? Mention several methods to conserve water resources 2+3=5
21. Identify the five Geographical features shown on the political outline map of the world as A, B, C, D and E. and write their correct name on the lines marked near them with the help of following information. 5X1=5
- A. An important sea port
 - B. An area of Dairy farming
 - C. A major air port
 - D. Highly populated country in Europe
 - E. A mega city
22. Locate and label the following features with appropriate symbols on the given outline political map of India. 5X1=5
- (i) An integrated Iron and Steel Plant in West Bengal
 - (ii) The Northern most International Airport
 - (iii) Largest sugar cane producing State
 - (iv) Only lignite coal field
 - (v) An Software Technology park in Gujarat

SET B
Q. 22, 1, 1



- A  A major sea port
- B  Area under dairy farming
- C  A major air port
- D  Highly populated country in Europe
- E  A major city

500 1000 miles

SET 'B'
Q. No 22

Outline Map of India (Political)
भारत का रेखा-मानचित्र (राजनीतिक)

