

INTERNATIONAL INDIAN SCHOOL DAMMAM
PREFINAL EXAMINATION 2013-2014- SET (A)

SUB: GEOGRAPHY

CLASS: XII

TIME: 3.00 Hours

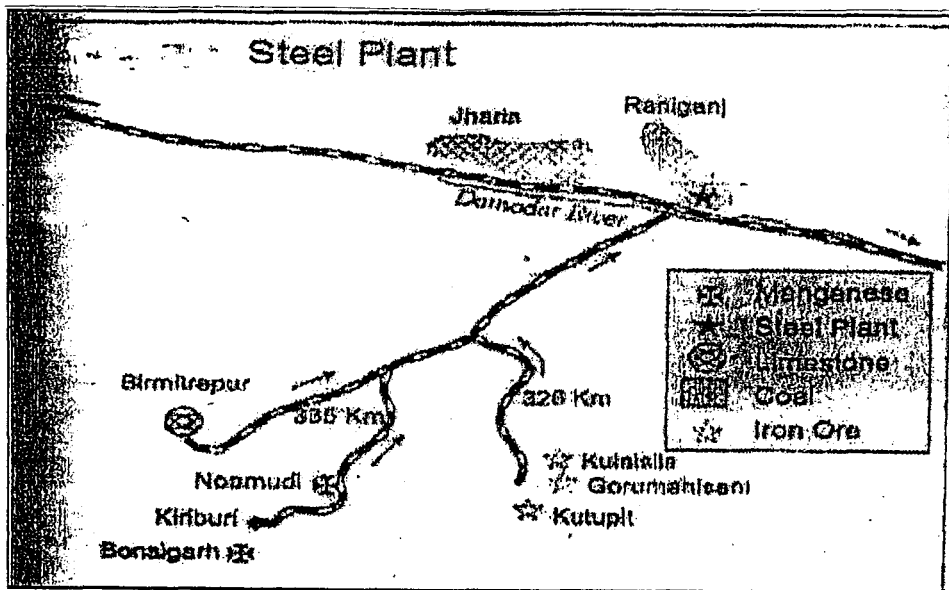
MARKS: 70

General Instructions:

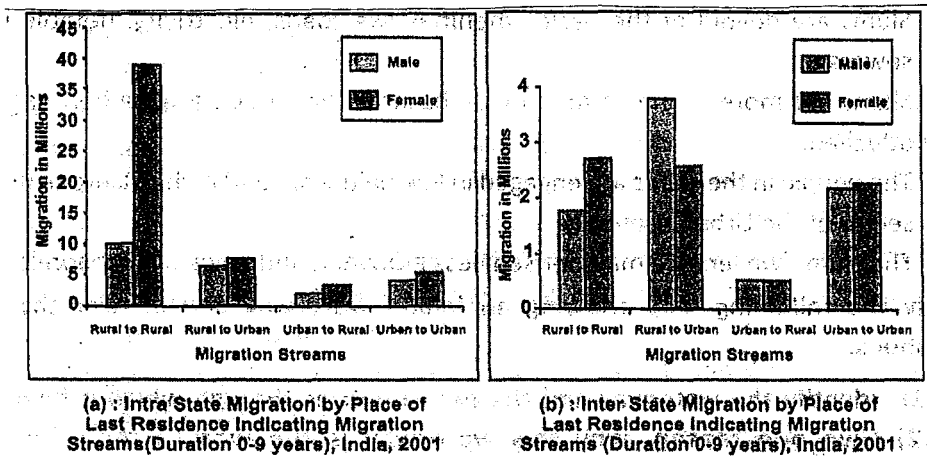
- All the 26 questions are compulsory and marks are indicated against each questions.
- Questions from 1 to 10 are of very short type and carry 1 marks each.
- Questions from 11-20 are short type and carry 3 marks each
- Questions from 21 - 25 are long type and carry 5 marks each.
- Outline map of the India and world is provided to you must be attached with your answer.
- Question number 26 a and b are related to map ,locate and identify features for both maps.

Answer the following:

1. Which Urban agglomeration has highest no of Migrants? (1mark)
2. Name the two ports which were snatched away after partition? (1mark)
3. Which states of India has highest proportion of population below the poverty line? (1mark)
4. What is the name given to Slash and burn agriculture in Indonesia and Malaysia? (1mark)
5. What are Garrison town ? Give examples. (1mark)
6. Name the regional trade block of which India is a member. (1mark)
7. Name the famous petroleum pipeline of U.S.A (1mark)
8. Name two fiber crops. (1mark)
9. Name the diseases caused by air pollution. (1mark)
10. Explain the term "Truck farming". (1mark)
11. Who introduced the concept of "Stop and Go Determinism"? Mention any two characteristics of this concept. (3marks)
12. What are Hamletted settlements? Give examples. (3marks)
13. Describe the problems of slums of India. (3marks)
14. Market gardening is practised near urban areas. Why? (3marks)
15. " The pipelines have certain advantage over other modes of transport." Give three reasons in support of this statement. (3marks)
16. Fifteenth century onwards the European colonialism began and along with trade of exotic commodities a new form of trade emerged which was called slave trade the portuguese, Dutch , Spaniards, and British Captured African native and forcefully transported them to the newly discovered America for their labour in the plantations, slave trade was a lucrative business for more than two hundred years till it was abolished in Denmark in 1792, in Great Britain in 1807 and United States in 1808.
Read the above paragraph and answer the following: (Value Based Questions) (3marks)
(a) " Slavery was a curse ". Justify the statement in your opinion.
(b) What kind of values are needed to bring slavery to an end?
17. Study the diagram showing location of a major steel plant given below and answer the question given below. (3marks)
 - a) Identify this steel plants and write its name.
 - b) Name the sources of limestone for this plant.
 - c) What are the sources of coal for this plant



18. Study the following bar diagrams and answer the following questions: (3marks)



- Why do higher numbers of females migrate from rural to rural in both the diagrams?
- Why is the male migration higher from rural to urban in second diagram?
- Distinguish between Intra- state migration and Inter-state migration.

19. What is Rain water harvesting? Write down the main objective of rain water harvesting? (3m)

20. Examine any three factors that influence the tourist attractions. (3marks)

21. Discuss the problems of rural settlement in developing countries. (5marks)

22. Why do large scale industries choose different locations? Explain any four factors influencing industrial locations in the world. (5marks)

23. What is density of population? Explain Four geographical factors influencing the distribution of population in the world. (5marks)

24. Describe any five major problems of Indian agriculture? (5marks)

25. Classify ports on the basis of their locations. Name the ports which are located on the western coast of India. Which is the biggest port of India and name its satellite port? (5marks)

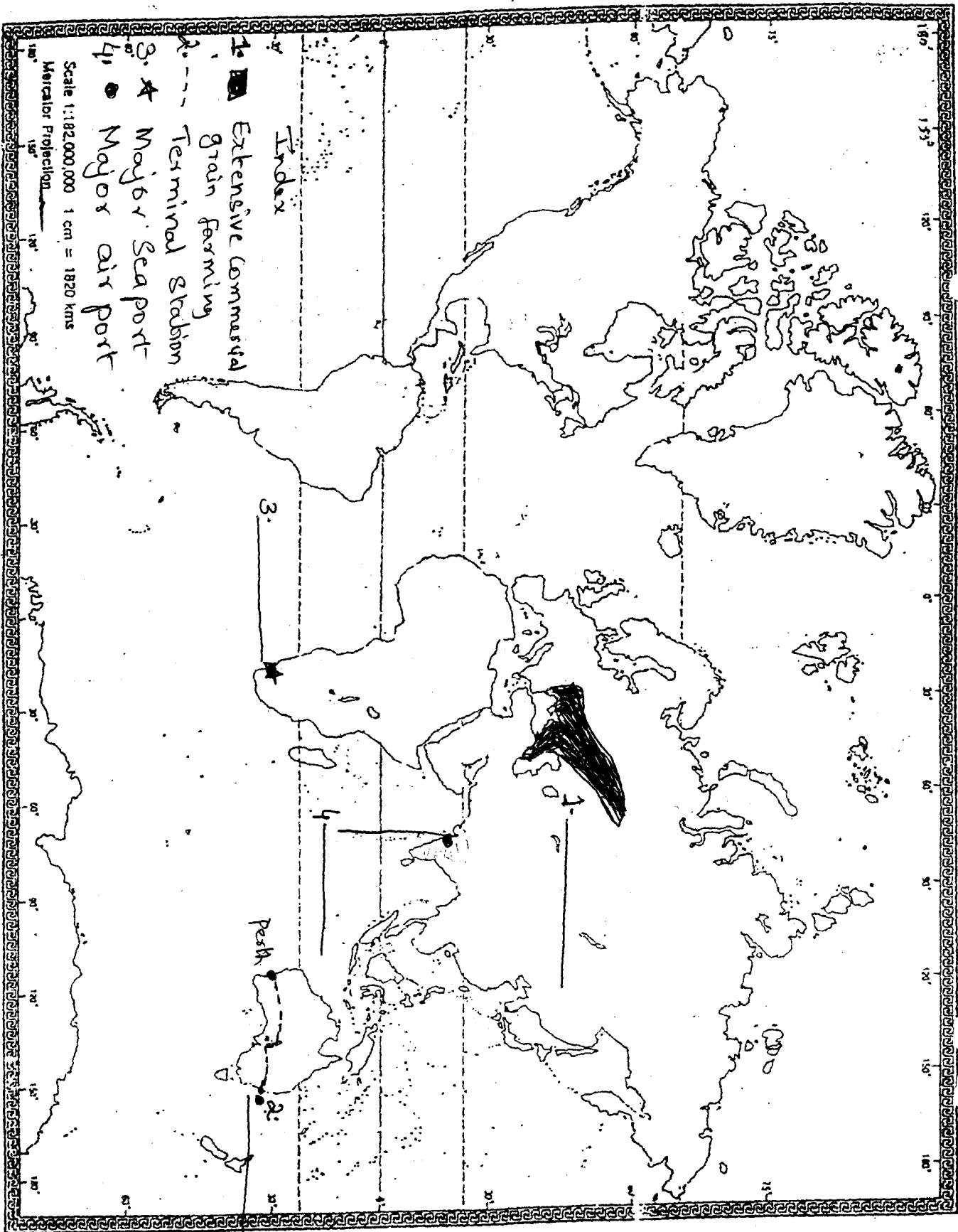
26. (A) In the given political outline map of the world , four features are shown Identify them and write their names. ½ x 4=2m

- 1)An area of extensive commercial grain farming.
- 2) Terminal of trans – Australian rail way.
- 3) A major seaport.
- 4) A major airport of India.

26. (B) On the out line map of India locate and label the following features. (3marks)

- 1) A Soft ware technology park in Jammu and kashmir.
- 2) State having lowest literacy rate.
- 3) leading tea producer state.

WORLD



- 1. ■ Extensive Commercial Grain Farming
- 2. - - - Terminal Station
- 3. ★ Major Seaport
- 4. ● Major air port

Scale 1:182,000,000 1 cm = 1820 kms
Mercator Projection

Index

Peak

NAME _____

CLASS _____

R: NO _____

INDIA POLITICAL

