

INTERNATIONAL INDIAN SCHOOL DAMMAM
SECOND TERMINAL EXAMINATION-OCT 2014
SUBJECT : GEOGRAPHY CLASS : XII



M.MARKS : 70

SET : B

INSTRUCTIONS:

- All the questions are compulsory and marks are allotted against each questions.
- Questions from 1 to 7 are of very short type answer and carry 1 mark each.
- Questions 8 to 13 are short type answer and carry 3 marks each.
- Questions from 14 to 20 are long type answer and carry 5 marks each.
- Questions from 21 to 22 are related to map work and carry 5 marks each.

1. What is horticulture ? 1
2. Differentiate between main workers and marginal workers. 1
3. Name the most famous and heavily used inland water ways of the world which connects the industrial region of Switzerland, Germany, France and Netherland with the North Atlantic Sea region". 1
4. Building materials are also one of the important siting factor of a rural settlement in the world. 'Justify the statement with one suitable example. 1
5. Give two example of non-store retail selling? 1
6. What do you understand by current Fallow land ? 1
7. Identify the National Water Way given below and name any one important station. Brahmaputra is navigable by streamers up to Dibrugarh which is shared by Bangladesh and India. 1
8. Explain the concept of Environmental Determinism. 3
9. "The shape of population pyramid reflects the characteristics of the population". Support the statement with suitable example. 3
10. Explain three characteristic features of semi clustered settlement of rural areas In India. 3
11. Define the term 'Road Density'. Why is density of road high in northern state and major southern states than in Himalayan region and in other states of India ? 1+2=3
12. Classify the cropping seasons into three distinct group. Write about each in relation to period and crops grown in India. 3x1=3
13. Balance of trade records the volume of goods and services imported as well as exported by a country to other countries. If the value of import is more than the value of a country's exports, the country has

negative or un favorable balance of trade, if the trade value of export is more than the value of imports, the country has a positive or favorable balance of trade. 3

Read the above paragraph and analyze the following in your own words.

- a) What do you understand by balance of trade?
- b) What is a difference between positive and negative balance of trade ?

14. What is tourism ? Explain any four factors that attract tourist to a particular place in the world ? 1+4=5

15. Why do people migrate ? Explain economic and social consequences of migration in India. 1+ 4=5


16. Describe any five problems related to Indian agriculture. 5

17. What is a noise pollution ? Explain any three sources of noise pollution. Mention two ill effects of it on human health. 1+3+1=5

18. What is a Trans- Continental Railway? Describe the location, Extent and Economic Significance of Trans-Siberian Railway. 1+4=5

19. Describe any five types of rural settlement of the world based on forms or shape of settlement with diagram. 5

20. Study the diagram given below and answer the following. 1+1+3=5



20.1 Identify the diagram and give proper title to it.

20.2 What type of mining activities are presented by A and B ?

20.3 Mention any three differences between the two methods of mining as shown in A and B ?

21. On an outline political map of India locate and mark the following.

5X1=5

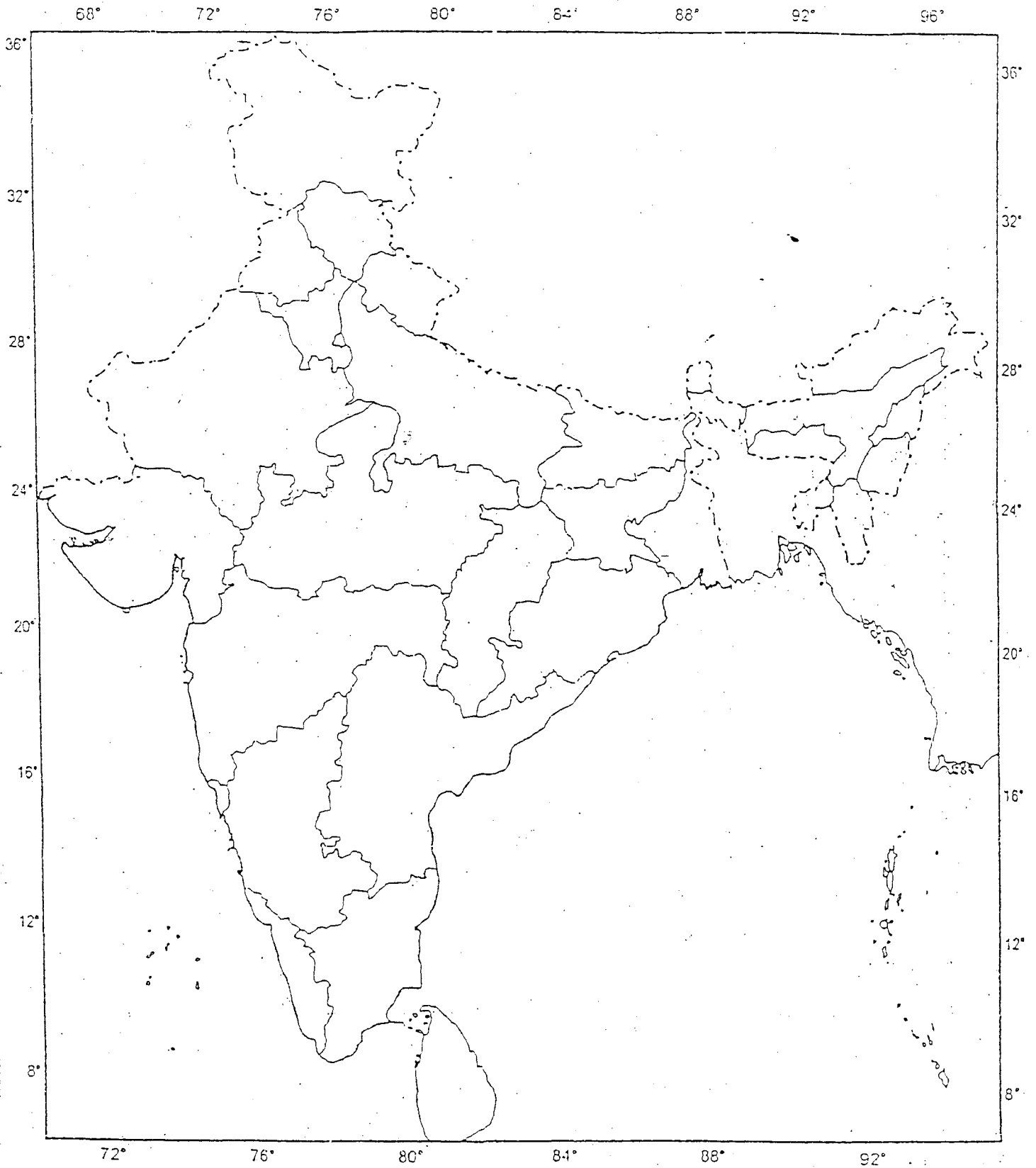
- a) Headquarter of Northern Railway
- b) Largest tea growing state
- c) State having highest growth rate
- d) One metropolitan city in Gujarat
- e) State having highest urban population

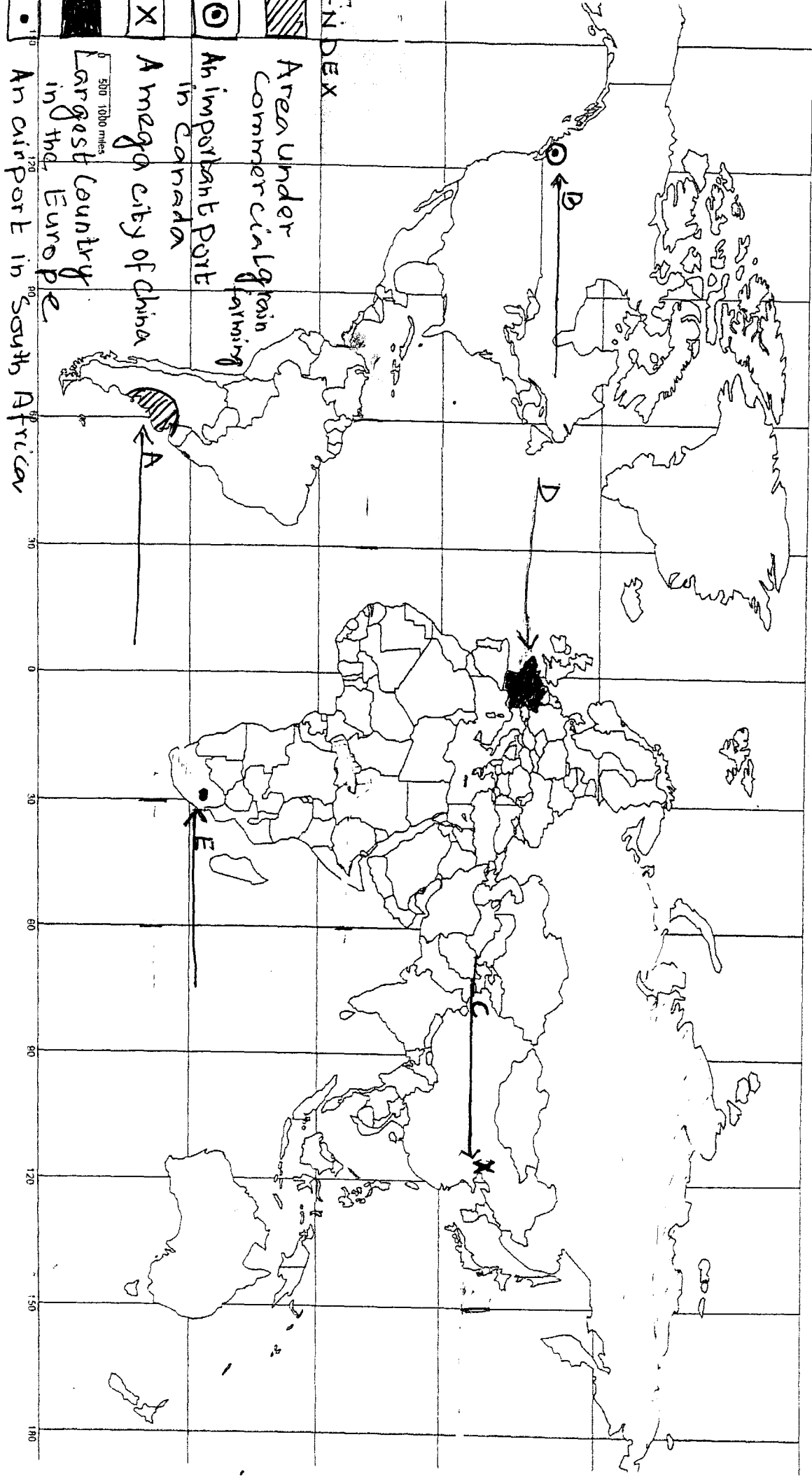
22. In the given political map of world identify the features marked with the help of index and write their correct name against it.

5X1=5

- A) A major area under commercial grain farming
- B) An important sea port in Canada
- C) A mega city of china
- D) Largest country in Europe
- E) An important airport in South Africa

Q. No 21





INDEX

- Area Under Commercial Grain Farming
- An important Port in Canada
- A mega city of China
- Largest country in the Europe
- An airport in South Africa

500 1000 miles