

Roll No. _____

International Indian School, Dammam

Kindergarten Section

Maths Revision Worksheet – 2018


UKG: _____

Date: _____

Name: _____

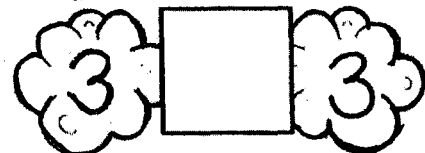

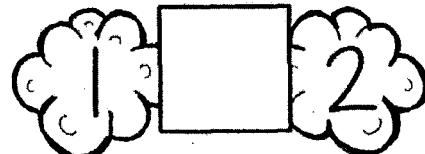
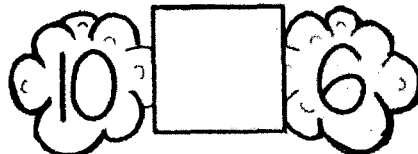






Class Teacher: _____

Write Count in 10's



10

Write Greater than, Less than, Equal to $>$, $<$, $=$



Roll No. _____

International Indian School, Dammam
Kindergarten Section
Revision Worksheet – February 2018
Math

UKG: _____

Date: _____

Grade: _____

Name: _____

Class Teacher: _____

Sequence Writing & Number Names

Sequence Writing 121 – 160

121						

Write the Numerals:

Twelve _____

Eight _____

Seventeen _____

Ten _____

Twenty one _____

Write the Number Names:

20 _____

19 _____

14 _____

25 _____

4 _____

Roll No. _____

International Indian School, Damman
Kindergarten Section
Revision Worksheet – February 2018
Math

UKG: _____

Date: _____

Name: _____

Class Teacher: _____

Addition

$$\begin{array}{r} 3 \\ + 3 \\ \hline \square \end{array}$$

$$\begin{array}{r} 5 \\ + 2 \\ \hline \square \end{array}$$

$$\begin{array}{r} 7 \\ + 2 \\ \hline \square \end{array}$$

$$\begin{array}{r} 5 \\ + 3 \\ \hline \square \end{array}$$

$$\begin{array}{r} 4 \\ + 0 \\ \hline \square \end{array}$$

$$\begin{array}{r} 8 \\ + 1 \\ \hline \square \end{array}$$

$$\begin{array}{r} 6 \\ + 4 \\ \hline \square \end{array}$$

$$\begin{array}{r} 3 \\ + 2 \\ \hline \square \end{array}$$