

INTERNATIONAL INDIAN SCHOOL – DAMMAM





STD – II MATHEMATICS WORKSHEET

UNIT 9 - SHAPES

NAME _____ DIV. _____ DATE: _____

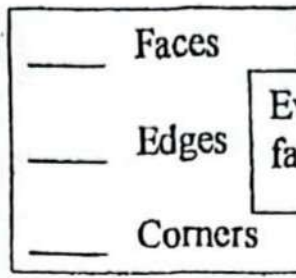
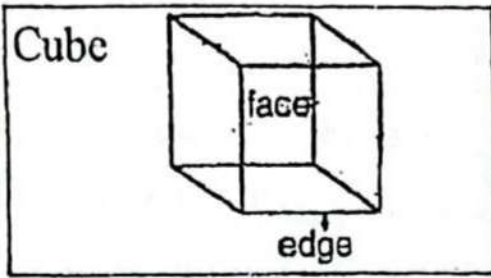
PLANE SHAPES

Join the dots and find the plane shapes.

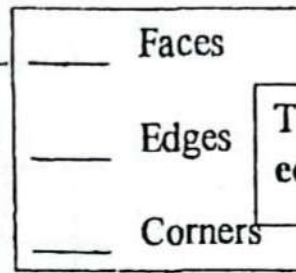
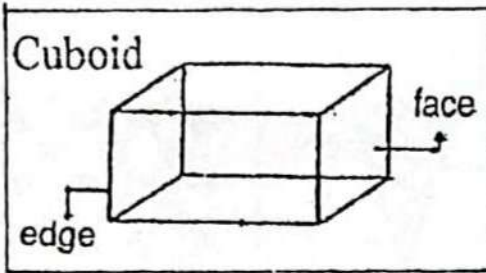
	<p>This is a triangle.</p> <p>It has _____ sides and _____ corners.</p>
	<p>This is a square.</p> <p>It has _____ corners and four _____ sides.</p>
	<p>This is a rectangle.</p> <p>It has four sides and four corners.</p> <p>The _____ sides of a rectangle are equal.</p>
	<p>This is a circle.</p> <p>It has _____ sides and _____ corners.</p>

SOLID SHAPES

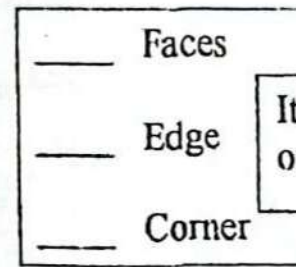
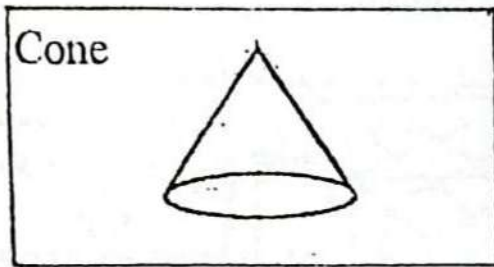
The outside of a solid is called its surface or face and two faces meet to make an edge.



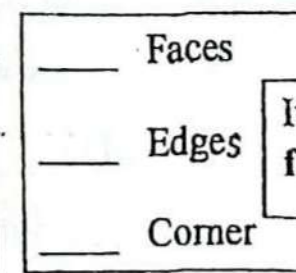
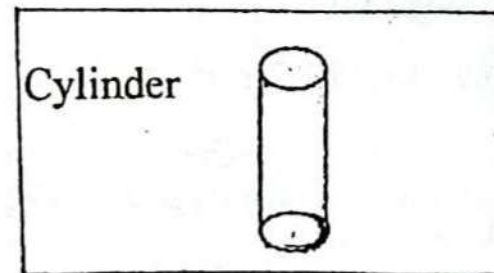
Every face is a **square**. All faces and edges are equal.



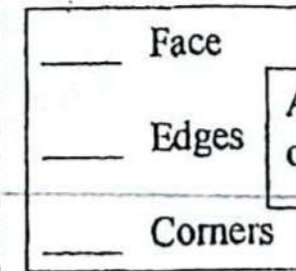
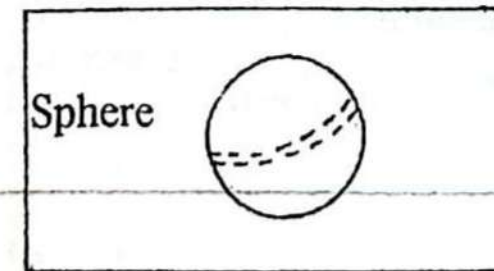
The opposite surfaces are **equal**.



It has **one flat** surface and **one curved** surface.



It has **one curved** and **two flat** surfaces.





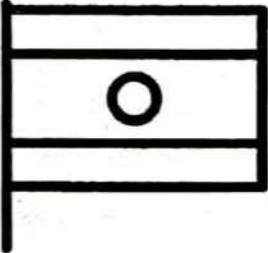





A sphere is all round. It has **only one curved** surface.

Q1. Fill in the blanks:

1. A _____ has 12 equal edges, 8 corners and 6 faces.
2. A _____ has no sides and no corners.
3. A _____ has three sides and three corners.
4. Each face of a cube is a _____.
5. A cylinder has _____ flat faces.

Q2. Identify the shapes and write their names below:


			
			

Q3. Give two examples of the following:

1. A cube _____
2. A sphere _____
3. A cone _____
4. A rectangle _____
5. A cylinder _____

Q4. Colour according to the colour code:

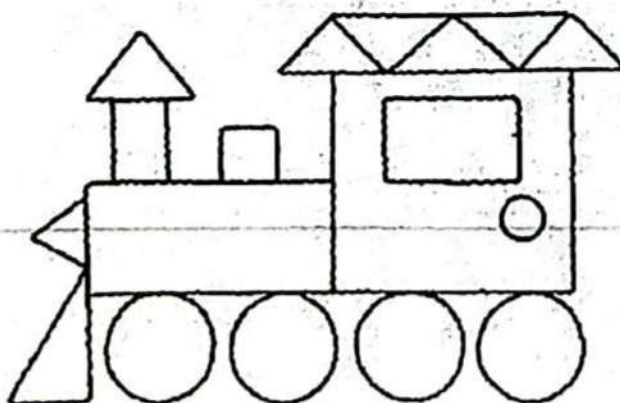
Red	Orange	Yellow	Green
Cube	Cylinder	Cone	Sphere



Q5. Circle the correct shape:

	<p>Rectangle / Cuboid</p>
	<p>Sphere / Circle</p>
	<p>Square / Cube</p>

Q6. Identify and count the following shapes:



Circles _____

Squares _____

Rectangles _____

Triangles _____