

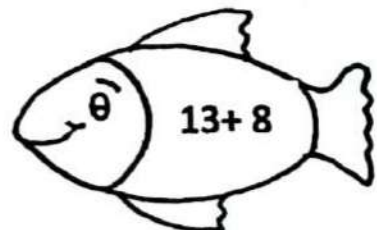
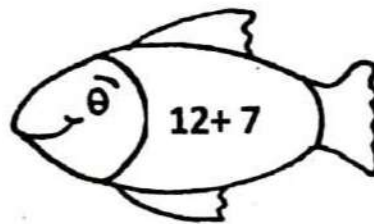
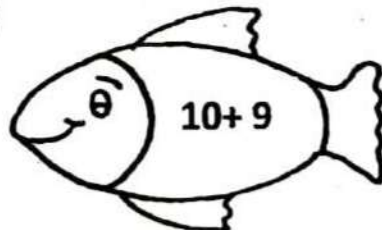
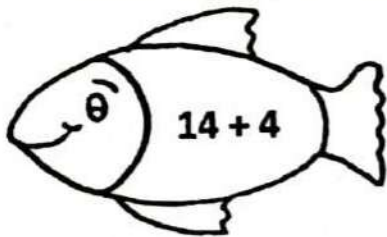
ADDITION

NAME : _____ DIV. _____ DATE : _____

Fill in the blanks :

- a) _____ means putting together.
- b) When we add two or more numbers, the answer is called the _____.
- c) In $5 + 6 = 11$, the numbers 5 and 6 are called the _____.
- d) $17 + 22 = 22 + \underline{\hspace{2cm}}$
- e) When we add _____ to a number, the sum is the number itself.
- f) 1 more than 419 is _____.
- g) The sum of 4 tens and 5 ones is _____.

I. Colour the fish having the sum 19:



II. Count the number of beads in the abacus, write the numbers in the boxes and find the sum:





<table border="1" style="width: 100%; text-align: center;"> <tr><td>H</td><td>T</td><td>O</td></tr> </table>	H	T	O	<table border="1" style="width: 100%; text-align: center;"> <tr><td>H</td><td>T</td><td>O</td></tr> </table>	H	T	O
H	T	O					
H	T	O					
First number	Second number						
<input style="width: 100px; height: 30px;" type="text"/>	<input style="width: 100px; height: 30px;" type="text"/>						
+							
Answer = <input style="width: 150px; height: 30px;" type="text"/>							

	H	T	O
+			

V. Add to find the sum. Each sum represents a letter:

$\begin{array}{r} H\ T\ O \\ 5\ 6\ 1 \\ +\ 2\ 2\ 8 \\ \hline L\ \boxed{} \end{array}$	$\begin{array}{r} H\ T\ O \\ 2\ 9\ 0 \\ +\ 3\ 7\ 1 \\ \hline M\ \boxed{} \end{array}$	$\begin{array}{r} H\ T\ O \\ 4\ 3\ 9 \\ +\ 5\ 2\ 8 \\ \hline K\ \boxed{} \end{array}$	$\begin{array}{r} H\ T\ O \\ 7\ 5\ 3 \\ +\ 4\ 7 \\ \hline I\ \boxed{} \end{array}$
--	--	--	---

Write the letter for each of the sum in the box to solve the riddle.

 <table border="1" style="display: inline-table; vertical-align: middle;"><tr><td style="padding: 5px;">661</td></tr><tr><td style="height: 40px; width: 60px;"></td></tr></table>	661		 <table border="1" style="display: inline-table; vertical-align: middle;"><tr><td style="padding: 5px;">800</td></tr><tr><td style="height: 40px; width: 60px;"></td></tr></table>	800		 <table border="1" style="display: inline-table; vertical-align: middle;"><tr><td style="padding: 5px;">789</td></tr><tr><td style="height: 40px; width: 60px;"></td></tr></table>	789		 <table border="1" style="display: inline-table; vertical-align: middle;"><tr><td style="padding: 5px;">967</td></tr><tr><td style="height: 40px; width: 60px;"></td></tr></table>	967	
661											
800											
789											
967											

Cats like to drink _____.

I. Arrange and add:

a. 98 and 15

b. 407 and 192

c. 336 and 324

II. Solve:

1. Raj has 66 marbles and Sham has 56 marbles. How many marbles do they have altogether?

Ans = _____

--

2. In a school, there are 623 boys and 188 girls. How many students are there in the school?
