

INTERNATIONAL INDIAN SCHOOL, DAMMAM



CLASS – 1



MATHS WORKSHEET NO – 5



COMPARISON OF NUMBERS



NAME: _____ SEC: _____ DATE: _____



Q1. Put the correct symbols (>, < or =) in the given boxes.

a)  



b)  



c)  



d)  



e)  



Q2. Count and write the numerals and put the symbols (>, < or =) in the given boxes.

a)  

b)  

c)  

d)  

e)  

Q3. Fill in the symbols ($>$, $<$ or $=$) and write 'greater than', 'less than' or 'equal to'.

a) $5 \square 10$
5 is _____ 10

b) $8 \square 18$
8 is _____ 18

c) $36 \square 26$
36 is _____ 26

d) $74 \square 47$
74 is _____ 47

e) $25 \square 25$
25 is _____ 25

Q4. Fill in the symbols ($>$, $<$ or $=$).

a)	6	\square	8
b)	34	\square	25
c)	71	\square	17
d)	49	\square	47
e)	80	\square	90
f)	56	\square	45



g)	26	\square	16
h)	78	\square	99
i)	12	\square	8
j)	62	\square	62
k)	36	\square	13
l)	84	\square	37