


INTERNATIONAL INDIAN SCHOOL, DAMMAM
CLASS-1 GK WORKSHEET-5
PLACES AND MONUMENTS OF INDIA

NAME: _____ **SEC:** _____ **DATE:** _____

Q1. Identify the monuments and tick the correct option:


1.



Taj Mahal

Lotus Temple


2.



Gateway of India

Hawa Mahal


3.



Taj Mahal

Victoria Memorial

4.



Qutub Minar

Charminar

Note: Taj Mahal is located in Agra on the banks of river Yamuna and is considered to be one of the seven wonders of the world.

Q2. Tick the correct option:

1. _____ is the capital city of India.

- a) New Delhi b) Chennai c) Kolkata

2. Gateway of India is situated in _____

- a) Mumbai b) Chandigarh c) Agra

3. There are _____ metropolitan cities in India

- a) Four b) Three c) Nine


4. Charminar is situated at _____

- a) Delhi b) Hyderabad c) Orissa

5. Lotus temple is situated at _____.

- a) Chennai b) Bangalore c) New Delhi

Q3. Name and colour the monument of India.



NOTE: Every year, on 15th August Independence Day is celebrated. On this day our Prime Minister hoists the national flag at the Red Fort in Delhi.