

INTERNATIONAL INDIAN SCHOOL - DAMMAM

STD -II

EVS

L-12: OCCUPATIONS

WORKSHEET No.9

NAME: _____ ROLL No. _____ Sec. _____ DATE: _____

I. Fill in the blanks:

1. The _____ makes and repairs things made of iron.
2. A _____ sells cloth or fabric.
3. The _____ prescribes us medicines when we are sick.
4. The _____ play the sports that they love and turn their hobby into a profession.
5. The _____ makes pots with clay.

II. Match the jobs to the places:

- | | | | |
|-------------|---|-----------------|-----|
| 1. teacher | — | garage | () |
| 2. mechanic | — | restaurant | () |
| 3. nurse | — | railway station | () |
| 4. chef | — | school | () |
| 5. porter | — | hospital | () |

III. Underline the correct answer:

1. The florist sells
(**vegetables, flowers, medicines**)
2. The person who repairs our vehicles.
(**writer, musician, mechanic**)
3. The person who sells food and other household goods.
(**porter , grocer , draper**)

IV. Answer the following:

Q1. What is profession?

Ans: _____

Q2. What does a musician do?

Ans: _____

V. Who am I?

1. I write interesting books, stories and articles. _____

2. I stitch your clothes. _____

3. I grow crops for you to eat. _____

4. I mend your shoes. _____


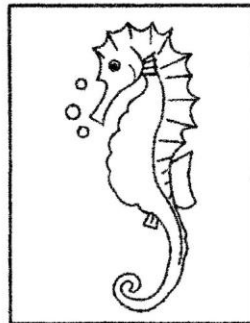





VI. Match the occupations of people by numbering the pictures correctly:

- | | | | |
|------------|-------------|------------|------------|
| 1. clown | 2. potter | 3. mason | 4. artist |
| 5. dentist | 6. mechanic | 7. postman | 8. plumber |



NAME: _____ SEC: _____ DATE: _____

Q1. Name the animals and colour the aquatic animals only.



Q2. Fill in the blanks.

- We tame _____ animals for our pleasure and company.
- Aquatic animals breathe through _____.
- Animals that eat both plants and animals are called _____.
- _____ and _____ carry people and loads from one place to another.

Q3. Who am I?

- I give silk fibres to make sarees, ties etc. _____
- I am the national animal of India. _____
- I am the young one of a cow. _____
- I give wool that can be woven into woollen clothes. _____
- I am a piece of land, thickly covered with trees. _____

Q4. Write True or False.

- Ants and bees live in colonies. _____
- Birds and some insects are the animals that can fly. _____
- Aquatic animals live on land. _____
- Domestic animals live in shelters made by man. _____

Q5. Find the animal homes in the crossword and fill in the blanks below.

P	I	H	O	L	E	M
B	E	E	H	I	V	E
U	F	S	W	A	B	G
R	N	A	S	T	R	Z
R	S	T	A	B	L	E
O	J	C	L	X	W	Y
W	I	T	N	E	S	T

1. Horse _____

2. Snake _____

3. Bird _____

4. Bee _____

5. Rabbit _____

Q6. What are herbivores? Give two examples.

A. _____

Q7. Give two examples of each.

a) Domestic animals: _____ , _____

b) Carnivores: _____ , _____

c) Omnivores: _____ , _____

d) Scavengers: _____ , _____

e) Insects: _____ , _____

Q8. Give reason.

We must avoid using things made of fur, leather or ivory.

Q9. Write 'W' for wild , 'D' for domestic and 'P' for pet animals.

- | | | |
|------------------|------------------|-------------------|
| a. parrot _____ | d. bear _____ | g. goat _____ |
| b. giraffe _____ | e. rabbit _____ | h. elephant _____ |
| c. horse _____ | f. buffalo _____ | i. hen _____ |

INTERNATIONAL INDIAN SCHOOL- DAMMAM

STD -II EVS

L-14 Let's Communicate

Worksheet No-11




Name: _____ Sec. _____ Date: _____

I. Choose the correct answer and fill in the blanks:

pigeons Alexander Bain Telephone Mass messengers Internet

1. _____ helps to interact with the person instantly.
2. _____ is the fastest means of communication.
3. In olden days, _____ and _____ were used to deliver messages.
4. _____ communication is used to communicate with a large number of people at the same time.
5. Fax machine was invented by _____.

II. Identify these means of communication:



III. Who am I ?

1. I help in searching information. _____
2. I provide information, news, movies and sports that you can both see and hear. _____
3. I am used to send letter to your friend or relative living in other country. _____

IV. Match the following :

- | | | |
|--------------------|------------------------------------|-----|
| 1. STD | electronic mail | () |
| 2. e - mail | Subscriber Trunk Dialling | () |
| 3. courier service | International Subscriber Dialling | () |
| 4. ISD | deliver urgent letters and parcels | () |

V. Underline the correct option :

1. (Radio / Newspaper) is a written form of communication.
2. (ISD / STD) is used to make international calls.
3. We must write the correct (address / phone number) on the letter.
4. Fax machine is connected to a (television / telephone).
5. The first written types of communication were drawings on cave walls and (animals' skin / birds' feather).

VI. Write the full form of PIN : _____

VII. What means of communication will you use to:

1. watch a cartoon film _____
2. shop online _____
3. talk to a relative _____
4. read the news _____
5. send an exact copy of a letter _____

INTERNATIONAL INDIAN SCHOOL, DAMMAM

STD -II EVS L -13 It's Travel Time Worksheet No-12

Name: _____ Sec: _____ Date: _____





I. Fill in the blanks :

1. _____ travel under water.
2. _____ move on the tracks.
3. Aeroplanes land and take off from the _____.
4. A _____ carries people up and down the hill while sliding on a metal rope.
5. _____ transport is used to carry people and goods across the oceans, seas, rivers and lakes.

II. Circle the odd one out:

- | | | | |
|-----------------|-----------|------------|-----------------|
| 1. car | train | boat | tractor |
| 2. aeroplane | submarine | helicopter | hot air balloon |
| 3. bullock cart | tonga | train | camel cart |
| 4. steamer | yacht | bicycle | ship |

III. Number these means of transport from the slowest to the fastest:



IV. Answer the following:

Q1. Name the three types of means of transport.

A. _____

Q2. How are helicopters useful?

A. _____

V. Who am I?

1. I move slowly on water using wind energy. _____
2. I am used for emergency landing. _____
3. You need me to travel to other countries.

VI. Tick the correct option:


1. _____ is the fastest and costliest means of transport.
Air transport Water transport Land transport
2. _____ uses water transport to fight for the country.
Army Navy Air force
3. _____ is the first city in India to run metro in 1984.
Delhi Chennai Kolkata

VII. Name the following:

1. Two fuels : _____ , _____
2. Two slow moving vehicles : _____ , _____
3. Two vehicles that move on the road : _____ , _____
4. Two unusual vehicles: _____ , _____

VIII. Give the expanded form of CNG - _____

IX. Name the vehicles which do not need fuel to move:



X. You are planning some outing. Write the correct means of transport you would choose in the space provided :

1. You are going for a school field trip - _____
2. You are going to visit a village across the river - _____
3. You are going to India for vacation - _____
4. You are going on a trip from Mumbai to Goa - _____

INTERNATIONAL INDIAN SCHOOL, DAMMAM

STD-II

EVS-L-18 Our Green Friends

Worksheet No -13

Name: _____ Sec. ____ Date: _____

I. Write true or false for the following sentences:

1. Plants are our green friends. _____
2. Roots of some plants are used to make perfumes. _____
3. Plants make the air fresh by taking in oxygen and giving out carbon dioxide. _____
4. Plants give us timber to make doors, windows and furniture. _____
5. Stem helps the plant to stand upright and carries food to all parts of the plant. _____

II. Fill in the blanks:

1. _____ of some plants like mustard and sunflower are crushed to get oil .
2. _____ turn into fruits.
3. Medicines like _____ and _____ are obtained from plants.
4. _____ and _____ are plants that cannot stand upright.
5. _____ is used to make tyres and parts of machines and cars.

III. Write the functions of the following:

a. Roots: _____

b. Leaves: _____

IV. Match the following:

- | | | |
|-----------------------------------|---------|-----|
| 1. Perfume | shrubs | () |
| 2. Ropes and gunny bags | jasmine | () |
| 3. Coconut | jute | () |
| 4. Plants with small, woody stems | oil | () |

V. Answer the following questions:

1. Name the main parts of the plant.

Ans: _____

2. Name any four things that we get from plants.

Ans: _____

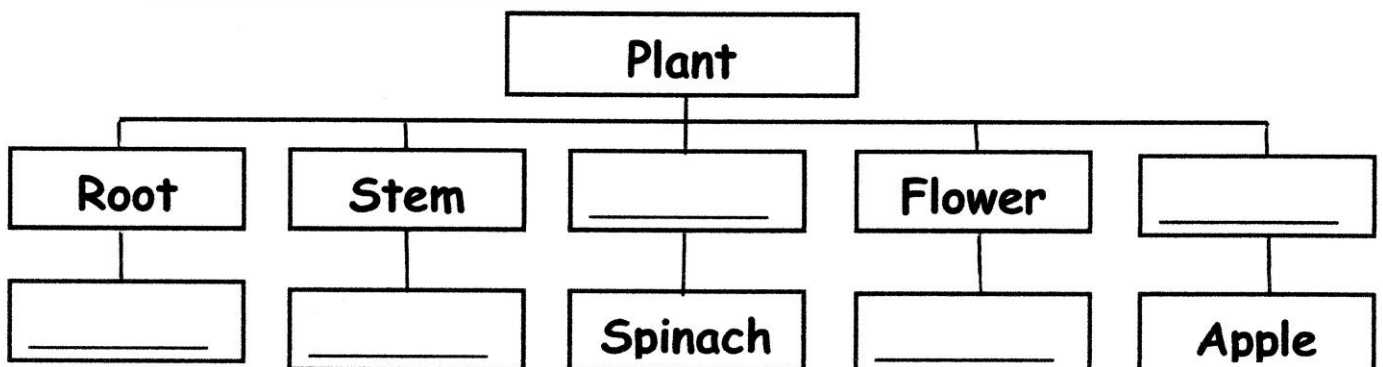
VI. Circle the odd one:

- | | | | |
|--------------|-------|----------|---------|
| 1. coriander | mint | hibiscus | spinach |
| 2. tea | wool | cocoa | sugar |
| 3. cloves | cumin | cardamom | cotton |

VII. Give two examples for each of the following:

- | | | |
|---------------|-------|-------|
| 1. Trees - | _____ | _____ |
| 2. Shrubs - | _____ | _____ |
| 3. Herbs - | _____ | _____ |
| 4. Climbers - | _____ | _____ |
| 5. Creepers - | _____ | _____ |

VIII. Complete the chart with examples:



Name: _____ Sec. _____ Date: _____

I. Choose and write the suitable names of the seasons:

Winter	Spring	Summer	Autumn	Monsoon
--------	--------	--------	--------	---------


- The weather is very hot. _____
- Cool wind blows along with heavy showers of rain. _____
- Most of the trees shed their leaves. _____
- We use room heaters and blowers. _____
- Flowers bloom and new leaves grow on the trees. _____



II. Complete the following story by using the picture clues :


Ryan got ready for school .It was  _____ outside.

He wore a  _____ and  _____

so that he would not get wet. His sister did not have a raincoat. So, she

took an  _____ to keep herself dry. Both of them love

the rainy season. They made paper  _____  It was fun

to play in the puddles. They also saw a few  _____ on the way.

III. Fill in the blanks :



- A _____ is a band of seven colours formed in the sky.
- We keep ourselves warm by wearing _____ clothes.
- _____ depend on the rains for their crops that we get to eat.
- _____ and _____ are the seasons for a shorter time.
- Rainy season comes after the _____ season.
- _____ season is also known as 'Fall'.

IV. Here are some words. Put them in the right column.



WINTER	SUMMER	RAINY SEASON

V. Look at the following pictures and name the seasons:



Name: _____

Sec: _____

Date: ___ / ___ / ___

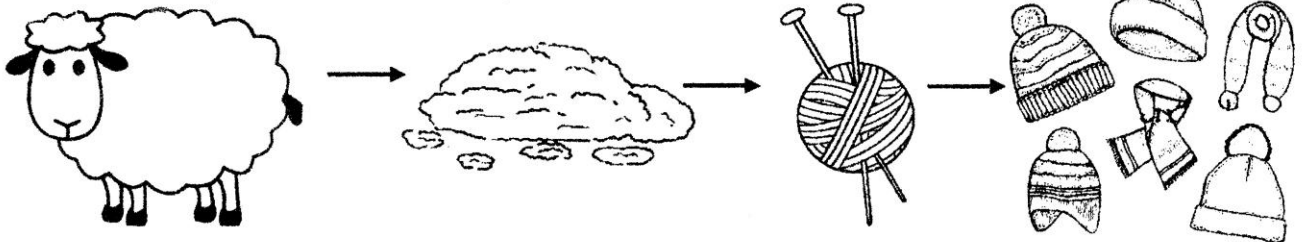
I. Fill in the blanks:

1. We wear different types of clothes in different _____.
2. Woollen clothes keep us _____ in cold winters.
3. _____ is obtained from the hair of sheep.
4. In rainy season, we keep ourselves dry by wearing _____ and _____ and using an _____.


II. Write True or False:

1. Fibres like cotton, wool and jute are made of chemicals in factories. _____
2. People who do special jobs wear uniforms. _____
3. We also get wool from the hair of goats, muskoxen, rabbits and camels. _____


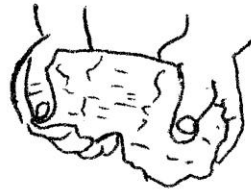

III. Identify and name the pictures:



IV. Colour the star blue for uniform and red for costume:



V. Number the following pictures in the correct order:



spinning
into yarn

cotton bolls

weaving

cleaning of
cotton bolls

ready
clothes

VI. Give any two examples for the following:

1. Clothes made of cotton

2. Synthetic fibres


3. Water proof materials

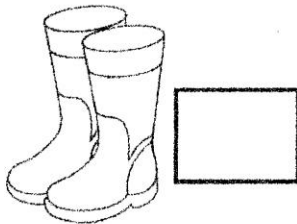
4. People who wear uniform to work

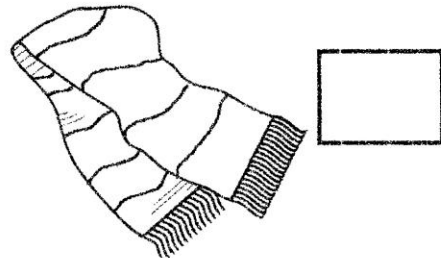
5. Clothes knitted from wool

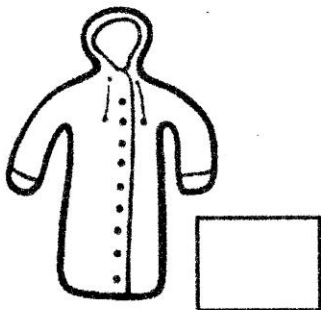
VII. Identify the season in which we wear the following.


Write S for Summer, W for Winter and R for Rainy Season










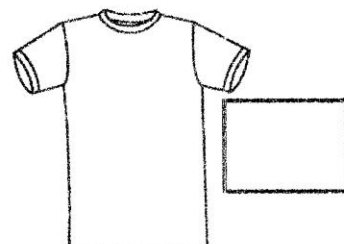












INTERNATIONAL INDIAN SCHOOL - DAMMAM

STD II EVS L-20 World Around Us Worksheet No-16

Name: _____ Sec. _____ Date: _____

I. Fill in the blanks.

1. _____ is the third planet from the Sun.
2. Very high hills are called _____.
3. A plateau is also known as a _____.
4. _____ is a piece of land surrounded by water on all sides.
5. Big seas are called _____.

II. Who am I?

1. I am a dry area of land covered with sand. _____
2. I am the tip of a mountain. _____
3. I have many landforms and water bodies. _____
4. I am also known as the ship of the desert. _____

III. Match the following.

- | | | |
|------------------------------------|-----------|-----|
| 1. A small river | pollution | () |
| 2. Part of land covered with trees | stream | () |
| 3. Earth Day | forest | () |
| 4. Flat lands | plains | () |
| 5. Factories and industries | April 22 | () |

IV. Write True or False.

1. Three fourths of the Earth's surface is covered with water. _____
2. Deserts get very heavy rainfall. _____
3. The Earth belongs to the family of the moon. _____

V. Name the following.

1. Two landforms - _____ , _____
2. Two water bodies - _____ , _____
3. Two oceans - _____ , _____

VI. Define the following.

1. Atmosphere - _____

2. Plains - _____


VII. Identify the natural features of the Earth and fill in the missing letters.



M _ _ N _ _ N




_ O _ _ S _



_ E _ _ _ T



R _ _ E _



_ S _ _ N _

VIII. Colour the land portion of the Earth in green and water portion in blue.

