

INTERNATIONAL INDIAN SCHOOL, DAMMAM

CLASS – 1 EVS WORKSHEET -5

L-5 HOME SWEET HOME

NAME: _____ SEC: _____ DATE: _____

I.Fill in the blanks using the given help box.

kutchha , home , pucca , mud , straw , strong , bamboo , cities

1. The house where we live with our family is called our _____ .
2. The two types of houses are _____ house and _____ house.
3. Flats are found in _____ .
4. Kutchha houses are made up of _____ , _____ and _____ .
5. Pucca houses are _____ houses.



II. Write "True" or "False" for the following.

1. Kutchha houses are mostly found in cities and towns. _____
2. Pucca houses are made up of bricks, cement, steel and wood. _____
3. Different rooms are used for same purposes. _____
4. The skyscrapers are very tall buildings that seem to touch the sky. _____
5. We should not keep our home clean. _____

III. Choose and tick the correct answer for the given picture.


1. a) We entertain our guests in this room.

b) My mother cooks food here.



2. a) We take bath in this room.

b) We eat our meals in this room



IV. Choose and underline the correct answer.

1. A special house made of ice blocks is called an **(igloo / caravan)**.

2. The room where we sleep is the **(drawing room / bedroom)**.

3. A house on wheels is called a **(caravan / stilt house)**.

4. Floating houses made of wood are called **(hut / house boats)**.

V. Write 'K' for kutchha house and 'P' for pucca house.

<input type="checkbox"/>	<input type="checkbox"/>	<input type="checkbox"/>
<input type="checkbox"/>	<input type="checkbox"/>	<input type="checkbox"/>

INTERNATIONAL INDIAN SCHOOL, DAMMAM
CLASS-1 EVS L- 6 CLOTHES WORKSHEET NO: 6

Name: _____ SEC: _____ Date: _____

I. Fill in the blanks using the words given in the help box.



cool, formal, clothes, fleece, gumboots

- 1) We wear _____ to cover our body.
- 2) Cotton clothes keep us _____ in summer.
- 3) We wear _____ to keep our feet dry during rainy season.
- 4) Clothes that we wear on weddings and parties are called _____ clothes.
- 5) The woolly coat of a sheep is known as _____.

II. Write True or False:

- 1) Clothes protect us from heat, cold and rain. _____
- 2) It is hot during winter. _____
- 3) We wear different clothes on different occasions. _____
- 4) Silk is used to make raincoats. _____

III. Choose and tick the correct answer from the given picture:

- | | | |
|--|--------------------------|---|
| 1) a) We wear this during summer season. | <input type="checkbox"/> |  |
| b) We wear this during winter season. | <input type="checkbox"/> | |
| | | |
| 2) a) We wear this on festivals and parties. | <input type="checkbox"/> |  |
| b) We wear this when we sleep. | <input type="checkbox"/> | |

IV. Choose the correct answer.

1) We wear a _____ over our clothes on a rainy day.

- a) uniform b) raincoat c) sweater

2) We should always wear clean and _____ clothes.

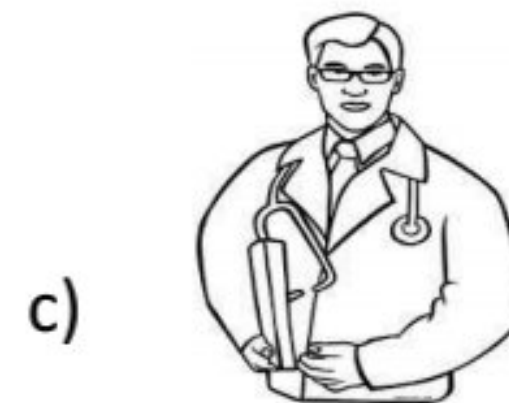

- a) dirty b) ironed c) crushed

3) Special sets of cloth that look exactly the same is called a _____.


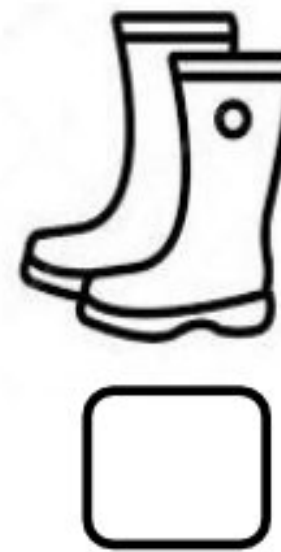

- a) sweater b) nightwear c) uniform

V. Identify the person and write the name in the given box:

Doctor	Policeman	Postman
---------------	------------------	----------------



VI. Identify the season from the following . Write S for Summer, W for Winter and R for Rainy season.



VII. Think and tick the correct answer:

1) Why do we wear woollen clothes during winter?

- a) Woollen clothes keep us warm.
- b) Woollen clothes keep us cool.

2) Why should we wear a uniform to school?

- a) To show sense of unity and identification.
- b) To feel comfortable.



INTERNATIONAL INDIAN SCHOOL, DAMMAM

CLASS-1

EVS

WORKSHEET NO-7

L-17 AMAZING WORLD OF ANIMALS

Name: _____ Sec: _____ Date: _____

Q1. Fill in the blanks.

1. Each animal has its own home called its _____ .
2. _____ are animals with wings and feathers.
3. _____ and _____ give us eggs.
4. Frogs and bats eat _____ .
5. Wild animals live in _____ .
6. _____ was the first animal to be domesticated by man.

Q2. Give two examples of the following.

1. Plant eaters: _____, _____ .
2. Flesh eaters: _____, _____ .
3. Both plant and flesh eaters: _____, _____ .
4. Pet animals: _____, _____ .
5. Domestic animals: _____, _____ .
6. Wild animals: _____, _____ .

Q3. Match the following.


	A	B	
1	Honeybee	Beasts of burden	
2	Crocodile, buffalo	Wool	
3	Sheep, yak	Honey	
4	Cow, goat	Silk fibre	
5	Donkey, horse, camel	Leather	
6	Silkworm	Milk	

Q4. Write "True" or "False" for the following.


1. Aquatic animals live in water. _____
2. Bed bugs and ants can fly. _____
3. Insects are tiny animals with six legs. _____
4. Lion and tiger are farm animals. _____
5. Different animals eat different types of food. _____

Q5. Tick the correct answer for the given picture.

1. a) These are plant products.
- b) These are animal products.



2. a) These are plant eaters.
- b) These are flesh eaters.



INTERNATIONAL INDIAN SCHOOL, DAMMAM

CLASS-1 EVS WORKSHEET No:8









LESSON: 16 PLANTS AROUND US

NAME: _____ SEC: _____ DATE: _____

Q1. Fill in the blanks:

- 1) _____ are small plants with soft green stems.
- 2) Plants that need support to stand upright are called _____.
- 3) _____ is used to make tyres and tubes.
- 4) Big plants are called _____.
- 5) Trees have a thick brown woody stem called _____.

Q2. Match the following:

	A	B	
1	Flower 	Bamboo 	
2	Paper 	Perfume 	
3	Rubber 	Table 	
4	Wood 	Tyre 	

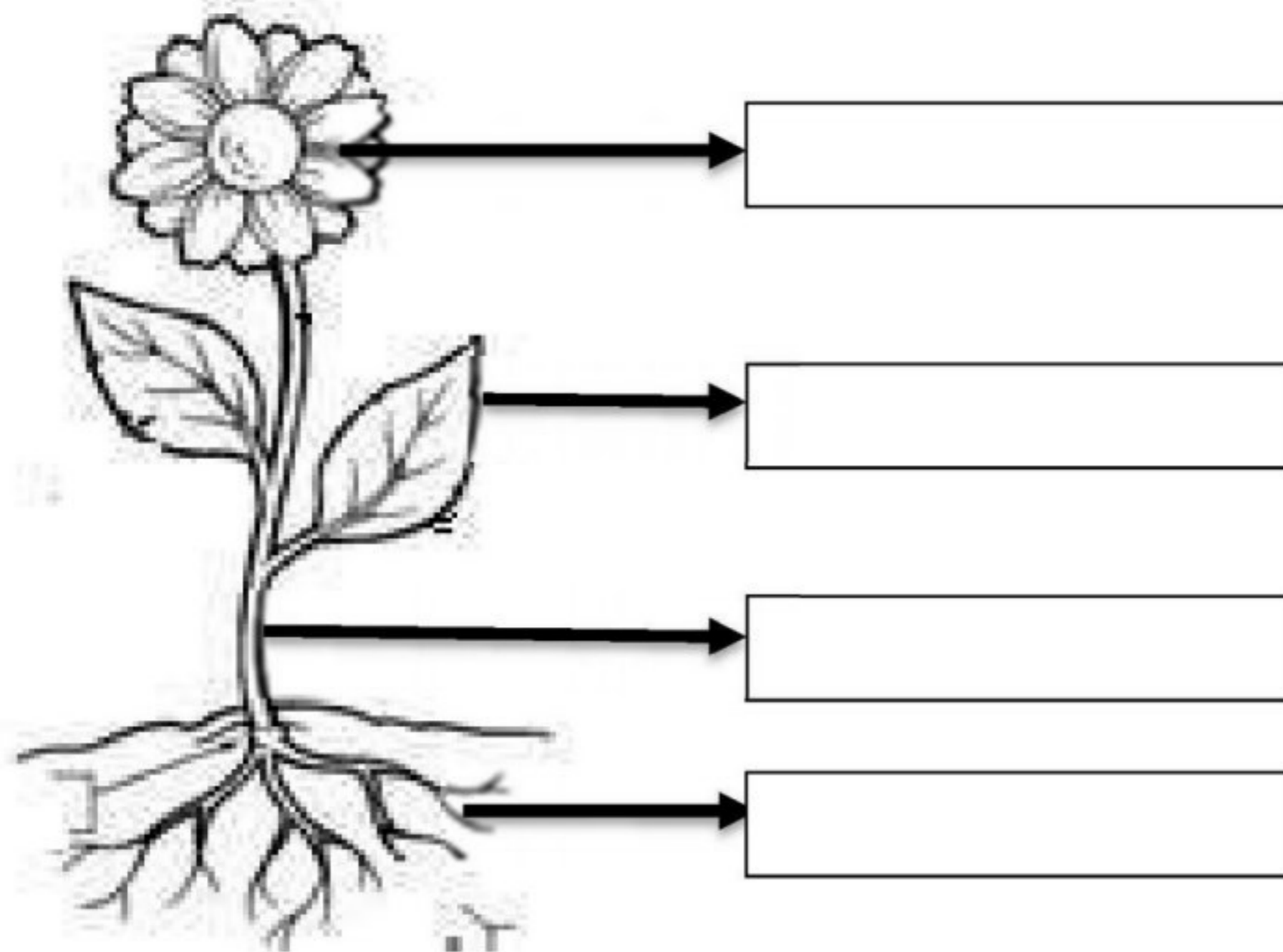
Q3. Solve the riddles:

1) I have weak stem and grow along the ground _____

2) I am small and bushy _____



Q4. Name the parts of the plant:



Q5. Answer the following:

- 1) Give 2 examples of herbs _____ , _____
- 2) Name any 2 things we get from plants _____ , _____

Q6. Circle the things which we get from plants:



Q7. Write "True" or "False":

- 1) Plants give us oxygen and make the air clean. _____
- 2) Bushy plants are also called as herbs. _____
- 3) Perfume is made from flowers. _____
- 4) Grass, mint and spinach are trees. _____

INTERNATIONAL INDIAN SCHOOL, DAMMAM

CLASS – I, EVS WORKSHEET NO.9

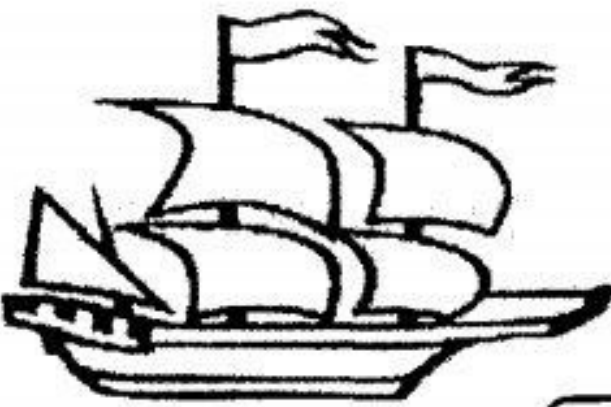



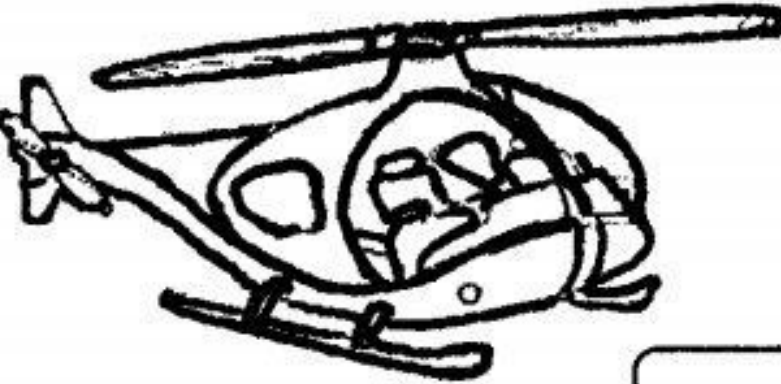

L-15, IT'S TIME TO TRAVEL

Name : _____ Sec : _____ Date : _____

Q 1. Fill in the blanks :

1. Vehicles move on land with the help of _____
2. _____ is a vehicle pulled by an animal.
3. A _____ is a light racing boat.
4. A boat sails on _____ and _____
5. _____ transport is the fastest and most expensive means of transport.
6. A sail boat sails due to _____.

Q2. Identify the pictures and write 'L' for Land 'W' for Water and 'A' for Air Transport.

a)  <input type="checkbox"/>	b)  <input type="checkbox"/>	c)  <input type="checkbox"/>
d)  <input type="checkbox"/>	f)  <input type="checkbox"/>	e)  <input type="checkbox"/>

Q 3. Name the following:

1. Two means of water transport.

_____ and _____

2. A vehicle that is used to cover long distances on land.

3. A vehicle that sails on seas and oceans.


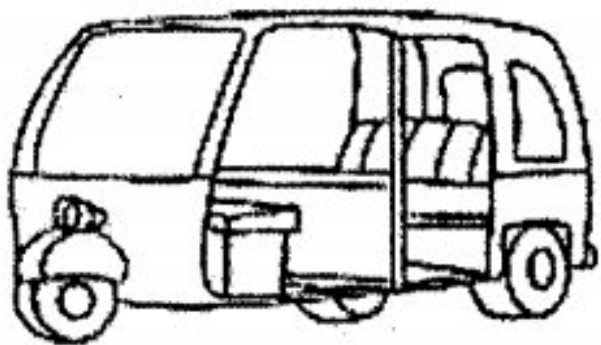
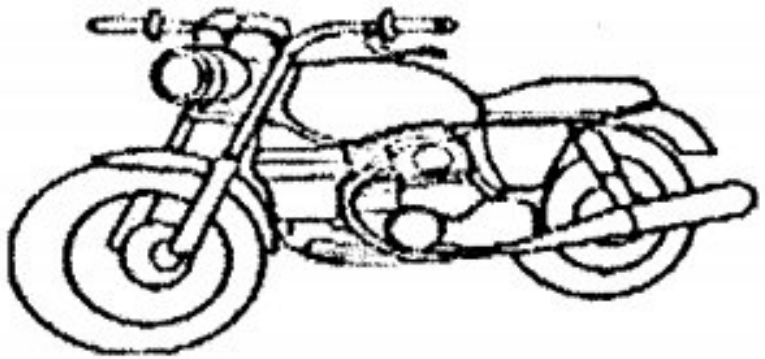



4. Vehicles that we see in a village.

_____ and _____

5. Two means of air transport.

_____ and _____

Q 4. Find out the number of wheels each means of transport has. Write in the box.

a)  <input data-bbox="583 1911 726 2006" type="text"/>	b)  <input data-bbox="1209 1923 1352 2018" type="text"/>	c)  <input data-bbox="1835 1911 1978 2006" type="text"/>
d)  <input data-bbox="592 2427 735 2522" type="text"/>	e)  <input data-bbox="1213 2445 1356 2540" type="text"/>	f)  <input data-bbox="1835 2457 1978 2552" type="text"/>

INTERNATIONAL INDIAN SCHOOL, DAMMAM

CLASS 1 EVS WORKSHEET :10

LESSON 19: THE EARTH AND THE SKY

Name: _____ Sec: _____ Date: _____


Q1. Fill in the blanks:

1. _____ are very high hills having peaks.
2. The earth is made up of _____ and _____
3. The layer of air around the earth is called _____
4. The sun gives _____ and _____ to the earth.
5. When the sun sets it becomes _____

Q2. Write "True" or "False" for the following sentences:

1. Deserts are dry areas on the earth. _____
2. The sky appears green in the morning. _____
3. Earth is covered with more water than land. _____
4. Top of the mountains are covered with snow. _____
5. We can see the stars during the day. _____


Q3. Identify and circle the things we see in the sky:




Q4. Identify the pictures and fill in the missing letters:




P _ _ _ I _ _



C _ _ _ U _ _ S



D _ _ _ E _ _ _



S _ _ _ _ S

Q5. Name the following:

1. At night we twinkle in the sky.

2. Land that is higher than plains.

3. The area between two mountains.

4. The model of the earth.

Q6. Colour the picture of globe.

(Hint: Colour the land portion in green and water portion in blue.)

