

INTERNATIONAL INDIAN SCHOOL, DAMMAM

CLASS:1 ANNUAL EXAM REVISION WORKSHEET 2023-2024

ENVIRONMENTAL STUDIES

Name: _____ Sec: _____ Date: _____

Q1. Underline the correct answer:

1. We see (*car /bullock-cart*) mostly in villages.
2. We call (*animals/ plants*) our green friends.
3. (*Creepers / Climbers*) have heavy fruits so they cannot climb on a support.
4. A flat land is called a (*plain/valley*).
5. We see (*sun/moon*) during the day..
6. (*Ships/Rockets*) are used to travel to the space.
7. (*Lakes/Valleys*) are landforms.

Q2. Fill in the blanks:

- 1 Vehicles move on land with the help of _____.
- 2 We get medicines from plants such as _____ and _____.
- 3 _____ are used to cover long distances on land.
- 4The earth is made up of _____ and _____.
- 5 _____ transport is the fastest means of transport.
- 6 The layer of air around the earth is called _____.

Q3. Name the following:







- 1 A light racing boat. _____
- 2 The part of the plant that takes water from the soil. _____
- 3 The model of the earth. _____
- 4 A Flat landform. _____
- 5 A vehicle pulled by an animal. _____

6 Dry areas on the earth covered with sand. _____

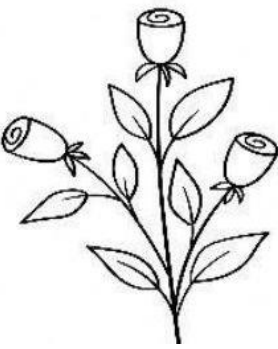
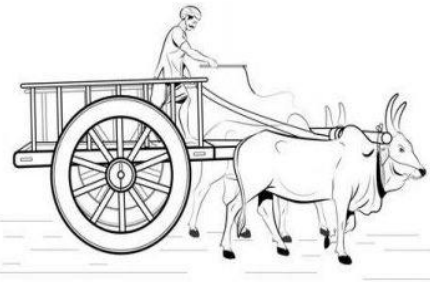

Q4. Write TRUE/ FALSE for the following:

- 1 Plants make the air clean and fresh. _____
- 2 When the sun sets, it becomes day. _____
- 3 Top of the mountains are covered with snow. _____
- 4 We should put waste and garbage in the water bodies. _____
- 5 Perfume is made from flowers. _____
- 6 Trains run on rails. _____







Q5. Write 'L' for land , ' W' for water and 'A' for air transport :

 <input type="checkbox"/>	 <input type="checkbox"/>	 <input type="checkbox"/>
 <input type="checkbox"/>	 <input type="checkbox"/>	 <input type="checkbox"/>


Q6. Identify and name the following pictures :


Q7. Match the following:

1	Desert Plant		
2	Land Transport		
3	Crescent Moon		
4	Paper		
5	Water Transport		
6	A Creeper		

Q8. Solve the puzzle:



Q9. Circle the things that are obtained from plants:



Q10. Answer the following questions:

Q1. What are the means of land transport?

A1. _____

_____.

Q.2. What is the earth made up of?

A2. _____
_____.

Q3. What is the sky?

A3. _____
_____.

Q4. Name the different types of plants.

A4. _____

_____.

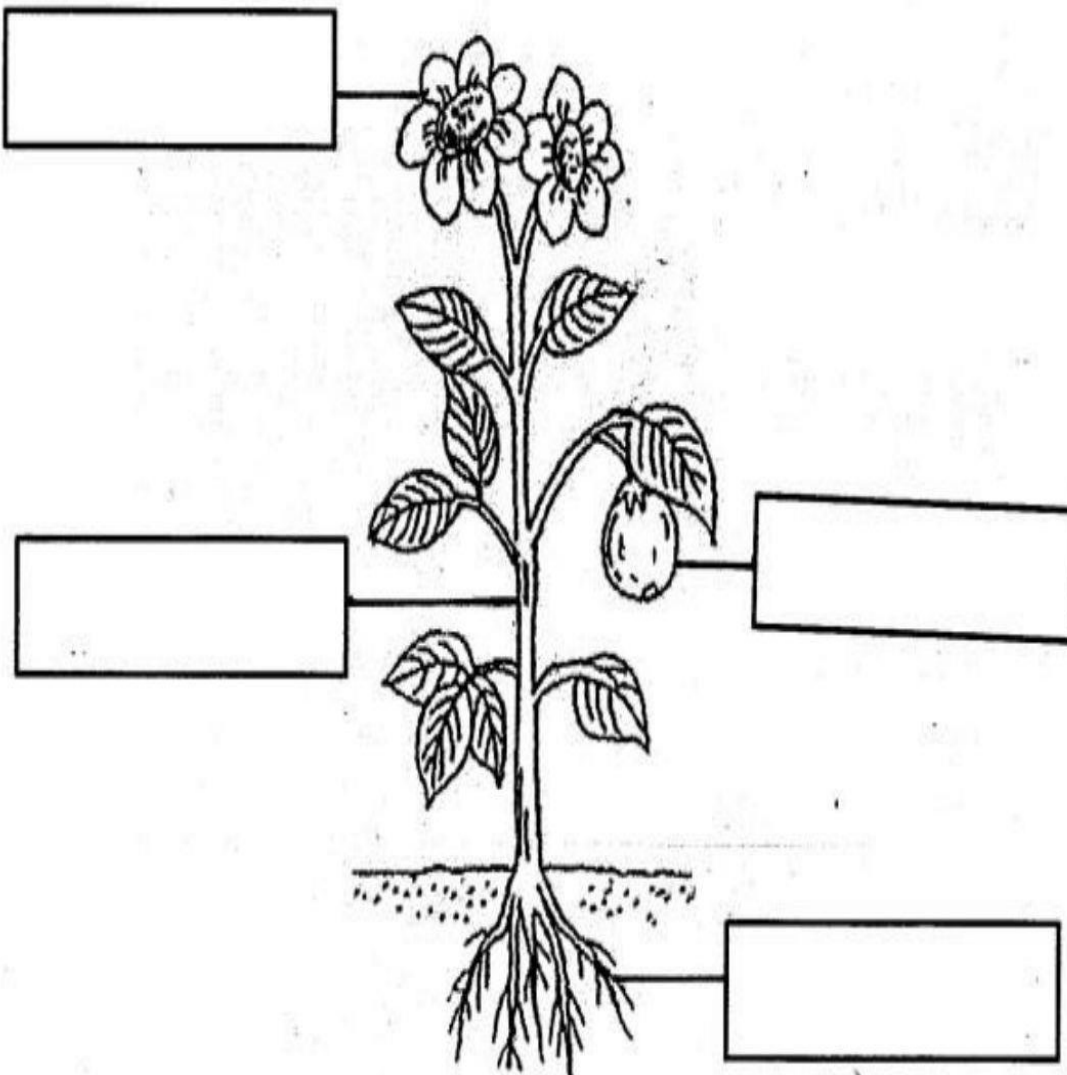
Q5. Where is water found on the earth ?

A5.

Q6. What is trunk?

A6.

Q11. Label the parts of a plant:



Q12. Draw and colour the following :

A climber	A creeper
Stars	The Sun

CLASS:1 EVS ANNUAL EXAM REVISION WORKSHEET (ORALS)

(LEARN ORALLY FROM NB AND CB)

Name: _____ Sec: ___ Date: _____


Q1. Answer the following:

- 1 Why should we follow safety rules?
- 2 In which month road safety week is celebrated?
- 3 What is the another name of the national flag of our country?
- 4 Say any two safety rules we should follow while walking on the road.
- 5 When and where is Independence day celebrated?


Q2. Name the following:

- 1 Name any two symbols that can be seen on a 10 rupee note.
- 2 Name any two national festivals.
- 3 The President of our country.
- 4 Name any two unsafe objects.
- 5 A safe place where children can play.

Q3. Identify the following Indian Leaders:



4. Look at the pictures and say the safety rules.



All the best!