

**INTERNATIONAL INDIAN SCHOOL, DAMMAM**  
**TALENT SEARCH EXAMINATION (TSE 2024-25)**  
**PREP SECTION**  
**CLASS II - STUDY MATERIAL**

- Note:** 1. Use the given study material as a reference for preparation of TSE.  
2. Be updated with the current affairs from the month of Nov 24 to Jan 25.

**TSE 2024-25**

**CLASS: II**

**SUB: MATHEMATICS**

Q1. Varun and Tarun have 15 apples together. Varun has 7 apples. How many more apples does Tarun have?

- a) 1 apple                      b) 3 apples                      c) 8 apples                      d) 6 apples

Q2.  $9 + 9 = \underline{\quad} + 8$

- a) 10                      b) 23                      c) 11                      d) 7

Q3. If you subtract 12 from me you get 24 .What number am I?

- a) 38                      b) 36                      c) 42                      d) 46

Q4. Evana is 12 years old. Her brother is 7 years younger than her. How old is her brother?

- a) 7 years                      b) 19 years                      c) 6 years                      d) 5 years

Q5. What is the difference between the largest 3 digit number and largest 2 digit number?

- a) 99                      b) 999                      c) 900                      d) 990

Q6. What is 10 less than  $57 + 2$ ?

- a) 49                      b) 28                      c) 50                      d) 69

Q7. A primary school has an enrollment of 55 children. 30 of them are boys. How many girls are there?

- a) 15                      b) 7                      c) 25                      d) 10

Q8. Which of the following has the same difference as  $24 - 18$ ?

- a)  $4 - 2$                       b)  $9 - 3$                       c)  $12 - 8$                       d)  $7 - 2$

Q9. A bird was sitting on a branch. Four more birds joined it and then 3 birds flew away. How many birds are left?

- a) 5                      b) 4                      c) 3                      d) 2

Q10. Which of the following is correct?

- a)  $12 - 2 = 1 \text{ ten } 1 \text{ one}$                       b)  $23 - 4 = 19 \text{ ones}$   
c)  $20 - 3 = 2 \text{ tens}$                       d)  $14 - 2 = 1 \text{ ten}$

Q11. When we subtract a number from its double, we get \_\_\_\_\_.

- a) double the number      b) half the number      c) same number      d) zero

Q12. A tank has 5 litres of water. 2 litres are used, and then 3 litres are added. How much water is in the tank now?

- a) 6 litres                      b) 10 litres                      c) 4 litres                      d) 8 litres

Q13. Anwar sold 48 tickets for the school show. Aparna sold 37 tickets. How many more tickets did Anwar sell?

- a) 22 tickets                      b) 83 tickets                      c) 15 tickets                      d) 11 tickets

Q14. There are some deer in the park. 3 more deer join them. There are now 13 deer in all. How many deer were in the park in the beginning?

- a) 13 deer                      b) 10 deer                      c) 15 deer                      d) 12 deer

Q15. You pick 2 apples from a basket of 3 apples. How many apples do you have?

- a) 2                      b) 1                      c) 3                      d) 0

Q16. A snake was 44 cm long. It grew 52 cm more in a year. How long is the snake now?

- a) 68 cm                      b) 96 cm                      c) 8 cm                      d) 101 cm

Q17. Every morning Raj cycles 35m. He cycles 8m more than Ali. How far does Ali cycle every morning?

- a) 8 m                      b) 43 m                      c) 27 m                      d) 35 m

Q18. A pencil is 7cm long. If two pencils are placed end to end, their total length is \_\_\_\_\_.

- a) 12 cm                      b) 5 cm                      c) 9 cm                      d) 14 cm

Q19. How many centimetres are there in 1 metre?

- a) 10 cm                      b) 100 cm                      c) 1 cm                      d) 1000 cm

Q20. If you have a piece of string that is 10 cm long, how much longer will you need to make it 30 cm?

- a) 10 cm                      b) 40 cm                      c) 20 cm                      d) 30 cm

Q21. Which of the following is the longest?

- a) 2 m                      b) 50 cm                      c) 100 cm                      d) 20 cm

Q22. If your book is 25 cm long and your pencil is 15 cm long, how much longer is the book than the pencil?

- a) 5 cm                      b) 10 cm                      c) 40 cm                      d) 15 cm

Q23. How would you measure something longer than 1 metre?

- a) Using a ruler                      b) Using a measuring jar  
c) Using a measuring vessel                      d) Using a measuring tape

Q24. Arrange them from shortest to longest: 1 m, 40 cm, 90 cm

- a) 90 cm, 1 m, 40 cm                      b) 40cm, 90 cm, 1m  
c) 1 m, 40 cm, 90 cm                      d) 1 m, 90 cm, 40 cm

Q25. Which object is about 50 cm long?

- a) a pencil                      b) a toothbrush                      c) a shoelace                      d) a comb

Q26. You have a stick 120 cm long and another stick that is 40 cm long. How much longer is the first stick than the second stick?

- a) 60 cm                      b) 80 cm                      c) 160 cm                      d) 120 cm

Q27. Which is shorter than 1 metre?

- a) a book 30 cm long                      b) a chair 100cm tall  
c) a tree 2m long                      d) a pipe 3m long

Q28. A water pipe is 8m long. How much more length is needed to make it 12m?

- a) 20 m                      b) 4 m                      c) 10 m                      d) 12 m

Q29. A ribbon is 2 m long, and 100 cm is cut off to decorate a box. How long is the remaining piece?

- a) 90 cm                      b) 20 cm                      c) 100 cm                      d) 98 cm

Q30. Sam is 130 cm tall. Tom is 6 cm taller than Sam. Tom is \_\_\_\_\_ cm tall.

- a) 124 cm                      b) 136 cm                      c) 130 cm                      d) 100 cm

Q31. Which of these objects weigh more than 1 kg?

- a) a chair                      b) a bicycle                      c) a sack of potatoes                      d) all of these.

Q32. Which is heavier: 1 kg of cotton or 1 g of cotton?

- a) 1 kg of cotton                      b) 1 g of cotton                      c) 100g of cotton                      d) none of these

Q33. Which is more?

- a) 1 kg                      b) 1000 g                      c) both a and b                      d) none of these

Q34. What is the total weight of two packets of sugar, each weighing 1 kg?

- a) 1 kg                      b) 3 kg                      c) 2 kg                      d) 4 kg

Q35. 500g is \_\_\_\_\_ 5 kg.

- a) equal to                      b) greater than                      c) less than                      d) none of these

Q36. Trisha's weight is 25 kg. Avni's weight is 27 kg. Anushka's weight is 30 kg. Find the total weight.

- a) 32 kg                      b) 82 kg                      c) 82 g                      d) 32 g

Q37. A gold finger ring weighs \_\_\_\_\_.

- a) 500 g                      b) 100g                      c) 5g                      d) 5 kg

Q38. Which is a better estimate for the weight of Michael's pet cat?

- a) 300 g                      b) 30 kg                      c) 13 kg                      d) 3 kg

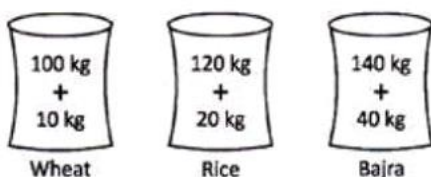
Q39. Which of the following is used to measure the weight of an object?

- a) ruler                      b) weighing scale                      c) measuring tape                      d) measuring beaker

Q40. The difference between 275 g and 150 g is \_\_\_\_\_.

- a) 25 g                      b) 50 g                      c) 120 g                      d) 125 g

Q41. Given below are the weight of various items. What is the difference between the weight of Bajra and Wheat?



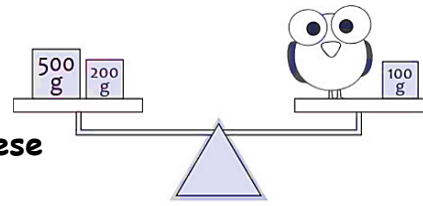
- a) 70 kg                      b) 80 kg                      c) 90 kg                      d) None of these

Q42. A cat weighs 3 kg, and a dog weighs 6 kg. How many such cats are needed to balance the weight of the dog on a scale?

- a) 2 cats                      b) 3 cats                      c) 4 cats                      d) 6 cats

Q43. What is the weight of the owl?

- a) 700 g                      b) 300 g                      c) 600 g                      d) none of these



Q44. Vinu and Shan together weigh 72 kg . If Vinu weighs 31 kg , what is Shan's weight?

- a) 100 kg                      b) 34 kg                      c) 41 kg                      d) none of these

Q45. A fruit vendor has 50 kg of mangoes. If he sells 30 kg, how many kilograms of mangoes are left with him?

- a) 80 kg                      b) 150 kg                      c) 20 g                      d) 20 kg

Q46. How many millilitres are in 1 litre?

- a) 10 ml+10 ml                      b) 100 ml+800 ml                      c) 500 ml+500 ml                      d) 1 ml

Q47. Which container has the most capacity?

- a) a cup                      b) a bucket                      c) a spoon                      d) a jug

Q48. If you pour 2 litres from a 7 litres bottle, how much is left?

- a) 5 litres                      b) 9 litres                      c) 7 litres                      d) 2 litres

Q49. Which is the best way to measure the amount of milk in the jugs?

- a) Weigh the jug                      b) Use a ruler                      c) Use a measuring cup                      d) Count the jugs

Q50. How many litres are in 4 bottles, if each bottle holds 1 litre of oil?

- a) 5 litres                      b) 3 litres                      c) 2 litres                      d) 4 litres

Q51. Which is more?

- a) 500ml                      b) 1000ml                      c) 900ml                      d) 700ml

Q 52. A tank had 400 litres of water. Amit's family used 82 litres of water. How much water is left in the tank?

- a) 324 litres                      b) 300 litres                      c) 302 litres                      d) 318 litres

Q53. A cup can hold 275 ml of liquid and a glass can hold 480 ml. What is the total capacity of the cup and glass together?

- a) 755 ml                      b) 821 ml                      c) 1 litre                      d) 205 ml

Q54. If you fill 75 ml of milk in the bottle, how much more is needed to make it 100 ml?

- a) 75 ml                      b) 175 ml                      c) 100 ml                      d) 25 ml

Q 55. If you pour 3 cups of water into a bowl that holds 5 cups, how much space is left?

- a) 1 cup                      b) 2 cups                      c) 3 cups                      d) 4 cups

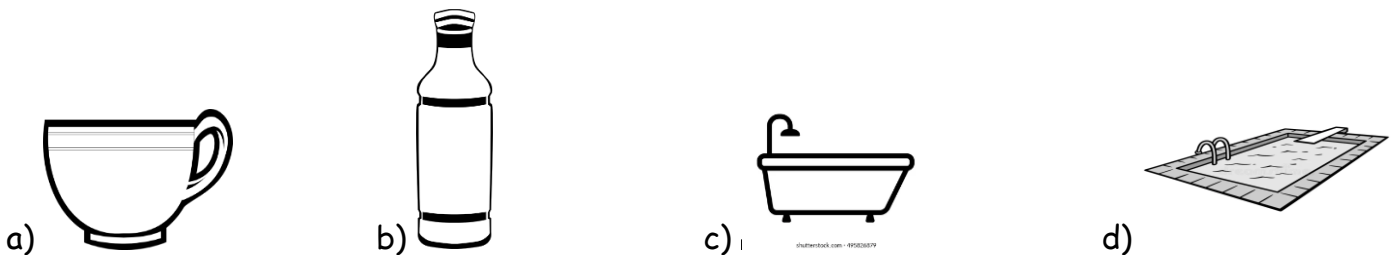
Q56. How many millilitres are there in half a litre?

- a) 50 ml                      b) 500 ml                      c) 5000 ml                      d) 5 ml

Q57. A glass contains 500 ml of juice, and another contains 300 ml. What is the total?

- a) 800 ml                      b) 1000 ml                      c) 700 ml                      d) 900 ml

Q58. Which has more capacity?




Q59. A jug holds 250 ml of juice. Cindy pour 150 ml into her glass. How much juice is left in the jug?

- a) 100 ml                      b) 250 ml                      c) 155 ml                      d) 2 ml

Q60. Which container can hold 5 litres of water?

- a) a paper cup                      b) a bucket                      c) a jug                      d) a bottle

Q61. Find the correct time?



- a) 6:00                      b) 7:30                      c) 6:30                      d) 5:30

Q62. If today is Tuesday, what day will it be in 7 days?

- a) Wednesday                      b) Monday                      c) Thursday                      d) Tuesday

Q63. What is another name for 12:00 at night?

- a) Noon                                  b) Morning                      c) Midnight                      d) Evening

Q64. How many hours are in two days?

- a) 12 hours                              b) 24 hours                      c) 48 hours                      d) 72 hours

Q65. Sapna went to watch a movie at 3 o'clock which finished at 6 o'clock. How many hours did she take to watch the movie?

- a) 1 hour                                  b) 3 hours                      c) 2 hours                      d) 4 hours

Q66. Navya was born on 29th February. When does her birth date come?

- a) Every Year                              b) Twice in a year  
c) every 2nd year                      d) every 4th year

Q67. What time is it when the hour hand is between 12 and 1 and the minute hand is on 6?

- a) 12:30                                  b) 1:30                              c) 12:00                              d) 1:00

Q68. How many days are in 8 weeks?

- a) 25 days                                  b) 21 days                              c) 56 days                              d) 35 days

Q69. Its 4:30 now. What is the time after 60 minutes?

- a) 5:30                                  b) 4:00                              c) 4:30                              d) 6:00

Q70. How many days are there in a leap year?

- a) 365 days                                  b) 29 days                              c) 366 days                              d) 364 days

Q71. How many days are there together in October and November?

- a) 62 days                                  b) 61 days                              c) 60 days                              d) 31 days

Q72. If the time is 11:00 pm now. What time will it be 3 hours later?

- a) 12:00 pm                                  b) 2:00 pm                              c) 6:00 am                              d) 2:00 am

Q73. If it is 1:00 am now, what time was it 2 hours ago?

- a) 11:30 am                      b) 11:00 am                      c) 12:30 pm                      d) 11:00 pm

Q74. How long does the minute hand of a clock take to complete its two rounds?

- a) 1 hour                      b) 2 hours                      c) 90 minutes                      d) 3 hours

Q75. Thursday is the \_\_\_\_\_ day of the week.

- a) 5th                      b) 6th                      c) 3rd                      d) 7th

### ANSWERS

TSE 2024-25

CLASS - II

SUBJECT - MATHEMATICS

1. c) 8 apples	26. b) 80 cm	51. b) 1000ml
2. a) 10	27. a) a book 30 cm long	52. d) 318 litres
3. b) 36	28. b) 4 m	53. a) 755 ml
4. d) 5 years	29. c) 100 cm	54. d) 25 ml
5. c) 900	30. b) 136 cm	55. b) 2 cups
6. a) 49	31. d) all of these	56. b) 500 ml
7. c) 25	32. a) 1 kg of cotton	57. a) 800 ml
8. b) 9-3	33. d) none of these	58. d) swimming pool
9. d) 2	34. c) 2 kg	59. a) 100 ml
10. b) $23-4=19$ ones	35. c) less than	60. b) a bucket
11. c) same number	36. b) 82kg	61. c) 6:30
12. a) 6 litres	37. c) 5 g	62. d) Tuesday
13. d) 11 tickets	38. d) 3kg	63. c) Midnight
14. b) 10 deer	39. b) weighing scale	64. c) 48 hours
15. a) 2	40. d) 125 g	65. b) 3 hours
16. b) 96 cm	41. a) 70 kg	66. d) every 4 <sup>th</sup> year
17. c) 27 m	42. a) 2 cats	67. a) 12:30
18. d) 14 cm	43. c) 600 g	68. c) 56 days
19. b) 100 cm	44. c) 41 kg	69. a) 5:30
20. c) 20 cm	45. d) 20 kg	70. c) 366 days
21. a) 2 m	46. c) 500 ml +500 ml	71. b) 61 days
22. b) 10 cm	47. b) a bucket	72. d) 2:00 am
23. d) Using a measuring tape	48. a) 5 litres	73. d) 11:00 pm
24. b) 40 cm, 90 cm, 1 m	49. c) Use a measuring cup	74. b) 2 hours
25. c) a shoelace	50. d) 4 litres	75. a) 5th



1. Riya has \_\_\_\_\_ hair that sparkles in the sunlight.  
a) heavy                      b) shiny                      c) short                      d) large
2. A butterfly is \_\_\_\_\_ than a dog.  
a) taller                      b) larger                      c) lighter                      d) fluffier
3. Look at the adjective underlined in the given sentence. What does it tell?  
The lemon is sour.  
a) Adjective of colour                      c) Adjective of size  
b) Adjective of shape                      d) Adjective of taste
4. Find the opposite adjective of "full".  
a) complete                      b) filled                      c) empty                      d) overfull
5. Identify the adjective.  
a) jaguar                      b) delicious                      c) wrestle                      d) flock
6. Sam bought dark chocolates from France, they were \_\_\_\_\_ in taste.  
a) sour                      b) salty                      c) bitter                      d) spicy
7. An adjective describes \_\_\_\_\_.  
a) verb                      b) punctuation                      c) preposition                      d) none of these
8. This is an adjective of colour. It can be used to describe fire, tomatoes and stop sign.  
a) yellow                      b) blue                      c) red                      d) green
9. Identify the adjective which does not match the picture.  
a) broken                      b) slow                      c) calm                      d) quiet
10. Tim saw a \_\_\_\_\_ bird flying in the sky.  
a) rocky                      b) three                      c) loud                      d) swift
11. Match the adjective 'tall' to the most suitable noun:  
a) pen                      b) building                      c) sky                      d) rainbow



12. David and Ann are in France. They \_\_\_\_\_ French.

- a) are speaking      b) are speakeing      c) are speakking      d) is speaking

13. Jack \_\_\_\_\_ a book.

- a) is borrowing      b) is borrowwing      c) are borrowing      d) is borrow

14. They \_\_\_\_\_ on the swings at the park.

- a) are swinging      b) is swinging      c) is swing      d) are swing

15. She is angry at her brother. She \_\_\_\_\_ with him.

- a) not playing      b) not play      c) is not playing      d) not played

16. Today, \_\_\_\_\_ are writing an essay in the class.

- a) she      b) he      c) we      d) I

17. Present continuous tense refers to an action or event

- a) which is happening or in progress in the present time  
b) which is already finished  
c) which is a habitual action  
d) which will be done in future

18. Kate \_\_\_\_\_ her bed at the moment.

- a) is make      b) is makeing      c) are making      d) is making

19. Mr Ravi \_\_\_\_\_ some packages right now. He seems quite busy.

- a) are not delivering      b) is not deliver      c) is delivering      d) are delivering

20. The main rule for using present continuous tense is \_\_\_\_\_.

- a) am /is /are + verb+ing      b) am /is /are + noun+ing  
c) am /is /are + adjective+ing      d) am/is /are + pronoun+ing

21. Asha and Reena \_\_\_\_\_ cricket match in the stadium.

- a) watch                      b) are watching                      c) is watching                      d) are looking

22. He usually goes for a walk at this time, but he \_\_\_\_\_ for a walk now.

- a) go                      b) not go                      c) is not going                      d) are going

23. Which word in the sentence is an adverb?

"She sings beautifully."

- a) She                      b) sings                      c) beautifully                      d) none of these

24. We add -ly to an \_\_\_\_\_ to make it an adverb.

- a) noun                      b) adjective                      c) verb                      d) pronoun

25. "He speaks very \_\_\_\_\_."

- a) kindly                      b) fast                      c) softly                      d) all of these

26. "The baby is crying \_\_\_\_\_."

- a) happily                      b) loudly                      c) rapidly                      d) closely

27. Adverbs tell us more about the \_\_\_\_\_.

- a) noun                      b) verb                      c) pronoun                      d) adjective

28. Which sentence contains an adverb?

- a) The woman speaks.  
b) The woman spoke gently.  
c) The woman is fair.  
d) None of these

29. Which word tells how something is done?

- a) box                      b) room                      c) chair                      d) neatly

30. Find the adverb in the sentence.

"The baby is sleeping soundly."

- a) sleeping                      b) soundly                      c) baby                      d) The

31. Yusuf cautiously wrapped the mirror in bubble wrap.

In the above sentence which word tells us how Yusuf wrapped the mirror.

- a) wrapped                      b) bubble                      c) cautiously                      d) none of these

32. Which word is an adverb in the sentence?

"She quickly ate her lunch."

- a) quickly                      b) ate                      c) lunch                      d) none of these

33. Choose the correctly spelt adverb from the following.

- a) carfully                      b) carefully                      c) carefully                      d) karefully

34. Which word is a demonstrative pronoun?

- a) there                      b) this                      c) than                      d) then

35. Choose the correct demonstrative pronoun for the sentence:

" \_\_\_\_\_ is my favourite toy. "

- a) That                      b) He                      c) The                      d) She

36. What does the word "those" refer to?

- a) far away things                      b) nearby things                      c) a place                      d) a person

37. Which is the correct demonstrative pronoun for something nearby?

- a) that                      b) those                      c) this                      d) him

38. Which word would you use for things that are nearby?

- a) this                      b) these                      c) it                      d) she

39. Choose the correct demonstrative pronoun for the sentence:

" \_\_\_\_\_ are my shoes."

- a) This                      b) That                      c) He                      d) These

40. Complete the sentence: " \_\_\_\_\_ flowers have pleasant smell."

- a) These                      b) He                      c) They                      d) Them

41. Complete the sentence: "\_\_\_\_\_ bag belongs to me."

- a) Those                      b) It                              c) Them                              d) This

42. Choose the demonstrative adjective in the sentence: "These pencils are sharp."

- a) pencils                      b) are                              c) These                              d) sharp

43. Complete the sentence: "\_\_\_\_\_ is my favourite book."

- a) This                              b) These                              c) Those                              d) Them

44. Complete the sentence: "Do you like \_\_\_\_\_ kittens over there?"

- a) these                              b) those                              c) this                              d) that

45. My dog \_\_\_\_\_ loudly at night.

- a) bark                              b) barks                              c) barking                              d) are barking

46. Which is the appropriate simple present tense for:

" My brother \_\_\_\_\_ in Paris."

- a) live                              b) living                              c) lives                              d) lived

47. Which sentence has a verb?

- a) new red car                              b) The cat sleeps on the bed.  
c) beautiful flowers                              d) heavy bag

48. The sun \_\_\_\_\_ in the east.

- a) rises                              b) rise                              c) rising                              d) risen

49. Mary \_\_\_\_\_ four glasses of water a day.

- a) drink                              b) take                              c) make                              d) drinks

50. Which sentence has simple present tense?

- a) A clock ticked.                              b) A clock ticks.  
c) A clock is ticking.                              d) A clock will tick.

51. Identify the verb in the sentence.

The chef cooks delicious food every day.

- a) chef                      b) food                      c) cooks                      d) delicious

52. He \_\_\_\_\_ the guitar very well.

- a) plays                      b) play                      c) playing                      d) sings

53. Choose the correct verb in the simple present tense.

John \_\_\_\_\_ to catch the ball.

- a) try                      b) trying                      c) tries                      d) tried

54. Tom usually \_\_\_\_\_ his homework before dinner.

- a) finish                      b) finishing                      c) finished                      d) finishes

55. My friends \_\_\_\_\_ soccer during recess.

- a) plays                      b) play                      c) playing                      d) is playing

56. There are many \_\_\_\_\_ in the garden.

- a) flower                      b) flowers                      c) floweres                      d) flours

57. I see five \_\_\_\_\_ flying in the sky.

- a) bird                      b) birds                      c) birdes                      d) birde

58. The \_\_\_\_\_ is jumping over the fence.

- a) rabbit                      b) rabbits                      c) rabit                      d) rabbites

59. The \_\_\_\_\_ is on the shelf.

- a) books                      b) book                      c) bookes                      d) book's

60. There were several \_\_\_\_\_ playing in the field.

- a) child                      b) children                      c) childs                      d) childrens

61. I collected many \_\_\_\_\_ from the garden.

- a) leaf                      b) leafs                      c) leaves                      d) leafes

62. She gave me two \_\_\_\_\_ of cake.

- a) piece                      b) pieces                      c) piecees                      d) pieceies

63. The \_\_\_\_\_ was very helpful.

- a) man                      b) men                      c) mans                      d) men's

64. There is a group of \_\_\_\_\_ in the forest.

- a) foxes                      b) foxs                      c) fox                      d) foxies

65. I saw many \_\_\_\_\_ swimming in the pond.

- a) goose                      b) geese                      c) geeses                      d) geoses

66. "John is reading a book in the park". Identify the proper noun in the given sentence.

- a) John                      b) book                      c) park                      d) reading

67. Which of the following is a common noun?

- a) Ganga                      b) school                      c) India                      d) Diwali

68. Choose the sentence with a proper noun.

- a) She is drinking water.                      b) We visited the Red Fort last weekend.  
c) I saw a cat on the roof.                      d) There are books on the table.

69. "Mohan has a big house in Mumbai." Which word is a common noun in the given sentence?

- a) house                      b) Mohan                      c) Mumbai                      d) big

70. Select the correct proper noun for the given common noun.

Monument → \_\_\_\_\_

- a) apple                      b) India                      c) Taj Mahal                      d) jasmine

71. Identify the proper noun from the following options.

- a) ocean                      b) Atlantic Ocean                      c) river                      d) mountain

72. "Rajiv and Rahul are playing in the field." Identify the common noun in this sentence.

- a) Rajiv                      b) Rahul                      c) field                      d) playing

73. Which of the following is not a proper noun?

- a) May                      b) London                      c) teacher                      d) Amazon

74. "Sara and Rayan are going to Paris for vacation". Identify the proper nouns in the sentence.

- a) Rayan, Paris, vacation                      b) Sara, Rayan, Paris  
c) Sara, Rayan, going                      d) Rayan, Paris, going

75. Choose the sentence which has only common nouns.

- a) The boat is sailing on the sea.                      b) Ravi went to Delhi yesterday.  
c) Priya is eating an apple.                      d) India has many rivers.



**ANSWERS****TSE 2024-25****CLASS- II****SUBJECT: ENGLISH**

1. b) shiny	25.d) all of these	51.c) cooks
2. c) lighter	26.b) loudly	52.a) plays
3. d) Adjective of taste	27.b) verb	53.c) tries
4. c) empty	28.b) The woman spoke gently.	54.d) finishes
5. b) delicious	29.d) neatly	55.b) play
6. c) bitter	30.b) soundly	56.b) flowers
7. d) none of these	31.c) cautiously	57.b) birds
8. c) red	32.a) quickly	58.a) rabbit
9. a) broken	33.c) carefully	59.b) book
10.d) swift	34.b) this	60.b) children
11. b) building	35.a) That	61.c) leaves
12. a) are speaking	36.a) far away things	62.b) pieces
13. a) is borrowing	37.c) this	63.a) man
14. a) are swinging	38.b) these	64.a) foxes
15. c) is not playing	39.d) These	65.b) geese
16. c) we	40.a) These	66.a) John
17. a) which is happening or in progress in the present time	41.d) This	67.b) school
18. d) is making	42.c) These	68.b) We visited the Red Fort last weekend.
19. c) is delivering	43.a) This	69.a) house
20.a) am /is /are + verb+ing	44.b) those	70.c) Taj Mahal
21. b) are watching	45.b) barks	71. b) Atlantic Ocean
22.c) is not going	46.c) lives	72.c) field
23.c) beautifully	47.b) The cat sleeps on the bed.	73.c) teacher
24.b) adjective	48.a) rises	74.b) Sara, Rayan, Paris
	49.d) drinks	75.a) The boat is sailing on the sea.
	50.b) A clock ticks.	

1. Which of the following types of plants have weak stem?

- a) shrubs                      b) climbers                      c) creepers                      d) both b and c

2. Which of these does not give us cooking oil?

- a) Mango seeds              b) Sunflower seeds              c) Mustard seeds              d) Coconut

3. Which of these is an important function of the roots of a plant?

- a) To absorb oxygen from the atmosphere  
b) To absorb carbon dioxide from the atmosphere  
c) To absorb water and minerals from the soil  
d) All of the above

4. What is obtained from plants and is used to make paper?

- a) Wood                      b) Cotton                      c) Spices                      d) Cocoa

5. Which herb smells very nice and is often used in cooking?

- a) Jute                      b) Mint                      c) Coconut                      d) Pineapple

6. What is the first thing that comes out of a seed when it starts to grow?

- a) Flower                      b) Leaf                      c) Root                      d) Stem

7. Which of these is an edible root?

- a) Apple                      b) Carrot                      c) Cabbage                      d) Sugarcane

8. What is a young plant called?

- a) Stem                      b) Seed                      c) Leaf                      d) Seedling

9. Shrubs are plants with small, \_\_\_\_\_ stems.

- a) weak                      b) strong                      c) woody                      d) huge

10. Which of these is not a herb?

- a) Coriander                      b) Hibiscus                      c) Mint                      d) Spinach

11. Which of the following is used to make perfume?

- a) Rose                      b) Cauliflower                      c) Spinach                      d) Broccoli

12. \_\_\_\_\_ is an edible stem.

- a) Carrot                      b) Broccoli                      c) Lettuce                      d) Celery

13. Which of the following is used as a medicine in home remedies?

- a) Rubber                      b) Cotton                      c) Tulsi                      d) None of these

14. \_\_\_\_\_ is made from jute.

- a) Paper bags                      b) Gunny bags                      c) Plastic bags                      d) Leather bags

15. Which of the following is not a spice?

- a) Cloves                      b) Cereals                      c) Cumin                      d) Cardamom

16. Who repairs and makes shoes and slippers?

- a) Blacksmith                      b) Cobbler                      c) Carpenter                      d) Tailor

17. Who provides us with things made of metal?

- a) Mechanic                      b) Blacksmith                      c) Potter                      d) Carpenter

18. What does the potter use to make pots?

- a) Clay                      b) Wood                      c) Metal                      d) Plastic

19. Who makes furniture, doors and windows with wood?

- a) Blacksmith                      b) Tailor                      c) Farmer                      d) Carpenter

20. Who among the following delivers letters and parcels to our homes?

- a) Postman                      b) Tailor                      c) Farmer                      d) Baker

21. Which person takes care of plants and flowers in gardens or parks?

- a) Farmer                      b) Gardener                      c) Mason                      d) Tailor

22. Who among the following helps to maintain law and order in the neighbourhood?

- a) Teacher                      b) Porter                      c) Policeman                      d) Florist

23. Who plays a key role in designing and constructing bridges?

- a) Doctor                      b) Engineer                      c) Mason                      d) Carpenter

24. What does a mechanic repair?

- a) Pipes and taps                      b) Shoes and slippers                      c) Furniture                      d) Vehicles

25. Who sells medicines?

- a) The stationer                      b) The musician                      c) The chemist                      d) The florist

26. Which person's job is to entertain people and make them laugh?

- a) Draper                      b) Green grocer                      c) Clown                      d) Cobbler

27. A draper is someone who specializes in selling:

- a) Cloth or fabric                      b) Medicines                      c) Books                      d) Flowers

28. Who composes beautiful songs for entertainment?

- a) Musician                      b) Singer                      c) Writer                      d) Draper

29. Rita needs flowers to decorate for a party. Who should she go to?

- a) Stationer                      b) Florist                      c) Draper                      d) Chemist

30. Who is most likely to help children learn to read, write, draw and dance?

- a) Doctor                      b) Teacher                      c) Policeman                      d) Cobbler

31. Which of the following is a domestic animal?

- a) Tiger                      b) Cow                      c) Lion                      d) Elephant

32. Which young one does not hatch from an egg?

- a) Chick                      b) Duckling                      c) Calf                      d) Tadpole

33. What is the unique feature of birds that helps them to make nests?

- a) Their feathers      b) Their wings      c) Their beaks      d) Their claws

34. Which of these animals is not an amphibian?

- a) Salamander      b) Frog      c) Both a and b      d) Dolphin

35. Which of the following animals is not a herbivore?

- a) Goat      b) Camel      c) Crocodile      d) Rabbit

36. Which of these animals live in colonies?

- a) Monkeys and squirrels      b) Bees and ants      c) Parrots and pigeons      d) Wolves and foxes

37. Which of the following animals can crawl?

- a) Snake      b) Eagle      c) Horse      d) Dolphin

38. Which of the following refers to an animal that eats both plants and animals?

- a) Scavenger      b) Herbivore      c) Carnivore      d) Omnivore

39. Which of the following is not a pet?

- a) Hamster      b) Cat      c) Giraffe      d) Parrot

40. It lives in a coop.

- a) Horse      b) Hen      c) Cow      d) Dog

41. Which of the following is the odd one out?

- a) Pigeons      b) Sparrows      c) Butterflies      d) Crows

42. It is a scavenger.

- a) Deer      b) Vulture      c) Tiger      d) Camel

43. Whose baby is called a foal?

- a) Cow      b) Lion      c) Cat      d) Horse

44. Which vehicle is used in times of emergency such as floods or landslides?

- a) **Aeroplane**                      b) **Train**                      c) **Helicopter**                      d) **Metro**

45. A \_\_\_\_\_ slides up and down the hill with the help of a metal rope.

- a) **parachute**                      b) **train**                      c) **cable car**                      d) **submarine**

46. Which is the fastest and most comfortable means of transport to travel within the city?

- a) **Metro rail**                      b) **Tonga**                      c) **Car**                      d) **Bus**

47. \_\_\_\_\_ is a means of water transport.

- a) **Helicopter**                      b) **Yacht**                      c) **Car**                      d) **Train**

48. Which of the following can carry a large number of people and goods over long distances?

- a) **Cable car**                      b) **Boat**                      c) **Ship**                      d) **Yacht**

49. We need a \_\_\_\_\_ to travel to other countries.

- a) **school ID card**                      b) **bank account**                      c) **passport**                      d) **driving license**

50. \_\_\_\_\_ is a vehicle with an engine.

- a) **Tonga**                      b) **Sailboat**                      c) **Parachute**                      d) **Bus**

51. \_\_\_\_\_ travels under water.

- a) **Ship**                      b) **Submarine**                      c) **Boat**                      d) **Yacht**

52. \_\_\_\_\_ was the first city in India to have metro train.

- a) **Mumbai**                      b) **Delhi**                      c) **Kolkata**                      d) **Chennai**

53. Which vehicle is pulled by an animal?

- a) **Tonga**                      b) **Car**                      c) **Submarine**                      d) **Bus**

54. Which of these vehicles runs on petrol?

- a) Sailboat                      b) Car                      c) Bullock Cart                      d) Parachute

55. Which is the fastest and most expensive means of transport?

- a) Bus                      b) Train                      c) Aeroplane                      d) Metro rail

56. Which among these is not a fuel?

- a) CNG                      b) Petrol                      c) Diesel                      d) Oxygen

57. Which among these is not an unusual vehicle?

- a) Hot air balloon                      b) Parachute                      c) Bicycle                      d) Cable car

58. Which animal is not commonly used to pull a cart?

- a) Horse                      b) Camel                      c) Elephant                      d) Bull

59. Which season is also known as "Fall"?

- a) Monsoon                      b) Autumn                      c) Winter                      d) Spring

60. What happens to days and nights during winter in most places?

- a) Days are longer than nights.                      b) Nights are longer than days.  
c) Days and nights are of same length.                      d) Days are colder and nights are hotter.

61. Which is the odd one out?

- a) Summer                      b) Winter                      c) Cloudy                      d) Monsoon

62. Which of the following are winter months?

- a) November, December, January                      b) July, August, September  
c) February, March                      d) April, May, June

63. Which of the following are seasons for a shorter time?

- a) Summer, Winter                      b) Summer, Autumn  
c) Spring, Autumn                      d) Spring, Winter

64. Which season is best for picnics?

- a) Monsoon                      b) Summer                      c) Winter                      d) Spring

65. We use room heaters and blowers in this season.

- a) Spring                      b) Winter                      c) Autumn                      d) Summer

66. Which of these is a method of communication using gestures?

- a) Talking                      b) Writing                      c) Sign language                      d) Reading

67. It can be used to send an SMS.

- a) Newspaper                      b) Radio                      c) Mobile phone                      d) Magazine

68. What is the main purpose of communication?

- a) To stay quiet                      b) To share information                      c) To play games                      d) To eat together

69. It helps us to search information and shop online.

- a) Television                      b) Internet                      c) Radio                      d) Newspaper

70. It is a means of mass communication.

- a) Letter                      b) Telephone                      c) Television                      d) Greeting card

71. Which of these is not a modern means of communication?

- a) Television                      b) Social media                      c) Pigeons                      d) Mobile phone

72. It is the fastest means of communication.

- a) Internet                      b) Newspaper                      c) Radio                      d) Letter

73. Which code should be written on the letter before posting it?

- a) STD                      b) ISD                      c) SMS                      d) PIN



74. Which of the following was invented by Alexander Bain?

- a) Telephone                      b) Fax machine                      c) Radio                      d) Internet

75. Which of these is an example of modern communication?

- a) Sending an e-mail                      b) Writing a letter  
c) Sending a postcard                      d) Delivering messages through messengers

**ANSWERS****TSE 2024-25****CLASS - II****SUBJECT - EVS**

1. d) both b and c	30. b) Teacher	59. b) Autumn
2. a) Mango seeds	31. b) Cow	60. b) Nights are longer than days.
3. c) To absorb water and minerals from the soil	32. c) Calf	61. c) Cloudy
4. a) Wood	33. c) Their beaks	62. a) November, December, January
5. b) Mint	34. d) Dolphin	63. c) Spring, Autumn
6. c) Root	35. c) Crocodile	64. d) Spring
7. b) Carrot	36. b) Bees and ants	65. b) Winter
8. d) Seedling	37. a) Snake	66. c) Sign language
9. c) woody	38. d) Omnivore	67. c) Mobile phone
10. b) Hibiscus	39. c) Giraffe	68. b) To share information
11. a) Rose	40. b) Hen	69. b) Internet
12. d) Celery	41. c) Butterflies	70. c) Television
13. c) Tulsi	42. b) Vulture	71. c) Pigeons
14. b) Gunny bags	43. d) Horse	72. a) Internet
15. b) Cereals	44. c) Helicopter	73. d) PIN
16. b) Cobbler	45. c) cable car	74. b) Fax machine
17. b) Blacksmith	46. a) Metro rail	75. a) Sending an e-mail
18. a) Clay	47. b) Yacht	
19. d) Carpenter	48. c) Ship	
20. a) Postman	49. c) passport	
21. b) Gardener	50. d) Bus	
22. c) Policeman	51. b) Submarine	
23. b) Engineer	52. c) Kolkata	
24. d) Vehicles	53. a) Tonga	
25. c) The chemist	54. b) Car	
26. c) Clown	55. c) Aeroplane	
27. a) Cloth or fabric	56. d) Oxygen	
28. a) Musician	57. c) Bicycle	
29. b) Florist	58. c) Elephant	

- 1) \_\_\_\_\_ leaves are used for medicinal purposes.  
a) Maple                      b) Mango                      c) Palm                      d) Neem
- 2) Food can be served on \_\_\_\_\_  
a) papaya leaves      b) peepal leaves                      c) banana leaves                      d) tomato leaves
- 3) India's National tree is \_\_\_\_\_  
a) mango tree      b) banyan tree                      c) peepal tree                      d) gulmohar tree
- 4) Which part of the plant prepares food?  
a) flower                      b) leaf                      c) root                      d) bud
- 5) Which insect is known for its bright colours and wing patterns?  
a) butterfly                      b) firefly                      c) beetle                      d) dragonfly
- 6) Which insect has the ability to jump long distances?  
a) lady bird                      b) grasshopper                      c) dragonfly                      d) cockroach
- 7) This insect is famous for its loud chirping. Which is it?  
a) silkworm                      b) ant                      c) moth                      d) cricket
- 8) Which insect has a hard, protective outer shell?  
a) honeybee                      b) ant                      c) beetle                      d) caterpillar
- 9) What changes its shape every day?  
a) The sun                      b) The moon                      c) The Earth                      d) The stars
- 10) What is the shape of the Earth?  
a) square                      b) triangular                      c) flat                      d) spherical
- 11) Where does the Moon get its light from?  
a) sun                      b) stars                      c) Earth                      d) clouds
- 12) Where does life exist?  
a) Earth                      b) moon                      c) stars                      d) Venus
- 13) Which device is used for reading digital books?  
a) I- pad                      b) E book reader                      c) Camcorder                      d) Camera
- 14) Which device is used to record videos?  
a) Camcorder                      b) I-pad                      c) E book reader                      d) Play station

15) Which device is a small, handheld computer?

- a) Television      b) Play station      c) Camcorder      d) Palmtop

16) Which device is used for listening to music?

- a) E book reader      b) I pod      c) Camera      d) Telephone

17) The Taj Mahal is situated in which city?

- a) Kolkata      b) Mumbai      c) Agra      d) Chennai

18) The Gateway of India is a famous landmark in

- a) Mumbai      b) Bengaluru      c) New Delhi      d) Agra

19) Where is the India Gate located?

- a) Mumbai      b) New Delhi      c) Jaipur      d) Kolkata

20) The Thiruvalluvar Statue is found in

- a) Agra      b) Amritsar      c) Kanniyakumari      d) Mumbai

21) How many eyes (eyelets) does a caterpillar have?

- a) 6      b) 10      c) 12      d) 14

22) Frogs drink water through their \_\_\_\_\_.

- a) mouth      b) skin      c) tongue      d) gills

23) A bolt of lightning is \_\_\_\_\_ times hotter than the Sun.

- a) two      b) three      c) four      d) five

24) When hippopotamus gets excited its sweat becomes \_\_\_\_\_.

- a) blue      b) yellow      c) green      d) red

25) Which harvest festival is famous in Assam?

- a) Rongali Bihu      b) Vishu      c) Kut      d) Holi

26) Which is the festival of harvesting rice and flowers?

- a) Dussehra      b) Raksha Bandan      c) Onam      d) Easter

27) Pongal is the harvest festival celebrated in which state?

- a) Bihar      b) Maharashtra      c) Karnataka      d) Tamil Nadu

28) Which of the following is a harvest festival?

- a) Eid      b) Gurupurab      c) Christmas      d) Baisakhi

29) A \_\_\_\_\_ is a vehicle used on farms for ploughing.

- a) truck                      b) submarine                      c) tractor                      d) train

30) Identify the vehicle.



- a) car                      b) bulldozer                      c) scooter                      d) combine harvester

31) Which heavy vehicle is used at construction sites?

- a) excavator                      b) scooter                      c) train                      d) bus

32) A vehicle used for mixing cement.

- a) combine harvester                      b) fire engine                      c) forklift                      d) cement mixer truck

33) Which Indian city hosted the 2023 G20 summit?

- a) New Delhi                      b) Bengaluru                      c) Mumbai                      d) Jaipur

34) Who is the newly elected Chief Minister of Maharashtra?

- a) Eknath Shinde                      b) Devendra Fadnavis                      c) Ajit Pawar                      d) Uddhav Thackeray

35) What was the theme of India's Independence Day in 2024?

- a) Amrit Kaal                      b) Viksit Bharat                      c) Swachh Bharat                      d) Unity in Diversity

36) Which among the following is not a national festival of India?

- a) Independence Day                      b) Republic Day                      c) Ganesh Chaturthi                      d) Gandhi Jayanti

37) Whose birthday is celebrated as the Teacher's Day?

- a) Dr. Rajendra Prasad                      b) Bhagat Singh  
c) Dr. Sarvepalli Radhakrishnan                      d) Jawaharlal Nehru

38) Which Indian city hosted the 2024 International Film Festival?


- a) Mumbai                      b) Bengaluru                      c) Goa                      d) Kolkata

39) Which Indian city was declared the cleanest in the country?

- a) Delhi                      b) Indore                      c) Bengaluru                      d) Pune

40) Which among the following festivals is celebrated on the same day every year?

- a) Diwali                      b) Guru Nanak Jayanti                      c) Christmas                      d) Eid

- 41) A new jumping spider species was discovered in which Indian city?  
a) Mumbai                      b) Pune                      c) Hyderabad                      d) Chennai
- 42) Which country launched the world's biggest telescope in 2024?  
a) USA                      b) India                      c) Chile                      d) Russia
- 43) Who is the King of the United Kingdom?  
a) Charles III                      b) William                      c) Harry                      d) George
- 44) Which country became malaria-free in 2024?  
a) South Africa                      b) Brazil                      c) Egypt                      d) Indonesia
- 45) Who won the Nobel Peace Prize in December 2024?  
a) Malala Yousafzai                      b) David Attenborough                      c) Nihon Hidankyo                      d) Abiy Ahmed
- 46) Which is the tallest building in the world?  
a) Burj Khalifa                      b) Eiffel Tower                      c) Empire State Building                      d) Shanghai Tower
- 47) Who is the world's youngest chess champion?  
a) Gukesh Dommaraju                      b) Ding Liren                      c) Arjun Erigaisi                      d) Magnus Carlsen
- 48) Which day is celebrated as Tsunami Awareness Day every year?  
a) 5<sup>th</sup> November                      b) 15<sup>th</sup> November                      c) 25<sup>th</sup> October                      d) 17<sup>th</sup> September
- 49) Who was re-elected as the president of The United States of America in 2024?  
a) Kamala Harris                      b) Donald Trump                      c) Joe Biden                      d) Ron DeSantis
- 50) Which country approved social media ban for children aged under 16?  
a) Germany                      b) USA                      c) Australia                      d) Canada
- 51) Identify the sports shown here.  
a) polo                      b) rafting  
c) horse racing                      d) hurdle race
- 
- 52) Formula 1 race is associated with?  
a) motorcar racing                      b) skiing                      c) rafting                      d) go carting
- 53) Who has become the first Indian cricketer to have played 100 matches each in all three formats of the game? ( test matches, ODI and T20)  
a) Hardik Pandya                      b) Virat Kohli                      c) Rohit Sharma                      d) Jasprit Bumrah
- 54) How many rings are there in the Olympic flag?  
a) 6                      b) 5                      c) 7                      d) 8

55) Which country will host 2026 Asian games?

- a) India                      b) Japan                      c) New Zealand                      d) China

56) Which country was chosen to host 2034 FIFA World Cup?

- a) USA                      b) Qatar                      c) Saudi Arabia                      d) Spain

57) When is the World Environment Day observed?

- a) 7<sup>th</sup> June                      b) 15<sup>th</sup> January                      c) 5<sup>th</sup> June                      d) 25<sup>th</sup> July

58) Which country won the FIFA world cup 2022 held in Qatar?

- a) Saudi Arabia                      b) France                      c) Argentina                      d) Spain

59) Who invented the telephone?

- a) Louis Pasteur                      b) Charles Darwin                      c) Marie Curie                      d) Alexander Graham Bell

60) Who has composed the national anthem of India?

- a) Rabindranath Tagore                      b) Mahatma Gandhi                      c) Lal Bahadur Shastri                      d) Jawaharlal Nehru

61) Who was the first president of India?

- a) Ram Nath Kovind                      b) Narendra Modi                      c) Dr. Rajendra Prasad                      d) Abdul Kalam

62) The strongest currency in the world is \_\_\_\_\_.

- a) Dollar                      b) Kuwaiti Dinar                      c) Yuan                      d) None of the above

63) How many bones are there in the adult human body?

- a) 200                      b) 108                      c) 300                      d) 206

64) Paper is obtained from which plant?

- a) bamboo                      b) banyan                      c) neem                      d) mango

65) Where is the Thar Desert located?

- a) Rajasthan                      b) South Africa                      c) Saudi Arabia                      d) Gujarat

66) Who discovered Penicillin?

- a) Faraday                      b) Alexander Fleming                      c) David M G                      d) James.P.Allison

67) Kuchipudi is the dance form of which state?

- a) Kerala                      b) Andhra Pradesh                      c) Haryana                      d) Maharashtra

68) What does "endangered" animals mean?

- a) Animals that are healthy and safe.                      b) Animals that are in danger of dying.  
c) Animals that live forever.                      d) Animals that are very big.

69) Which animal is endangered because of its horns?

- a) rhino                      b) koala                      c) dolphin                      d) owl

70) Which of these animals is a sea creature that is endangered?

- a) guitarfish                      b) oysters                      c) blue whale                      d) All of the above

71) Who issued the Red List?

- a) World Wildlife Fund (WWF)  
b) United Nations Environment Programme (UNEP)  
c) International Union for the Conservation of Nature (IUCN)  
d) Greenpeace

72) Which of these is the way to say "Hello" in French?

- a) Hola                      b) Namaste                      c) Bonjour                      d) Konnichiwa

73) How do Japanese greet each other?

- a) Bonjour                      b) Hallo                      c) Konnichiwa                      d) Hola

74) What is the greeting used to say "Hello" in Russian?

- a) Hallo                      b) Zdravstvuyte                      c) Konnichiwa                      d) Guten Tag

75) How do you say "Hello" in Uganda (Swahili)?

- a) Kikati (Chi)                      b) Bonjour                      c) Ciao                      d) Ni hao



**ANSWERS****TSE 2024-2025****CLASS-II****SUBJECT: GENERAL KNOWLEDGE**

1. d) Neem	40.c) Christmas
2. c) banana leaves	41.b) Pune
3. b) banyan tree	42.c) Chile
4. b) leaf	43.a) Charles III
5. a) butterfly	44.c) Egypt
6. b) grasshopper	45.c) Nihon Hidankyo
7. d) cricket	46.a) Burj Khalifa
8. c) beetle	47.a) Gukesh Dommaraju
9. b) The moon	48.a) 5 <sup>th</sup> November
10. d) spherical	49.b) Donald Trump
11. a) sun	50.c) Australia
12. a) Earth	51. a) polo
13. b) E book reader	52.a) motorcar racing
14. a) camcorder	53.b) Virat Kohli
15. d) palmtop	54.b) 5
16. b) I pod	55.b) Japan
17. c) Agra	56.c) Saudi Arabia
18. a) Mumbai	57.c) 5 <sup>th</sup> June
19. b) New Delhi	58.c) Argentina
20. c) Kanniyakumari	59.d) Alexander Graham Bell
21. c) 12	60.a) Rabindranath Tagore
22. b) skin	61. c) Dr. Rajendra Prasad
23. d) five	62. b) Kuwaiti Dinar
24. d) red	63. d) 206
25. a) Rongali Bihu	64. a) bamboo
26. c) Onam	65. a) Rajasthan
27. d) Tamil Nadu	66. b) Alexander Fleming
28. d) Baisakhi	67. b) Andhra Pradesh
29. c) tractor	68. b) Animals that are in danger of dying.
30. b) bulldozer	69. a) rhino
31. a) excavator	70. c) blue Whale
32. d) cement mixer truck	71. c) International Union for the Conservation of Nature (IUCN)
33. a) New Delhi	72. c) Bonjour
34. b) Devendra Fadnavis	73. c) Konnichiwa
35. b) Viksit Bharat	74. b) Zdravstvuyte
36. c) Ganesh Chaturthi	75. a) Kikati (Chi)
37. c) Dr. Sarvepalli Radhakrishnan	
38. c) Goa	
39. b) Indore	