

INTERNATIONAL INDIAN SCHOOL, DAMMAM
TALENT SEARCH EXAMINATION (TSE 2024-25)
UPPER PRIMARY SECTIONS

CLASS III
STUDY MATERIAL

Note : 1. Use the given study material as a reference for preparation of TSE.

2. Be updated with the current affairs from the month of Nov '24 to Jan '25.

TSE 2024-25 CLASS: III SUBJECT – MATHEMATICS

1. What is the place value of 4 in 4,352?
a) 4 b) 400 c) 4,000 d) 40
2. Add 342 and 528.
a) 860 b) 870 c) 880 d) 890
3. Subtract 638 from 1,200.
a) 552 b) 562 c) 572 d) 582
4. A pentagon has how many sides?
a) 4 b) 5 c) 6 d) 8
5. 49 tens x 6 ones
a) 2940 b) 3940 c) 4940 d) 2941
6. How many days are there in February during a leap year?
a) 28 b) 29 c) 30 d) 31
7. Divide 45 by 5.
a) 5 b) 6 c) 7 d) 9
8. A fraction with 1 as the numerator is called:
a) Half b) Quarter c) Unit fraction d) Improper fraction
9. Two thousand twenty is _____
a) 2220 b) 2020 c) 2200 d) 2002
10. Which two numbers have a sum as 80?
a) 30 and 25 b) 30 and 60 c) 20 and 60 d) 25 and 35
11. 18 tens - 10 ones
a) 160 b) 170 c) 190 d) 200
12. What is the shape of a dice?
a) Sphere b) Cube c) Cone d) Cylinder

13. Which fact is connected to $6 \times 4 = 24$?

- a) $8 \times 3 = 24$ b) $30 - 6 = 24$ c) $12 \times 2 = 24$ d) $24 \div 6 = 4$

14. How many months are there in 3 years?

- a) 36 b) 24 c) 48 d) 63

15. If 60 is double a number, the number is _____

- a) 20 b) 30 c) 120 d) 90

16. If a pizza is divided into 8 equal slices, what is each slice called?

- a) Whole b) Quarter c) One-Eighth d) One-Sixth

17. Arrange in ascending order: 88, 888, 808

- a) 88,808,888 b) 808,888,88 c) 888,808,88 d) 888,88,808

18. 6699 is 1 less than

- a) 6700 b) 6800 c) 6698 d) 6701

19. 8800 is 1 more than.

- a) 8801 b) 8799 c) 8802 d) 8699

20. BCD, CDB, DBC, _____, _____,

- a) BCD, CDB b) CDB, BCD c) CDB, DBC d) DBC, CDB

21. _____ will be the division fact for 12 beads to be placed in 2 strings.

- a) $12 \div 2$ b) $12 \div 6$ c) $6 \div 12$ d) $2 \div 12$

22. Meera was born on 1st March 2012. How old will she turn on 1st March 2024?

- a) 12 b) 24 c) 48 d) 60

23. What comes next in the pattern?

▲●▼●▲●▼●▲●_____

- a) ▲ b) ▼ c) ● d) ●

24. What is one sixth of a dozen ?

- a) $\frac{2}{3}$ b) $\frac{3}{2}$ c) 2 d) 3

25. 100 less than 4002 is

- a) 3902 b) 4000 c) 4102 d) 4200

26. 15 tens + 21 ones

- a) 181 b) 171 c) 161 d) 201

27. What will you take away from 20 to leave 9?

- a) 10 b) 8 c) 1 d) 11

28. What comes next?

▲●▲, ▲●●▲, ▲●●●▲, _____

- a) ▲●●●▲ b) ▲●●●●▲ c) ●●●●▲ d) ▲●●

29. The time is 4:40, if the hour hand is between 4 and 5 and minute hand is at _____
 a) 8 b) 9 c) 6 d) 10
30. 12 days before February 11th is _____
 a) 29th January b) 1st February c) 30th January d) 31st January
31. Which odd number comes after 1999 ?
 a) 1998 b) 2000 c) 2001 d) 200
32. What fraction of a day is 6 hours?
 a) $\frac{1}{2}$ b) $\frac{6}{36}$ c) $\frac{6}{24}$ d) $\frac{2}{6}$
33. 4467, 5467, 6467, 7467, _____
 a) 9467 b) 8467 c) 4867 d) 6476
34. Sara bought a doll for Rs.205, a pack of balloon for Rs.54 and a birthday cap for Rs.5.
 How much total amount did she spend altogether?
 a) 265 b) 364 c) 164 d) 264
35. Quarter to 9 can be written as _____
 a) 9:15 b) 8:15 c) 9:45 d) 8:45
36. AB, FG, KL, _____
 a) CD b) HI c) PQ d) QR
37. _____ is the product of 20 and 100
 a) 200 b) 2000 c) 120 d) 80
38. It is 6:00 now. It was _____ half an hour ago.
 a) 4:30 b) 5:30 c) 6:30 d) 5:45
39. Divide 50 by 7, quotient= _____
 a) 71 b) 7 c) 1 d) 8
40. Thrice a number is 9. Four times that number will be _____.
 a) 36 b) 18 c) 27 d) 81
41. Biggest 4 digit number – biggest 3 digit number is
 a) 9000 b) 1000 c) 900 d) 999
42. 1 fortnight is how many days?
 a) 30 b) 31 c) 14 d) 15
43. What comes next in the pattern?
 ●1, ●2, ●3, ●4, _____
 a) ●5 b) ■5 c) ●6 d) ■4
44. If one flower cost Rs.7. What is the cost of 7 such flowers?
 a) 41 b) 40 c) 14 d) 49

45. How many small divisions are there between 2 numbers on a dial?
a) 10 b) 1 c) 5 d) 15
46. If today is Tuesday 15th, the date of next Tuesday is _____
a) 7 b) 8 c) 23 d) 22
47. What is $\frac{1}{4}$ of 16?
a) 2 b) 3 c) 4 d) 6
48. What is the place of 6 in 6,527?
a) 6 b) hundreds c) thousands d) 6,000
49. 35 tens _____ 25 tens + 5 ones
a) less than b) greater than c) equal to d) none of the above
50. The answer of subtraction is called as the _____
a) addends b) sum c) product d) difference
51. 8, 16, 24, _____, _____
a) 32, 40 b) 8, 16 c) 30, 38 d) 26, 28
52. Twice the product of smallest 2-digit number and smallest 1 digit number.
a) 10 b) 100 c) 20 d) 1000
53. 2 hours after 7:45 is _____
a) 5:45 b) 9:45 c) 9:40 d) 9:15
54. How many pairs are in 32 earrings?
a) 7 b) 8 c) 16 d) 64
55. What fraction of a pizza is left if you eat 3 out of 8 slices?
a) $\frac{3}{8}$ b) $\frac{5}{8}$ c) $\frac{6}{8}$ d) $\frac{8}{8}$
56. Arrange in ascending order: 4, 54, 45, 5
a) 4, 45, 54, 5 b) 4, 5, 54, 45 c) 4, 5, 45, 54 d) 54, 45, 5, 4
57. The sum of 4,123 and 2,987.
a) 7,110 b) 7,111 c) 7,112 d) 7,113
58. What will you get if you add 20 and 80 and then take away 90
a) 190 b) 10 c) 100 d) 20
59. $88 \div \underline{\quad} = 11$
a) 88 b) 6 c) 7 d) 8
60. Give the number before 4080.
a) 4081 b) 4079 c) 4018 d) 4097
61. How many months have 31 days?
a) 5 b) 6 c) 7 d) 8

62. Find the double of number 25

- a) 27 b) 500 c) 45 d) 50

63. Which of the following is not a fraction?

- a) $\frac{2}{3}$ b) $\frac{5}{7}$ c) $\frac{8}{1}$ d) $\frac{7}{0}$

64. _____ - 100 = 165

- a) 265 b) 65 c) 165 d) 365

65. 10 more than 99.

- a) 89 b) 109 c) 99 d) 199

66. Give the number after 7896.

- a) 7897 b) 7895 c) 7985 d) 7789

67. What is the greatest 3-digit number using different digits?

- a) 987 b) 678 c) 978 d) 879

68. If the hour hand is between 7 and 8; minute hand is at 6.

- a) quarter to 7 b) half past 8 c) half past 7 d) quarter past 8

69. What is the total number of days in March, April and May altogether?

- a) 89 b) 90 c) 91 d) 92

70. The remainder in division is also known as _____

- a) left over b) quotient c) over left d) divisor

71. What fraction of a year is 3 months?

- a) $\frac{1}{3}$ b) $\frac{3}{12}$ c) $\frac{6}{12}$ d) $\frac{1}{6}$

72. 5678, 5778, 5878, _____

- a) 5978 b) 5798 c) 5578 d) 5678

73. What comes next in the pattern?

◀▶, ▶◀, ▶▶, _____

- a) ▶▶ b) ◀▶ c) ▶▶ d) ◀◀

74. If 64 is divided by 9, the remainder is _____

- a) 1 b) 7 c) 0 d) 2

75. 8 thousands + 9 hundreds + 6 ones

- a) 896 b) 8906 c) 8960 d) 8806

76. How many corners does a cube have?

- a) 99 b) 8 c) 10 d) 12

77. How many hours are there in 3 days?

- a) 48 b) 60 c) 72 d) 84

78. What is $144 \div 12$?

- a) 10 b) 11 c) 12 d) 13

79. What is half of 36?

- a) $\frac{1}{2}$ b) 18 c) $\frac{1}{3}$ d) 38

80. Find the smallest 4-digit number that can be formed using the digits 2, 0, 8, and 4 (no repetition).

- a) 2,048 b) 2,084 c) 4,028 d) 2,004

81. A student adds two numbers: $534 + 293$. Then they subtract 200 from the result. What is the final answer?

- a) 657 b) 627 c) 637 d) 647

82. The difference of days in a leap year and an ordinary year is _____

- a) 2 b) 4 c) 0 d) 1

83. Multiply: $(5 \times 7) + (6 \times 8)$

- a) 83 b) 82 c) 80 d) 79

84. How many 15-minute intervals are there in 1 hour?

- a) 3 b) 4 c) 5 d) 6

85. Divide 96 by 8, then subtract 5 from the quotient. What is the result?

- a) 7 b) 8 c) 9 d) 10

86. If a circle is divided into 10 equal parts, how many parts make up one-half of the circle?

- a) 3 b) 4 c) 5 d) 6

87. A clock shows 8:15. It is also called as _____

- a) quarter past 7 b) quarter past 8 c) quarter to 8 d) quarter to 7

88. Multiply the largest single-digit number by the largest two-digit number.

- a) 198 b) 891 c) 189 d) 200

89. What is the difference between the number of days in the month of December and January?

- a) 10 b) 62 c) 1 d) 0

90. Subtract 678 from 1,000, and then divide the result by 2.

- a) 161 b) 162 c) 163 d) 164

91. How many faces does a cuboid have?

- a) 4 b) 6 c) 8 d) 10

92. What fraction represents 3 quarters of a pizza?

- a) $\frac{1}{2}$ b) $\frac{2}{4}$ c) $\frac{3}{4}$ d) $\frac{4}{4}$

93. How many days are there in 4 weeks?

- a) 21 b) 24 c) 28 d) 30

94. What is the product of 25 and 6?

- a) 125 b) 130 c) 145 d) 150

95. Divide 144 by 4, and then add 7. What is the result?

- a) 17 b) 28 c) 43 d) 34

96. A square is divided into 16 equal parts. What fraction represents 3 of these parts?

- a) $\frac{1}{4}$ b) $\frac{1}{8}$ c) $\frac{3}{8}$ d) $\frac{3}{16}$

97. If a clock shows 10:30, what time will it show after 3 hours and 45 minutes?

- a) 1:15 b) 2:15 c) 2:30 d) 3:15

98. Multiply the smallest 2-digit number by the largest single-digit number.

- a) 80 b) 81 c) 90 d) 99

99. If $\frac{1}{4}$ of a tank is filled, how much more is needed to make it full?

- a) $\frac{1}{4}$ b) $\frac{1}{2}$ c) $\frac{1}{3}$ d) $\frac{3}{4}$

100. A leap year will repeat after how many years?

- a) 4 b) 2 c) 3 d) 5

ANSWER KEY**TSE 2024-25****CLASS III****SUBJECT : MATHEMATICS**

| | | | |
|-----|-----------------------------|------|-------------------|
| 1. | c) 4000 | 51. | a) 32,40 |
| 2. | b) 870 | 52. | c) 20 |
| 3. | b) 562 | 53. | b) 9:45 |
| 4. | b) 5 | 54. | c) 16 |
| 5. | a) 2940 | 55. | b) 5/8 |
| 6. | b) 29 | 56. | c) 4,5,45,54 |
| 7. | d) 9 | 57. | a) 7110 |
| 8. | c) Unit fraction | 58. | b) 10 |
| 9. | b) 2020 | 59. | d) 8 |
| 10. | c) 20 and 60 | 60. | b) 4079 |
| 11. | b) 170 | 61. | c) 7 |
| 12. | b) Cube | 62. | d) 50 |
| 13. | d) $24 \div 6=4$ | 63. | d) 7/0 |
| 14. | a) 36 | 64. | a) 265 |
| 15. | b) 30 | 65. | b) 109 |
| 16. | c) One-Eighth | 66. | a) 7897 |
| 17. | a) 88,808,888 | 67. | a) 987 |
| 18. | a) 6700 | 68. | c) half past 7 |
| 19. | b) 8799 | 69. | d) 92 |
| 20. | a) BCD,CDB | 70. | a) left over |
| 21. | a) $12 \div 2$ | 71. | b) 3/12 |
| 22. | a) 12 | 72. | a) 5978 |
| 23. | b) ▼ | 73. | a) ►◄ |
| 24. | c) 2 | 74. | a) 1 |
| 25. | a) 3902 | 75. | b) 8906 |
| 26. | b) 171 | 76. | b) 8 |
| 27. | d) 11 | 77. | c) 72 |
| 28. | b) ▲●●●●▲ | 78. | c) 12 |
| 29. | a) 8 | 79. | b) 18 |
| 30. | c) 30 th January | 80. | a) 2048 |
| 31. | c) 2001 | 81. | b) 627 |
| 32. | c) 6/24 | 82. | d) 1 |
| 33. | b) 8467 | 83. | a) 83 |
| 34. | d) 264 | 84. | b) 4 |
| 35. | d) 8:45 | 85. | a) 7 |
| 36. | c) PQ | 86. | c) 5 |
| 37. | b) 2000 | 87. | b) quarter past 8 |
| 38. | b) 5:30 | 88. | b) 891 |
| 39. | b) 7 | 89. | d) 0 |
| 40. | a) 36 | 90. | a) 161` |
| 41. | a) 9000 | 91. | b) 6 |
| 42. | c) 14 | 92. | c) $\frac{3}{4}$ |
| 43. | a) ●5 | 93. | c) 28 |
| 44. | d) 49 | 94. | d) 150 |
| 45. | c) 5 | 95. | c) 43 |
| 46. | d) 22 | 96. | d) 3/16 |
| 47. | c) 4 | 97. | b) 2:15 |
| 48. | c) thousands | 98. | c) 90 |
| 49. | b) greater than | 99. | a) $\frac{1}{4}$ |
| 50. | d) difference | 100. | a) 4 |

1. Which organ removes carbon dioxide ?
a) Lungs b) Heart c) Brain d) Kidneys
2. What is the function of the brain ?
a) Pump blood b) Control body c) Store energy d) Digest food
3. What is the function of bones ?
a) Support body b) Store energy c) Filter blood d) Digest food
4. What are the arms and legs commonly referred in the human body ?
a) Upper limbs and lower limbs b) Upper muscles and lower muscles
c) Shoulders and thighs d) None of these
5. What does "frail" refer to ?
a) Strong and durable b) Weak and delicate
c) Hard and unbreakable d) Heavy and solid
6. Which of the following is the main function of the stomach?
a) To circulate blood throughout the body b) To break down and digest food
b) To filter waste from the blood c) To absorb nutrients from food
7. Which safety rule is correct ?
a) Jump red lights b) Use zebra crossings
c) Ride on busy roads d) Avoid helmets
8. Which of the following should not be done at home?
a) Run on wet floors b) Use dry floors c) Keep furniture clean d) Play safely
9. What is the key to maintain good health ?
a) Eating uncooked food b) Exercise isn't effective.
c) Consuming healthy and nutritious food d) Drinking sugary drinks
10. What makes a smart home?
a) Decoration b) Remote control c) Large size d) Expensive materials
11. Which taste is not among the basic four?
a) Sweet b) Salty c) Spicy d) Umami
12. What traps dust in the nose ?
a) Mucus b) Hair c) Skin d) Tongue

13. Sona was observing a traffic sign while travelling with her father, which is given below . She was not able to understand the meaning and asked her father. What would be the answer of her father ?



- a) No motor vehicles b) No overtaking c) Stop and give away d) No parking

14. What is the purpose of roughage?

- a) Build bones b) Aid digestion c) Provide energy d) Absorb vitamins

15. Which nutrient is important for building and repairing body tissue ?

- a) Carbohydrates b) Proteins c) Fats d) Lipids

16. Which food protects from diseases?

- a) Fruits b) Sugar c) Oil d) Rice

17. Which food type builds muscles?

- a) Sugar b) Pulses c) Roughage d) Oil

18. What does the skin help to produce?

- a) Vitamin C b) Vitamin B c) Vitamin D d) Vitamin A

19. Rhimes mother is making parathas for her. Which of the following methods of cooking is applicable to make parathas?

- a) Deep frying b) Baking c) Shallow frying d) Grilling

20. Which of the following statements is/are correct ?

1. Momos, idlis and dhokla are roasted before eating.
2. Urad dal , chana dal and rajmah are rich in proteins.
3. Fruits and vegetables help us to fight against diseases.
4. Spices add flavour, colour and taste to our food.

- a) 1,2 and 3 b) 1,2,3 and 4 c) 2,3 and 4 d) 1 only

21. Tick the incorrect statement about food.

- a) When the food is overcooked , the nutritive value is decreased.
b) Ghee and eggs are animal products
c) Preserved food is more nutritive than fresh food.
d) Balanced diet keep us fit and healthy

22. What do cotton clothes do in summer?

- a) Retain heat b) Keep cool c) Absorb water d) Block light

23. What are artificial fibers made of?

- a) Plants b) Animals c) Chemicals d) Wood

24. Match the following

- | | |
|-----------------|--------------|
| i) Stilt houses | a. Rajasthan |
| ii) Mud houses | b. Ice |
| iii) Igloo | c. Assam |
| iv) Houseboat | d. Kerala |

- a) i - a, ii - b, iii - c, iv - d b) i - c, ii - d, iii - a, iv - b
c) i - c, ii - a, iii - b, iv - d d) i - b, ii - a, iii - d, iv - c

25. In Bengal, rangoli is called

- a) Kolam b) Alpana c) Mandana d) Muggu

26. Which type of waste should be disposed of in the green bin?

- a) Plastic and metal waste b) Glass and paper waste
c) Vegetable peels, fruit peels and leftover food d) Plastic and glass waste

27. Which of the following is the primary reason for wearing clothes?

- a) To avoid physical activity b) To protect from extreme weather conditions
c) To hide from animals d) To avoid cleaning the body

28. Which type of clothes are typically worn during happy occasions like weddings and festivals?

- a) Bright and colourful clothes b) Simple and daily wear clothes
c) Sportswear d) Uniforms

29. Which is the best way to take care of your clothes?

- a) Throw them around in the room
b) Wipe dirty hands on them
c) Hang them properly and keep them clean
d) Avoid folding the clothes.

30. What is meant by "durable" clothes?

- a) Beautiful b) Easy to fold c) Long-lasting d) Expensive

31. How are family members related to each other?

- a) Only through marriage b) Only through adoption
c) Through birth, marriage or adoption d) By living in the same house

32. What does a family tree represent?

- a) Family financial status
- b) Family relationships
- c) Family hobbies
- d) Family pets

33. What does "family resemblance" mean ?

- a) Different features
- b) Similar features
- c) Siblings never look alike
- d) Children never resemble parents

34. What is the main benefit of having a market in a neighbourhood?

- a) Buying luxury items
- b) Meeting daily needs
- c) Shopping only on weekend
- d) Finding expensive goods

35. How should people behave in a neighbourhood park?

- a) Be noisy
- b) Keep it clean
- c) Keep it unclean
- d) Ignore park rules

36. What is the primary function of a bank in the neighbourhood ?

- a) Sell milk
- b) Keep valuables safe
- c) Treat patients
- d) Sell groceries

37. Diwali is commonly called the festival of?

- a) Playing
- b) Colors
- c) Lights
- d) Music

38. Gurburab is celebrated on the birthday of which Guru?

- a) Guru Gobind Singh
- b) Guru Arjan Dev
- c) Guru Nanak
- d) Guru Tegh

39. How long did it take to draft the Constitution of India ?

- a) 1 year 6 months
- b) 2 years 11 months and 18 days
- c) 3 years
- d) 4 years

40. Where is the Republic Day parade held in India ?

- a) Punjab
- b) New Delhi
- c) Mumbai
- d) Haryana

41. Which dance forms are traditionally performed during the Baisakhi Festival?

- a) Kathak and Bharatanatyam
- b) Kuchipudi and Odissi
- c) Bhangra and Gidda
- d) Manipuri and Mohiniyattam

42. What is the main agricultural product celebrated during Onam?

- a) Rice
- b) Wheat
- c) Sugarcane
- d) Cereal

43. What does the color green represent on a map ?

- a) Water bodies b) Mountains c) Plateaus d) Plains

44. A person who makes maps is called as _____.

- a) Geographer b) Cartographer c) Engineer d) Architect

45. What do thematic maps show ?

- a) Boundaries b) Features c) specific information d) Directions

46. What is a book of maps called?

- a) Globe b) Atlas c) Diagram d) Sketch

47. Which mountain range lies to the north of India?

- a) Aravalli b) Western Ghats c) Himalayas d) Vindhya

48. Which country is to the northeast of India?

- a) Pakistan b) Nepal c) Myanmar d) Sri Lanka

49. What is the primary benefit of building dams on rivers?

- a) Tourism b) Fishing c) Flood control d) Soil fertility

50. Which document is mandatory for casting a vote in India?

- a) Aadhaar Card b) Voter ID Card c) PAN Card d) Driving License

51. How many digits are in an Aadhaar number?

- a) 10 digits b) 12 digits c) 14 digits d) 16 digits

52. What is the expiry period of an Indian passport?

- a) 2 years b) 7 years c) 10 years d) 15 years

53. How many spokes are there in the Ashoka Chakra on the Indian National Flag?

- a) 18 b) 24 c) 30 d) 32

54. Which tree is considered the national tree of India?

- a) Peepal b) Neem c) Banyan d) Coconut

55. What is the significance of the green color on the Indian National Flag?

- a) Courage b) Prosperity c) Unity d) Sacrifice

56. Why do people in Churchill, Manitoba, leave their car doors unlocked?

- a) To prevent car theft
- b) To allow neighbours to hide from polar bears
- c) To promote easy access during emergencies
- d) To avoid locking their keys inside

57. What type of transport is primarily used in deserts?

- a) Buses
- b) Trains
- c) Camels
- d) Bicycles

58. Which vehicle is commonly used for transport in hilly areas?

- a) Ponies and Mules
- b) Metro
- c) Cars
- d) Buses

59. According to scientists, how did the size of the human brain and teeth change?

- a) Brain increased, teeth decreased
- b) Brain decreased, teeth increased
- c) Both increased
- d) Both decreased

60. Which device allows the transmission of live broadcasts worldwide?

- a) Satellite
- b) Television
- c) Radio
- d) Internet

61. What does ISD stand for in communication?

- a) Internet Subscriber Dialing
- b) International Subscriber Dialing
- c) Indian Standard Dialing
- d) Instant Service Dialing

62. Who is the 'Father of Computer'?

- a) Charles Babbage
- b) Thomas
- c) George Boole
- d) Augustus De Morgan

63. Which gas in the atmosphere absorbs heat?

- a) Oxygen
- b) Carbon dioxide
- c) Helium
- d) Nitrogen

64. What is the term for the process where water vapour turns into water?

- a) Evaporation
- b) Condensation
- c) Sublimation
- d) Freezing

65. Which planet is known as the "Blue Planet"?

- a) Mars
- b) Earth
- c) Neptune
- d) Venus

66. What causes air pollution?

- a) Growing plants
- b) Burning wood
- c) Using rainwater
- d) Cleaning roads

67. What is the primary source of water on Earth?

- a) Oceans b) Rain c) Glaciers d) Rivers

68. Which gas makes up the largest portion of the Earth's atmosphere?

- a) Nitrogen b) Oxygen c) Carbon dioxide d) Argon

69. What forms clouds in the sky?

- a) Wind b) Sunlight c) Water droplets d) Gases

70. What is the movement of Earth around the Sun called?

- a) Rotation b) Revolution c) Orbiting d) Tilting

71. Which planet has the most extensive ring system?

- a) Jupiter b) Uranus c) Neptune d) Saturn

72. Which season is associated with the longest days?

- a) Winter b) Spring c) Summer d) Monsoon

73. What is the main cause of Earth's seasons?

- a) Earth's rotation b) Earth's revolution
c) Position of the Moon d) Wind direction

74. Which planet is the smallest in the solar system?

- a) Venus b) Mercury c) Mars d) Neptune

75. What protects Earth from harmful ultraviolet rays?

- a) Mountains b) Atmosphere c) Clouds d) Water bodies

76. What is the closest star to the Earth?

- a) Moon b) Sirius c) Sun d) Jupiter

77. How long does it take the Moon to complete one revolution around Earth?

- a) 15 days b) 27 days c) 30 days d) 45 days

78. What is the Earth's fixed path around the Sun called?

- a) Orbit b) Axis c) Rotation d) Revolution

79. Which planet is the hottest in the solar system?

- a) Venus b) Mercury c) Jupiter d) Mars

80. Which part of a plant absorbs water and minerals?

- a) Stem b) Leaf c) Root d) Flower

81. Which part of the plant is called the 'kitchen of the plant'?

- a) Leaf b) Root c) Stem d) Flower

82. Which of the following is incorrect statement ?

- a) Plants give us fibres b) Plants give us fresh air
c) Plants give us medicine d) Plants give us wool

83. Which animals are herbivores?

- a) Lions b) Cows c) Foxes d) Vultures

84. What do omnivores eat?

- a) Only plants b) Only animals c) Both plants and animals d) Dead animals

85. Which part of the plant produces seeds?

- a) Stem b) Leaf c) Flower d) Root

86. Which plant has a fibrous root system?

- a) Grass b) Mustard c) Pea d) carrot

87. What is the main function of a plant's stem?

- a) Absorbing water b) Transporting nutrients
c) Photosynthesis d) Reproduction

88. Which animal uses its tail for balance?

- a) Cats b) Elephants c) Scorpions d) Snakes

89. What is photosynthesis?

- a) Absorbing water b) Making food using sunlight
c) Growth of plants d) Reproduction in plants

90. Which material is soluble in water?

- a) Sand b) Salt c) Stone d) Oil

91. What causes day and night?

- a) Earth's rotation b) Earth's revolution
c) Movement of the Moon d) Position of the Sun

92.What is the process of water circulation in nature called?

- a) Evaporation b) Water cycle c) Condensation d) Precipitation

93.What is the crescent Moon?

- a) Full Moon b) Half Moon c) Small curved Moon d) Invisible Moon

94.Which natural satellite revolves around Earth?

- a) Moon b) Sun c) Mars d) Venus

95.Which planet is known as the "Red Planet"?

- a) Mars b) Venus c) Jupiter d) Mercury

96.What are the harmful substances that pollute water called?

- a) Pollution b) Pollutants c) smoke d) Noise

97.What is the term for the overflow of water bodies?

- a) Rain b) Flood c) Tsunami d) Erosion

98.Which planet has the nickname "Gas Giant"?

- a) Earth b) Jupiter c) Mars d) Venus

99.What is the shape of the Earth?

- a) Flat b) Spherical c) Oval d) Cylindrical

100. Which is the fastest train in the world?

- a)Shinkansen b) Maglev c) Eurostar d) TGV

ANSWER KEY

TSE 2024-25

CLASS III

SUB: EVS

| | |
|---|--|
| 1. a) Lungs | 26. c) Vegetable peels, fruit peels, and leftover food |
| 2. b) Control body | 27. b) To protect from extreme weather conditions |
| 3. a) Support body | 28. a) Bright and colourful clothes |
| 4. a) Upper limbs and lower limbs | 29. c) Hang them properly and keep them clean |
| 5. b) Weak and delicate | 30. c) Long-lasting |
| 6. b) To break down and digest food | 31. c) Through birth, marriage, or adoption |
| 7. b) Use zebra crossings | 32. b) Family relationships |
| 8. a) Run on wet floors | 33. b) Similar features |
| 9. c) Consuming healthy and nutritious food | 34. b) Meeting daily needs |
| 10. b) Remote control | 35. b) Keep it clean |
| 11. c) Umami | 36. b) Keep valuables safe |
| 12. b) Hair | 37. c) Lights |
| 13. b) No overtaking | 38. c) Guru Nanak |
| 14. b) Aid digestion | 39. b) 2 years 11 months and 18 days |
| 15. b) Proteins | 40. b) New Delhi |
| 16. a) Fruits | 41. c) Bhangra and Gidda |
| 17. b) Pulses | 42. a) Rice |
| 18. c) Vitamin D | 43. d) Plains |
| 19. c) Shallow frying | 44. b) Cartographer |
| 20. c) 2, 3, and 4 | 45. c) Specific information |
| 21. c) Preserved food is more nutritive than fresh food | 46. b) Atlas |
| 22. b) Keep cool | 47. c) Himalayas |
| 23. c) Chemicals | 48. c) Myanmar |
| 24. c) i- c,ii- a,iii- b,iv -d | 49. c) Flood control |
| 25. b) Alpana | 50. b) Voter ID Card |

| | |
|--|-----------------------------------|
| 51. b) 12 digits | 76. c) Sun |
| 52. c) 10 years | 77. b) 27 days |
| 53. b) 24 | 78. a) Orbit |
| 54. c) Banyan | 79. a) Venus |
| 55. b) Prosperity | 80. c) Root |
| 56. b) To allow neighbors to hide from polar bears | 81. a) Leaf |
| 57. c) Camels | 82. d) Plants give us wool |
| 58. a) Ponies and Mules | 83. b) Cows |
| 59. a) Brain increased, teeth decreased | 84. c) Both plants and animals |
| 60. a) Satellite | 85. c) Flower |
| 61. b) International Subscriber Dialing | 86. a) Grass |
| 62. a) Charles Babbage | 87. b) Transporting nutrients |
| 63. b) Carbon dioxide | 88. a) Cats |
| 64. b) Condensation | 89. b) Making food using sunlight |
| 65. b) Earth | 90. b) Salt |
| 66. b) Burning wood | 91. a) Earth's rotation |
| 67. b) Rain | 92. b) Water cycle |
| 68. a) Nitrogen | 93. c) Small curved Moon |
| 69. c) Water droplets | 94. a) Moon |
| 70. b) Revolution | 95. a) Mars |
| 71. d) Saturn | 96. b) Pollutants |
| 72. c) Summer | 97. b) Flood |
| 73. b) Earth's revolution | 98. b) Jupiter |
| 74. b) Mercury | 99. b) Spherical |
| 75. b) Atmosphere | 100. b) Maglev |

1. The field trip ____ scheduled for next Friday, and we ____ all excited about it.
a) am, is b) is, are c) are, is d) is, am
2. The wizard waved his wand, and the room was filled with sparkling light. State the opposite gender of the underlined word.
a) wizards b) wizardess c) witch d) None of the above
3. We wear woollen clothes _____ winter.
a) in b) on c) at d) of
4. Choose the correct simple past tense form of the verb in brackets:
The athlete ____ (jump) very high.
a) jumps b) jump c) jumped d) jumping
5. She answered the question _____.
a) happily b) tomorrow c) inside d) never
6. Where ____ wild animals live?
a) do b) does c) is d) are
- 7.State the kind of underlined adverb in the sentence:
She drove fast to reach the airport on time.
a) Adverb of place b) Adverb of time c) Adverb of manner d) Adverb of frequency
8. We have a meeting _____ Monday.
a) at b) on c) in d) by
9. I will either read a book _____ watch a movie.
a) but b) or c) and d) yet
10. State the kind of underlined adverb in the sentence:
The children are playing outside.
a) Adverb of manner b) Adverb of place
c) Adverb of time d) Adverb of frequency

11. They _____ to school by bus.

- (1) go (2) are going (3) goes (4) is going

- a) 1 and 2 are correct b) 2 and 3 are correct
c) 1 and 4 are correct d) 1 and 3 are correct

12. The book was both informative _____ engaging.

- a) but b) or c) and d) yet

13. Choose the simple past tense form of 'eat'.

- a) eats b) eat c) ate d) eating

14. He spoke _____ during the official meeting.

- a) formaly b) formalyy c) formally d) formal

15. Convert the question into a negative sentence:

We are at Disneyland.

- a) We are not at Disneyland. b) No, we are at Disneyland.
c) We are at not Disneyland. d) No, we are not at Disneyland.

16. My nephew is visiting us this weekend. State the opposite gender of the underlined word.

- a) nephewess b) niece c) neece d) cousin

17. Alia is a very friendly girl. Everyone in the class likes _____.

- a) she b) him c) her d) it

18. Choose the correct form of the verb 'go' to complete the sentence:

They _____ to the market yesterday.

- a) go b) goes c) went d) going

19. He _____ the guitar every day, and he _____ it very well.

- a) play, play b) plays, play c) play, plays d) plays, plays

20. Choose the correct simple past tense form of the verb in brackets:

She _____(choose) a beautiful gown for the event.

- a) choosed b) chooses c) chose d) choosing

21. Choose the simple past tense of 'buy'.

- a) buyed b) bought c) buys d) bout

22. The cake _____ delicious and freshly baked.

(1) was (2) are (3) am (4) is

a) 1 and 2 are correct b) 1 and 3 are correct
c) 1 and 4 are correct d) None of the above

23. He jumped _____ the pool.

a) on b) into c) in d) over

24. The money is hidden _____ the mattress.

a) in b) under c) on d) beside

25. Change the tense of the verb in the brackets to present continuous:

The athlete _____ (jump) very high.

a) jumps b) is jumping c) jumped d) are jumping

26. The painting you see on that wall is _____ expensive one.

a) a b) an c) are d) that

27. How long have you been working as a waiter at this restaurant? State the gender of the underlined word.

a) Masculine Gender b) Feminine Gender
c) Common Gender d) None of the above

28. I _____ learning gymnastics to improve my strength and flexibility.

a) am b) is c) are d) be

29. Convert the sentence into a negative form: We exercise daily.

a) We do not exercise daily. b) We do not do exercise daily.
c) We do exercise daily. d) No, we do exercise daily.

30. They _____ at the beach last weekend.

a) was b) were c) is d) are

31. We are travelling _____ Riyadh next week.

a) at b) by c) to d) in

32. The thief was clever, _____ he was caught.

a) and b) or c) but d) because

33. The children played _____ and disturbed the neighbours.

a) noisily b) silently c) noisedly d) quietly

34. State the kind of underlined adverb in the sentence: He arrived early at the event.

- a) Adverb of manner
Adverb of place
- b) Adverb of time
d) None of the above
- c)

35. Feminine gender of 'Prince' is?

- a) Princess b) Queen c) Empress d) Lady

36. What did your _____ say when you told him the good news?

- a) mother b) sister c) aunt d) uncle

37. Identify the action verb in the sentence: The cat drops the ball on the floor.

- a) The b) drops c) cat d) ball

38. State the kind of underlined adverb in the sentence:

She danced gracefully across the stage.

- a) Adverb of manner b) Adverb of place
c) Adverb of time d) None of the above

39. You _____ not at home yesterday.

- a) is b) was c) were d) are

40. Where is _____ flower vase I cleaned yesterday?

- a) an b) the c) a d) are

41. We _____ planning to visit our grandparents tomorrow.

- a) is b) are c) were d) has

42. Many toys _____ lying _____ the floor.

- a) is, on b) are, in c) is, in d) are, on

43. The examination will start _____ 10 o' clock tomorrow.

- a) in b) on c) at d) og

44. Never talk to _____ stranger.

- a) a b) an c) the d) am

45. My grandmother loves _____ scarf that I knitted for her.

- a) the b) a c) an d) these

46. I ate ____ salad sandwich for lunch.

- a) a b) an c) the d) those

47. Many _____ flew over the city on Saudi National Day.

- a) aircrafts b) aircraft c) aircrew d) airways

48. John plays football every weekend. Identify the type of noun of the underlined word in the sentence.

- a) Proper noun b) Common noun c) Collective noun d) Abstract noun

49. ____ girl in ____ orange dress is my cousin.

- a) The, a b) A, the c) The, the d) A, a

50. She wore her favourite _____ to the party.

- a) jean b) jeans c) gene d) jeanes

51. Maria visited the museum on Saturday. Which word in the sentence is a common noun?

- a) Maria b) museum c) Saturday d) visited

52. Akhil will come back in an hour. Which word in the sentence is a proper noun?

- a) the b) Akhil c) an d) a

53. The _____ of the houses were covered in snow.

- a) roofs b) rooves c) roof d) roofes

54. Rita loves to read books in the evening. Identify the proper noun in the sentence.

- a) Rita b) read c) books d) evening

55. There is ____ wall around __ school campus.

- a) an, the b) a, the c) an, a d) a,an

56. Many _____ were awarded on the school's sports day.

- a) trophy b) trophies c) trophys d) trophyes

57. John went to the store in London. Identify the proper nouns in the sentence.

- a) John, London b) John, store c) London, went d) London, store

58. This is____ hospital for ____ elderly.

- a) a, an b) the, an c) a, the d) the, a

59. What is the plural form of the word "foot"?

- a) foots b) feets c) footes d) feet

60. Rani went shopping for clothes and shoes. Identify the common nouns in the sentence.

- a) Rani, clothes b) shopping, Rani c) clothes, shoes d) shoes, Rani

61. These ____ the postcards grandma gave me when I was small.

- a) is b) are c) am d) was

62. I saw ____ interesting movie last night.

- a) an b) a c) am d) none of the above

63. John loves playing football. It makes him feel happy. Identify the object pronoun.

- a) football b) playing c) him d) It

64. Convert the verb in the bracket to simple past form :

Carol _____ (try) to finish her homework before going out .

- a) tries b) tried c) is trying d) tried

65. We visited the museum. ____ amazed ____ completely.

- a) They, us b) It, them c) It , us d) They , them

66. She found _____ old book on the shelf and started reading it.

- a) a b) an c) am d) is

67. I helped her with the task. She thanked ____ afterwards.

- a) her b) him c) me d) it

68. Deepa bought a gift for Raju. She gave it to _____ on his birthday.

- a) him b) them c) me d) her

69. Change the underlined singular noun into plural form:

The child is playing with the toys.

- a) The children are playing with the toys. b) The children is playing with the toy.
c) The childs are playing with the toys. d) None of the above

70. Teena is _____ a letter.

- a) writes b) writing c) wrote d) write

71. Reframe the sentence using the correct article:

He is solving puzzle.

- a) He is solving the puzzle. b) He is solving an puzzle.
c) He is a solving puzzle. d) He is the solving puzzle.

72. She has one _____, but I have many _____.

- a) ring, rings b) rings, rings c) rings, ring d) ring, ring

73. Complete the sentence using the simple past tense of the verb (teach):

The teacher _____ the students good manners.

- a) teach b) teaches c) taught d) teaching

74. The coach encouraged _____ to perform their best in the match.

- a) him b) her c) them d) it

75. Her shoes were damaged, so _____ father bought a new pair for _____.

- a) her, she b) her, her c) she, her d) her, him

76. The window _____ after the storm hit.

- a) broke b) broked c) broken d) break

77. She wants to eat _____ apple and _____ sandwich for lunch.

- a) an, a b) a, an c) a, a d) the, a

78. Fill in the blanks by choosing the simple past form of the verb given in the brackets:

He _____ his new shoes to the party last night. (wear)

- a) wear b) wore c) wearing d) wears

79. The doctors treat the patients. _____ treat _____ with care.

- a) He, them b) They, them c) They, it d) She, them

80. Write in Present Continuous Tense using the verb given in the bracket:

We _____ for the bus. (wait)

- a) is waiting b) are waiting c) am waiting d) wait

81. The principal's office is located _____ the second floor, next to the library.

- a) in b) at c) on d) by

82. Find the tense of the verb in the given sentence:

I am studying for my exams right now.

- a) Simple Present Tense b) Simple Past Tense
c) Present Continuous Tense d) None of the above

83. They _____ the newspaper yesterday.

- a) read b) red c) are reading d) reads

84. She is ____ honest person.

- a) a b) am c) an d) none of the above

85. The lioness roared loudly. ____ was warning the other animals.

- a) She b) It c) He d) They

86. There are several _____ involved in making the new product.

- a) process b) processes c) processed d) processing

87. "Did they find her keys on the table?" Identify the plural pronoun in the sentence.

- a) keys b) did c) her d) they

88. My cousin is attending ____ university in London.

- a) an b) a c) am d) none of the above

89. _____ Kingdom of Saudi Arabia will host ____ FIFA World Cup in 2034.

- a) The, a b) A, a c) The, the d) A, the

90. She called ____ yesterday. I told _____ about the meeting. Choose the object pronouns in the sentences.

- a) She, her b) me, her c) me , I d) She, I

91. _____ Grandpa sleeping?

- a) Is b) am c) Are d) were

92. Identify the subject pronoun in the sentence:

Sarah enjoys wearing a scarf. ____ suits her outfit nicely.

- a) Sarah b) her c) It d) scarf

93. She always _____ hard.

- a) study b) studying c) studies d) is studying

94. Poonam _____ all over the country.

- a) travelld b) travelled c) travelling d) traveled

95. They _____ to music.

- a) is listening b) are listening c) was listening d) listening

96. Rishi and Rohit are cousins. _____ grew up together.

- a) We b) They c) Us d) Them

97. I have a bad headache. ____ has been there since morning.

- a) It b) He c) She d) They

98. The rabbit disappeared _____ its burrow.

- a) into b) on c) under d) below

99. State the kind of underlined adverb in the sentence:

Let me fetch the keys that I left upstairs.

- a) Adverb of manner b) Adverb of time
c) Adverb of place d) Adverb of degree

100. He didn't do _____ in his presentation.

- a) well b) badly c) slowly d) quickly

ANSWER KEY

TSE 2024-25

CLASS III

SUBJECT : ENGLISH

| | | | |
|----------------------|--------------------|-----------------------|----------------------|
| 1. b) is, are | 26. b) an | 51. b) museum | 76. a) broke |
| 2. c) witch | 27. a) Masculine | 52. b) Akhil | 77. a) an, a |
| 3. a) in | Gender | 53. a) roofs | 78. b) wore |
| 4. c) jumped | 28. a) am | 54. a) Rita | 79. b) They, them |
| 5. a) happily | 29. a) We do not | 55. b) a, the | 80. b) are waiting |
| 6. a) do | exercise daily. | 56. b) trophies | 81. c) on |
| 7. c) Adverb of | 30. b) were | 57. a) John, London | 82. c) Present |
| manner | 31. c) to | 58. c) a, the | Continuous |
| 8. b) on | 32. c) but | 59. d) feet | Tense |
| 9. b) or | 33. a) noisily | 60. c) clothes, shoes | 83. a) read |
| 10. b) Adverb of | 34. b) Adverb of | 61. b) are | 84. c) an |
| place | time | 62. a) an | 85. a) She |
| 11. a) 1 and 2 are | 35. a) Princess | 63. c) him | 86. b) processes |
| correct | 36. d) uncle | 64. b) tried | 87. d) they |
| 12. c) and | 37. b) drops | 65. c) it, us | 88. b) a |
| 13. c) ate | 38. a) Adverb of | 66. b) an | 89. c) The, the |
| 14. c) formally | manner | 67. c) me | 90. b) me, her |
| 15. a) We are not at | 39. c) were | 68. a) him | 91. a) Is |
| Disneyland. | 40. b) the | 69. a) The children | 92. c) It |
| 16. b) niece | 41. b) are | are playing with | 93. c) studies |
| 17. c) her | 42. d) are, on | the toys. | 94. b) travelled |
| 18. c) went | 43. c) at | 70. b) writing | 95. b) are listening |
| 19. d) plays, plays | 44. a) a | 71. a) He is solving | 96. b) They |
| 20. c) chose | 45. a) the | the puzzle. | 97. a) It |
| 21. b) bought | 46. a) a | 72. a) ring, rings | 98. a) into |
| 22. c) 1 and 4 are | 47. b) aircraft | 73. c) taught | 99. c) Adverb of |
| correct | 48. b) common noun | 74. c) them | place |
| 23. b) into | 49. c) The, the | 75. b) her, her | 100. a) well |
| 24. b) under | 50. b) jeans | | |
| 25. b) is jumping | | | |

- 1) Which is the national game of Saudi Arabia?
a) basketball b) car racing c) football d) scuba diving
- 2) Which is the world's largest country (in the terms of area)?
a) USA b) Russia c) UK d) Canada
- 3) Which is the national animal of Qatar?
a) Arabian Leopard b) camel c) Arabian Oryx d) Steppe Eagle
- 4) Which is the largest sand desert in the world?
a) Sahara b) Al Nufud c) Atacama d) Ar Rub' al Khali
- 5) The hillocks of sand is called _____.
a) Wadis b) Oasis c) Sand dunes d) None of them
- 6) When is the UAE National day celebrated?
a) Nov 10 b) Dec 4 c) Oct 2 d) Dec 2
- 7) How many emirates do we have in the UAE?
a) 5 b) 6 c) 10 d) 7
- 8) Which is the national dish of Iraq?
a) Harees b) Musakhan c) Masgouf d) Mansaf
- 9) What is the name of the floor decoration made in west Bengal using ricepowder and water?
a) Kolam b) Muggulu c) Rangoli d) Alpana
- 10) Where is the 'Akshardham Temple' situated at?
a) Puri ,Odisha b) Raisen ,MadhyaPradesh c) Gujarat d) New Delhi
- 11) In which state Kashi Vishwanath Temple is situated?
a) Varanasi ,Uttar Pradesh b) Kedarnath,Uttarakhand
c) Madhya Pradesh d) Thirumala Andhra Pradesh
- 12) Who designed Kartavya path?
a) Gertude Jekyll b) Francis Derwent c) Robert Lutyens d) Edwin Lutyens
- 13) Rajpath is a ceremonial boulevard that runs from Rashtrapati Bhawan on Raisina Hill and ends at _____.
a) Red Fort b) Qutub Minar c) Ajmeri Gate d) Purana Qila

14) Whose statue is placed under the canopy behind the India Gate in New Delhi?

- a) Chandra Shekar Azad
- b) Subhas Chandra Bose
- c) Sardar Vallabhai Patel
- d) Bhagat Singh

15) In Sep 2022, the centre made a move to rename the ceremonial boulevard as what?

- a) Shanti Path
- b) Shakti Path
- c) Kartavya Path
- d) Ahimsa Path

16) Idiyappam and Injipuli are famous dish in which state ?

- a) Uttar Pradesh
- b) Maharastra
- c) Tamil Nadu
- d) Kerala

17) _____ is a pancake made of rice flour, spices and peanuts

- a) Sarva Pindi
- b) Akki roti
- c) Tappala cheka
- d) both a & c

18) Akki roti is a famous breakfast item in which state of India?

- a) Andhra Pradesh
- b) Karnataka
- c) Tamil Nadu
- d) Kerala

19) Which of the following is known as "The city of Golden Gate"?

- a) San Franscisco
- b) Switzerland
- c) Jamaica
- d) Sweden

20) Which country is called as "The Sugar bowl of the world" ?.

- a) Italy
- b) Cuba
- c) India
- d) Japan

21)The famous landmark Machu Picchu is in _____.

- a) Greece
- b) Italy
- c) Peru
- d) USA

22) Mount Rushmore is in _____

- a) USA
- b) Canada
- c) UK
- d) Italy

23) How would you classify a dolphin?

- a) Fish
- b) Amphibian
- c) Bird
- d) Mammal

24) Which of the following does not belong to nut?

i) Almond ii) walnut iii) peanut iv) cashewnut

- a) i, ii
- b) ii
- c) i ,iii
- d) iv

25) Which spice is known as "Queen of spices"?.

- a) cinnamon
- b) cardamom
- c) nutmeg
- d) Black pepper

26) What is the sports ground of golf called?

- a) ring
- b) court
- c) course
- d) velodrome

27) An informal set of rules or a polite behaviour while using the Internet is called?

- a) Etiquettes
- b) Mannersim
- c) Netiquettes
- d) Empathy

28) Which outdoor game is depicted in the given figure?



- a) Volley ball b) Base ball c) Rounders d) Hockey

29) Which is the national game of New Zealand?

- a) Rugby b) Carrom c) Judo d) Cricket

30) Which game is the term 'Silly point' associated with ?

- a) Hockey b) Football c) Cricket d) Wrestling

31) Who is the first president of India?

- a) Dr.Radhakrishnan b) Dr.Rajendra Prasad

- c) Dr. A.P.J.Abdul Kalam d) Dr.Zakir Husain

32) Which is the largest ocean in the world?

- a) Pacific Ocean b) Indian Ocean c) Atlantic Ocean d) Arctic Ocean

33) Where is the 'Eden Gardens' stadium located?

- a) Kolkata b) Mumbai c) Chennai d) New Delhi

34) Name the hottest planet in our solar system

- a) Jupiter b) Venus c) Mercury d) Earth

35) Which of the following birds have filtering system in their beaks?

- a)Flamingoes b) Robins c) Sparrows d) Macaws

36) Which is the largest planet in our solar system?

- a) Uranus b) Saturn c) Mars d) Jupiter

37) What is the name of Palm Tree Posture in yoga?

- a) Hastottanasana b) Katichakrasana c) Simhasana d) Tadasana

38) Which among the following is the highest waterfall in the world?

- a) Niagara Falls b) Yosemite Falls c)Angel Falls d)Victoria Falls

39) Which is the world's largest glacier?

- a) Lambert glacier b) Biafo glacier c) Yalung glacier d) Siachen glacier

40) What is a collective noun for a group of stairs?

- a) bunch b) list c) cluster d) flight

41) Which country named Cyclone Fengal that recently hit eastern coast of India?

- a) Iran b) Kuwait c) Saudi Arabia d) Oman

42) Who was the famous painter who created the masterpiece of "Mona Lisa"?

- a) Leonardo da Vinci b) Picasso
c) Monet d) Rembrandt



43) In which country did the ancient Olympic Games originate?

- a) Greece b) Rome c) Egypt d) China

44) Which country hosted 2024 Summer Olympics games?

- a) Greece b) Italy c) France d) Spain

45) How many medals did India win at the Paris Olympics 2024?

- a) 9 b) 6 c) 11 d) 5

46) Who invented the mobile phone?

- a) Martin Cooper b) Thomas Edison c) Rogar Bacon d) Antony Blatner

47) Who invented the electrical light bulb?

- a) Issac Newton b) Benjamin Franklin c) Albert Einstein d) Thomas Edison

48) Which freedom fighter is known as the "Iron man" of India?

- a) Sardar Vallabhai Patel b) Lala Lajpat Rai
c) Chandra Bose d) Chandra Sekar Azad

49) The Temple of Apollo is located in _____.

- a) Italy b) Greece
c) USA d) UK



50) Which of the following is called Playground of Europe ?

- a) Germany b) Italy c) Spain d) Switzerland

51) A _____ can see everything around them including what is behind them.

- a) Dolphin b) snake c) Frog d) cockroach

52) Who are the founders of GOOGLE?

- a) Larry Page & Savoc Haoc b) Daniel Pop & Sergey Brin
c) Harry Mic & Chrity Mittal d) Larry Page & Sergey Brin

53) Google's first name was _____.

- a) Sea Search b) BackRub c) Backlink d) Engine-S

54) Identify the name of the animal

- a) Bulldog bat c) Honduran bat
b) Horseshoe bat d) Giant golden crowned flying fox



55) Where is Ad-Dahna Desert located ?

- a) 80 km west of Riyadh b) 80 km east of Riyadh
c) 80 km north of Riyadh d) 80 km south of Riyadh

56) What kind of food is a pineapple?

- a) Cores b) Melon c) Berry d) Pits

57) Which of the following country prepares Quzi as one of the national dishes?

- a) Saudi Arabia b) Kuwait
c) UAE d) Iraq



58) Which of the following yoga posture helps in children connecting to their inner strength ?

- a) Tadasana b) Simhasana c) Hastottanasana d) Katichakrasana

59) _____ is a part of the human body without blood vessels.

- a) cornea b) Retina c) sclera d) earlobe

60) A cow-bison hybrid is called _____

- a) bison b) calf c) buffalo d) beefalo

61) Which is the world's smallest mammal?

- a) mole b) blossom bats
c) flying fox d) Bumblebee bat

62) Find out the another partner Robin Hood and _____

- a) the forty thieves b) the lion
c) his merry men d) Juliet

63) Which country is the second nation from Middle East to host 2034 FIFA World cup?

- a) Oman b) Qatar c) Saudi Arabia d) Bahrain

64) Select the biodegradable items from the list given below.

Polythene bags, wilted flowers, pencil shavings, glass bangles, bronze statue, vegetable peels.

- a) wilted flowers, pencil shavings, glass bangles b) vegetable peel, pencil shavings, glass
c) wilted flowers, vegetable peels, pencil shavings d) both a & b

65) Select the items from the list which are non biodegradable.



- a) i , iii b) ii ,iii c) ii, iv d)none of these

66) Choose the suitable companions for the below.

A) sword – i) parcel

B) pins – ii) shield

C) part – iii) nail

D) tooth – iv)needles

- a) A- ii,B- i ,C- iii,D- iv b) A- ii, B- iv,C- i,D- iii
c) A-ii, B- iv, C-iii,D- i d) none of these

67) How many hours should you sleep each day?

- a) 5 b) 14 c) 6 d) 8

68) Aman along with his parents visited flower garden. Which of the following action he should not be doing?

- a) Plucking flowers b) Catching butterflies c) Plucking leaves d) All of these

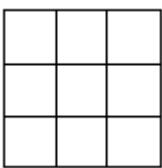
69) Choose the odd one out

- a) Billiards b) Cricket c) Carrom d) Chess

70) What is the full form of ISRO?

- a) International Space Research Organisation
b) Indian Satellite Research Organisation
c) Indian Space Research Organisation
d) None of these

71) How many squares are there in the given figure?



- a)14 b)13 c) 10 d) 9

72) Which sport is played in the Ring ?

- a) Taekwondo b) Judo c) Karate d) Boxing

73) What icon is this for?

- a) MS Excel b) MS PowerPoint
c) MS Outlook d) MS Word



74) Which country will host 2028 Summer Olympic Games?

- a) USA b) Japan c) France d) Brazil

75) If an electric train runs in the direction from North to South with a speed of 150 km/hr covering 2000 km, then in which direction will the smoke of its engine go?

- a) North direction b) South direction c) Opposite direction d) No direction

76) How many alphabets can you find in the hidden image?



- a) more than 2 b) 2 c) 1 d) 0

77) Where is the smallest bone in the human body located?

- a) eye b) ear c) leg d) none of these

78) Which country won the ICC Women's T20 World Cup in 2024?

- a) South Africa b) India c) Australia d) New Zealand

79) Who was the first Indian woman to win Nobel Prize?

- a) Mother Teresa b) Wangari Maathai c) Aung San Suu Kyi d) Alice Munro

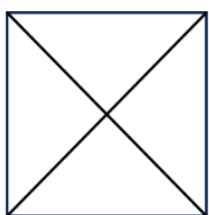
80) Who among the following has become the youngest World Chess Champion?

- a) R Praggnanandhaa b) Ding Liren c) D Gukesh d) None of these

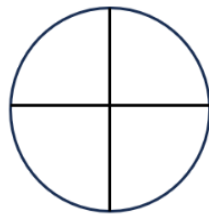
81) Who won the gold medal in men's single tennis title at the 2024 Paris Olympics?

- a) Jannik Sinner b) Novak Djokovic c) Carlos Alcaraz d) Matthew Ebden

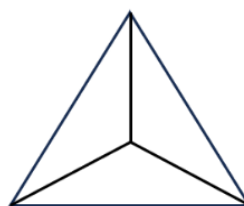
82) Look at the given figures and find out the odd one



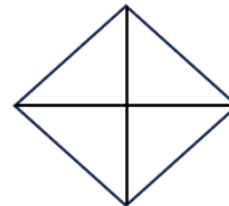
(A)



(B)

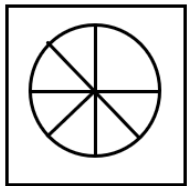
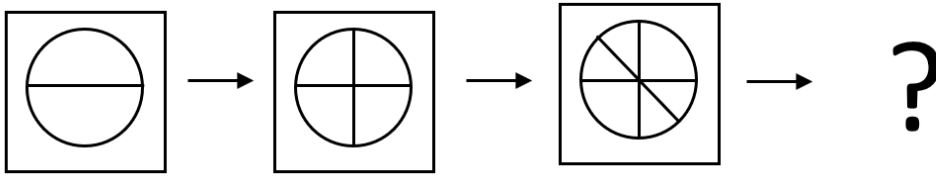


(C)

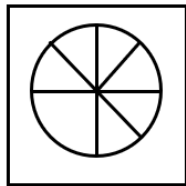


(D)

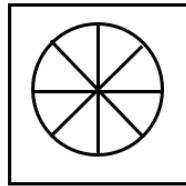
83) Find the next figure that completes the given sequence



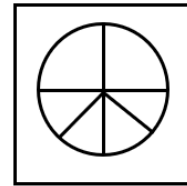
(A)



(B)

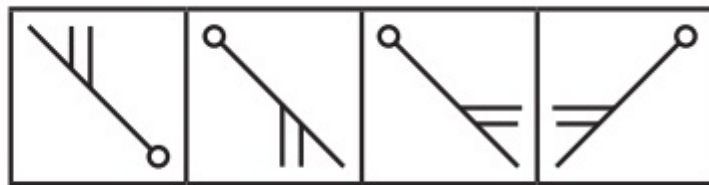


(C)



(D)

84) Choose the correct image as the mirror image of the given image



(a)

(b)

(c)

(d)

85) In which country was Elon Musk born?

- a) Romania b) Canada c) South Africa d) USA

86) Elon Musk is the founder of _____.

- a) Space X b) Virgin Galactic c) Orbital Science Corporation d) Boeing

87) The Proba-3 mission launched by ISRO's PSLV, is associated with which space agency?

- a) CNSA b) NASA c) JAXA d) ESA

88) Identify the famous social media app



- a) Facebook b) LinkedIn c) Tik tok d) Instagram

89) Which of the following is not a part of CPU?

- a) Memory unit b) Arithmetic Logic unit c) Program unit d) Control unit

90) Which plant has flowers but no leaves?

- a) Bamboo b) Mustard c) Sugarcane d) Cactus

- 91) Which gas constitutes most of the earth's atmospheric air?
a) Oxygen b) Carbon dioxide c) Hydrogen d) Nitrogen
- 92) Which family of plants does apple belong to?
a) mallow b) rose c) lily d) buttercup
- 93) How many years are there in a century?
a) 10 b) 25 c) 50 d) 100
- 94) Jana-Gana-Mana was originally composed in _____.
a) Bengali b) Gujarati c) Hindi d) Marathi
- 95) Which of the following is the smallest bird in the world?
a) Robin b) Diamond firetail c) Finch d) Bee Hummingbird
- 96) Which of the following musical instrument is related to Ustad Zakir Hussain?
a) violin b) guitar c) tabla d) sitar
- 97) How many bones are there in the adult human body?
a) 300 b) 206 c) 266 d) 226
- 98) Which day is observed as International Day of Persons with Disabilities (IDPD) annually?
a) 2 December b) 2 October c) 3 December d) 3 October
- 99) Which is the largest island in the world?
a) Greenland b) New Guinea c) Madagascar d) Great Britain
- 100) What is the national currency of Bangladesh?
a) Lek b) Peso c) Rupee d) Taka

ANSWER KEY

TSE 2024-25

CLASS III

SUBJECT : G.K

| | |
|--------------------------------|-------------------------------|
| 1. c) football | 26. c) course |
| 2. b) Russia | 27. c) Netiquettes |
| 3. c) Arabian Oryx | 28. d) Hockey |
| 4. d) Ar Rub' al Khali | 29. a) Rugby |
| 5. c) sand dunes | 30. c) Cricket |
| 6. d) Dec 2 | 31. b) Dr. Rajendra Prasad |
| 7. d) 7 | 32. a) Pacific Ocean |
| 8. c) Masgouf | 33. a) Kolkata |
| 9. d) alpana | 34. b) Venus |
| 10. d) New Delhi | 35. a) Flamingoes |
| 11. a) Varanasi, Uttar Pradesh | 36. d) Jupiter |
| 12. d) Edwin Lutyens | 37. d) Tadasana |
| 13. d) Purana Qila | 38. c) Angel Falls |
| 14. b) Subhas Chandra Bose | 39. a) Lambert glacier |
| 15. c) Kartavya Path | 40. d) flight |
| 16. d) Kerala | 41. c) Saudi Arabia |
| 17. a) Sarva Pindi | 42. a) Leonardo da Vinci |
| 18. b) Karnataka | 43. a) Greece |
| 19. a) San Francisco | 44. c) France |
| 20. b) Cuba | 45. b) 6 |
| 21. c) Peru | 46. a) Martin Cooper |
| 22. a) USA | 47. d) Thomas Edison |
| 23. d) Mammal | 48. a) Sardar Vallabhai Patel |
| 24. c) i, iii | 49. b) Greece |
| 25. b) cardamom | 50. d) Switzerland |

- 51. c)Frog
- 52. d) Larry Page & Sergey Brin
- 53. b)BackRub
- 54. d) Giant golden crowned flying fox
- 55. b) 80 km east of Riyadh
- 56. c) Berry
- 57. d) Iraq
- 58. b) Simhasana
- 59. a) cornea
- 60. d) beefalo
- 61. d) Bumblebee bat
- 62. c) his merry Men
- 63. c) Saudi Arabia
- 64. c) wilted flowers,vegetable peels,pencil shavings
- 65. a) i , iii
- 66. b) A-ii, B-iv,C-i,D-iii
- 67. d) 8
- 68. d) All of these
- 69. b)Cricket
- 70. c) Indian Space Research Organisation
- 71. a) 14
- 72. d) boxing
- 73. d) MS Word
- 74. a) USA
- 75. d) No direction
- 76) a)more than 2
- 77) b) ear

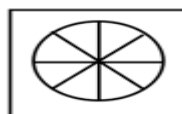
- 78) d)NewZealand
- 79) a) Mother Terasa
- 80) c) D Gukesh
- 81) b) Novak Djokovic

82)



(c)

83)



(c)

84)



(b)

- 85) c) South Africa
- 86) a) Space X
- 87) d) ESA
- 88) d)Instagram
- 89) c)Program Unit
- 90) d) cactus
- 91) d) Nitrogen
- 92) b) rose
- 93) d) 100
- 94) a)Bengali
- 95) d)Bee Humming Bird
- 96) c) Tabla
- 97) b)206
- 98) c) 3 Dec
- 99) a) Greenland
- 100) d) Taka