

Name: _____ Sec. _____ Date: _____

I. Fill in the blanks.

- _____ is the third planet from the Sun.
- Very high hills are called _____.
- A plateau is also known as a _____.
- _____ is a piece of land surrounded by water on all sides.
- Big seas are called _____.

II. Who am I?

- I am a dry area of land covered with sand. _____
- I am the tip of a mountain. _____
- I have many landforms and water bodies. _____
- I am also known as the ship of the desert. _____

III. Match the following.

- | | | |
|------------------------------------|-----------|-----|
| 1. A small river | pollution | () |
| 2. Part of land covered with trees | stream | () |
| 3. Earth Day | forest | () |
| 4. Flat lands | plains | () |
| 5. Factories and industries | April 22 | () |

IV. Write True or False.

- Three fourths of the Earth's surface is covered with water. _____
- Deserts get very heavy rainfall. _____
- The Earth belongs to the family of the moon. _____

V. Name the following.

1. Two landforms - _____ , _____

2. Two water bodies - _____ , _____

3. Two oceans - _____ , _____

VI. Define the following.

1. Atmosphere - _____

2. Plains - _____


VII. Identify the natural features of the Earth and fill in the missing letters.




M _ _ N _ _ N




_ O _ _ S _



_ E _ _ T



R _ _ E _

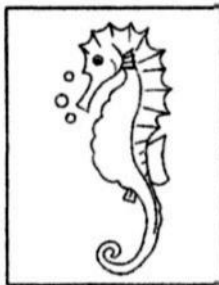






_ S _ _ N _

VIII. Colour the land portion of the Earth in green and water portion in blue.



NAME: _____ SEC: _____ DATE: _____

Q1. Name the animals and colour the aquatic animals only.**Q2. Fill in the blanks.**

- a) We tame _____ animals for our pleasure and company.
- b) Aquatic animals breathe through _____.
- c) Animals that eat both plants and animals are called _____.
- d) _____ and _____ carry people and loads from one place to another.

Q3. Who am I?

- a) I give silk fibres to make sarees, ties etc. _____
- b) I am the national animal of India. _____
- c) I am the young one of a cow. _____
- d) I give wool that can be woven into woollen clothes. _____
- e) I am a piece of land, thickly covered with trees. _____

Q4. Write True or False.

- a) Ants and bees live in colonies. _____
- b) Birds and some insects are the animals that can fly. _____
- c) Aquatic animals live on land. _____
- d) Domestic animals live in shelters made by man. _____

Q5. Find the animal homes in the crossword and fill in the blanks below.

P	I	H	O	L	E	M
B	E	E	H	I	V	E
U	F	S	W	A	B	G
R	N	A	S	T	R	Z
R	S	T	A	B	L	E
O	J	C	L	X	W	Y
W	I	T	N	E	S	T

1. Horse _____
2. Snake _____
3. Bird _____
4. Bee _____
5. Rabbit _____

Q6. What are herbivores? Give two examples.

A. _____

Q7. Give two examples of each.

- a) Domestic animals: _____ , _____
- b) Carnivores: _____ , _____
- c) Omnivores: _____ , _____
- d) Scavengers: _____ , _____
- e) Insects: _____ , _____

Q8. Give reason.

We must avoid using things made of fur, leather or ivory.

Q9. Write 'W' for wild , 'D' for domestic and 'P' for pet animals.

- | | | |
|------------------|------------------|-------------------|
| a. parrot _____ | d. bear _____ | g. goat _____ |
| b. giraffe _____ | e. rabbit _____ | h. elephant _____ |
| c. horse _____ | f. buffalo _____ | i. hen _____ |

Name: _____ Sec. _____ Date: _____

I. Choose and write the suitable names of the seasons:

Winter	Spring	Summer	Autumn	Monsoon
--------	--------	--------	--------	---------

- The weather is very hot. _____
- Cool wind blows along with heavy showers of rain. _____
- Most of the trees shed their leaves. _____
- We use room heaters and blowers. _____
- Flowers bloom and new leaves grow on the trees. _____



II. Complete the following story by using the picture clues :


Ryan got ready for school .It was  _____ outside.

He wore a  _____ and  _____

so that he would not get wet. His sister did not have a raincoat. So, she

took an  _____ to keep herself dry. Both of them love

the rainy season. They made paper  _____ .  It was fun

to play in the puddles. They also saw a few  _____ on the way.

III. Fill in the blanks :

- A _____ is a band of seven colours formed in the sky.
- We keep ourselves warm by wearing _____ clothes.
- _____ depend on the rains for their crops that we get to eat.
- _____ and _____ are the seasons for a shorter time.
- Rainy season comes after the _____ season.
- _____ season is also known as 'Fall'.

IV. Here are some words. Put them in the right column.

monsoon December hottest season cloudy days short days

hot drinks rainbow cotton clothes woollen clothes coolers

puddles May

WINTER	SUMMER	RAINY SEASON

V. Look at the following pictures and name the seasons:



INTERNATIONAL INDIAN SCHOOL, DAMMAM

STD -II EVS L -13 It's Travel Time Worksheet

Name: _____ Sec: _____ Date: _____


I. Fill in the blanks :

1. _____ travel under water.
2. _____ move on the tracks.
3. Aeroplanes land and take off from the _____.
4. A _____ carries people up and down the hill while sliding on a metal rope.
5. _____ transport is used to carry people and goods across the oceans, seas, rivers and lakes.

II. Circle the odd one out:

- | | | | |
|-----------------|-----------|------------|-----------------|
| 1. car | train | boat | tractor |
| 2. aeroplane | submarine | helicopter | hot air balloon |
| 3. bullock cart | tonga | train | camel cart |
| 4. steamer | yacht | bicycle | ship |

III. Number these means of transport from the slowest to the fastest:



IV. Answer the following:

Q1. Name the three types of means of transport.

A. _____

Q2. How are helicopters useful?

A. _____

V. Who am I?

1. I move slowly on water using wind energy. _____
2. I am used for emergency landing. _____
3. You need me to travel to other countries.

VI. Tick the correct option:

1. _____ is the fastest and costliest means of transport.
Air transport Water transport Land transport
2. _____ uses water transport to fight for the country.
Army Navy Air force
3. _____ is the first city in India to run metro in 1984.
Delhi Chennai Kolkata

VII. Name the following:

1. Two fuels : _____ , _____
2. Two slow moving vehicles : _____ , _____
3. Two vehicles that move on the road : _____ , _____
4. Two unusual vehicles: _____ , _____

VIII. Give the expanded form of CNG - _____

IX. Name the vehicles which do not need fuel to move:



X. You are planning some outing. Write the correct means of transport you would choose in the space provided :

1. You are going for a school field trip - _____
2. You are going to visit a village across the river - _____
3. You are going to India for vacation - _____
4. You are going on a trip from Mumbai to Goa - _____

INTERNATIONAL INDIAN SCHOOL - DAMMAM

STD -II

EVS

L-12: OCCUPATIONS

WORKSHEET :

NAME: _____ ROLL No. _____ Sec. _____ DATE: _____

I. Fill in the blanks:

1. The _____ makes and repairs things made of iron.
2. A _____ sells cloth or fabric.
3. The _____ prescribes us medicines when we are sick.
4. The _____ play the sports that they love and turn their hobby into a profession.
5. The _____ makes pots with clay.

II. Match the jobs to the places:

- | | | | |
|-------------|---|-----------------|-----|
| 1. teacher | — | garage | () |
| 2. mechanic | — | restaurant | () |
| 3. nurse | — | railway station | () |
| 4. chef | — | school | () |
| 5. porter | — | hospital | () |

III. Underline the correct answer:

1. The florist sells
(**vegetables, flowers, medicines**)
2. The person who repairs our vehicles.
(**writer, musician, mechanic**)
3. The person who sells food and other household goods.
(**porter , grocer , draper**)

IV. Answer the following:

Q1. What is profession?

Ans: _____

Q2. What does a musician do?

Ans: _____

V. Who am I?

1. I write interesting books, stories and articles. _____

2. I stitch your clothes. _____

3. I grow crops for you to eat. _____

4. I mend your shoes. _____

VI. Match the occupations of people by numbering the pictures correctly:

- | | | | |
|------------|-------------|------------|------------|
| 1. clown | 2. potter | 3. mason | 4. artist |
| 5. dentist | 6. mechanic | 7. postman | 8. plumber |



Name: _____

Sec: _____

Date: ___ / ___ / ___

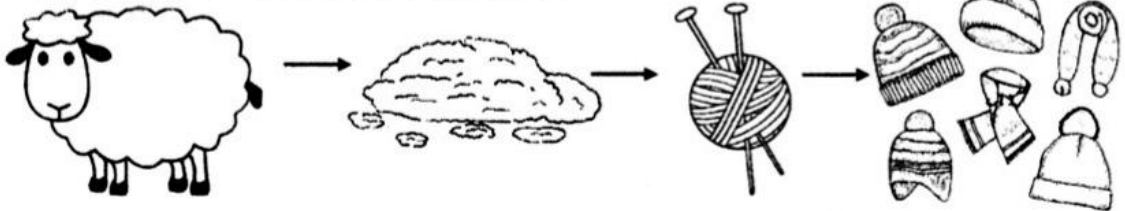
I. Fill in the blanks:

1. We wear different types of clothes in different _____.
2. Woollen clothes keep us _____ in cold winters.
3. _____ is obtained from the hair of sheep.
4. In rainy season, we keep ourselves dry by wearing _____ and _____ and using an _____.

II. Write True or False:

1. Fibres like cotton, wool and jute are made of chemicals in factories. _____
2. People who do special jobs wear uniforms. _____
3. We also get wool from the hair of goats, muskoxen, rabbits and camels. _____


III. Identify and name the pictures:



IV. Colour the star blue for uniform and red for costume:



V. Number the following pictures in the correct order:



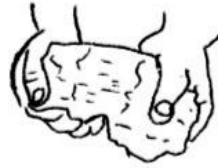
spinning
into yarn



cotton bolls



weaving



cleaning of
cotton bolls



ready
clothes

VI. Give any two examples for the following:

1. Clothes made of cotton

2. Synthetic fibres


3. Water proof materials

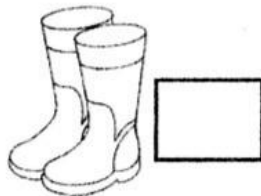
4. People who wear uniform to work

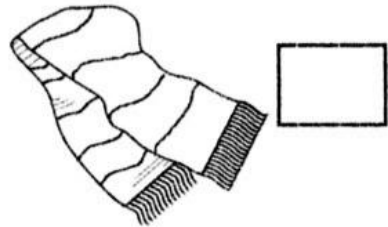
5. Clothes knitted from wool

VII. Identify the season in which we wear the following.


Write S for Summer, W for Winter and R for Rainy Season





















INTERNATIONAL INDIAN SCHOOL, DAMMAM

STD II EVS REVISION WORKSHEET TERM II FEBRUARY 2025

Name: _____ Sec: ____ Roll No: ____ Date: _____

I. Fill in the blanks:

1. We wear different types of clothes in different _____.
2. Animals like cows, goats and camels eat only _____.
3. Days are shorter and nights are longer in _____ season.
4. People who do special jobs wear _____.
5. The _____ of very high mountains are usually covered with snow.
6. _____ is a highland that is flat at top and looks like a table.

II. Who am I?

1. I am also known as monsoon season- _____
2. I am the young one of a cat- _____
3. I live in a shed- _____
4. I am made up of land and water- _____
5. I am a piece of land surrounded by water on all sides- _____
6. I am a plant-eater. I provide you with wool- _____
7. I am also known as 'Fall' - _____
8. I am the flat land on the Earth- _____

III. Match the following:

- | | | | |
|-----------------------------|---|----------------|-----|
| 1. Flowers bloom | - | uniform | () |
| 2. Weaving | - | colonies | () |
| 3. A pilot | - | spring | () |
| 4. Room heaters and blowers | - | cotton clothes | () |
| 5. Ants and bees | - | winter season | () |

IV. Name the following:

1. A 'V shaped' low land between two hills or mountains: _____
2. Two short seasons: _____, _____
3. It helps to keep us dry in rainy season: _____
4. A blanket of air that surrounds the Earth: _____
5. This season comes after monsoon: _____

V. Write true or false. Rewrite the statements correctly:

1. A lake is a small river. _____

2. Pet animals stay at home with us. _____

3. Natural fibres are made of chemicals in factories. _____

4. Birds and some insects are animals that can fly. _____

VI. Give two examples of the following:

1. Oceans _____, _____
2. Natural Fibres _____, _____
3. Omnivores _____, _____
4. Landforms _____, _____

VII. Answer the following:

Q1. How did early humans cover themselves?

A1. _____

X. Rearrange the jumbled letters using the given clues:

1. It is the wettest time of the year.



ONONOSM

2. The largest water body.




AEONC

3. Special clothes worn for a special purpose.



MOUSECT

4. It gives us milk.



FAOLBFU

XI. Draw, name and colour:

One thing we wear in winter season	Any one landform