

INTERNATIONAL INDIAN SCHOOL, DAMMAM
UPPER PRIMARY SECTIONS
ANNUAL EXAM - REVISION WORKSHEET (2024-25)
SUBJECT – EVS

CLASS: III

NAME- _____ SECTION - _____ ROLL NO - _____

L-13 SYMBOLS OF UNITY

I. FILL IN THE BLANKS

1. The beliefs and customs shared by people in a particular society is termed as _____.
2. Our national flag is also called_____.
3. _____ is the national fruit of India.
4. Colour at the top of our national flag stands for _____ and _____.
5. It takes _____ seconds to sing national anthem in a proper tune.
6. _____instill a sense of pride and freedom in the hearts of the citizens of India.

II. STATE WHETHER TRUE OR FALSE AND CORRECT THE FALSE STATEMENT:

1. In national emblem, bull is on the left side of the wheel Ashoka chakra. ()

2. The national anthem of India was composed by Poet Rabindranath Tagore. ()

3. Peacock symbolizes strength, agility and power. ()

4. Yamuna is the national river of India. ()

5. Our national emblem is taken from the Lion Capital of Ashoka at Sarnath. ()

III. MATCH THE FOLLOWING :

- | | | |
|-----------------------|---------------------------|-----|
| 1. Vande Mataram | prosperity | () |
| 2. Tiranga | agility | () |
| 3. Green | peace | () |
| 4. Royal Bengal Tiger | Bankim Chandra Chatterjee | () |
| 5. White | Pingali Venkayya. | () |

IV. UNSCRAMBLE THE WORDS BY USING THE HINTS GIVEN IN THE BRACKET:

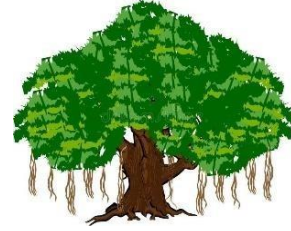
1. TREULUC _____ (India is a country with diverse)
1. URRCNEYC _____ (national emblem is seen on it)
2. SBDECINIR _____ (Also said as, its written on)

V. IDENTIFY THE NATIONAL SYMBOLS :



a.

सत्यमेव जयते



b.

L-17 ANIMAL KINGDOM

I. CHOOSE THE CORRECT ANSWER:

1. Fish uses _____ to breathe.
a. lungs b. nose c. gills.
2. Which animals do slither?
a. Cow and sheep b. Snake and Snail c. Butterfly and Bat
3. Domesticated animals use their tails to express emotions and to _____
a. Communicate b. swatter c. Both a and b
4. There are about _____ animal species living on Earth.
a. 2-3 million b. 7-8 million c. 9-10 million

II. FILL IN THE BLANKS.

1. Monkeys use their tail to _____ and _____ things.
2. _____ is the largest animal found in ocean.
3. _____ feed on dead animals.
4. Animals that eat only plants are called _____ .

III. STATE WHETHER TRUE OR FALSE AND CORRECT THE FALSE STATEMENT.

1. Lion is an Herbivores. ()
a. _____
2. Rabbit and Parrots are friendly animals and kept as a pet. ()
a. _____
3. Sea animals use their tails to move from side to side. ()
a. _____
4. Squirrels use their tails as swatter. ()
a. _____

IV. MATCH THE FOLLOWING:

- | | | |
|--------------|-------------|-----|
| 1. Bugs | Fruits | () |
| 2. Hyenas | crawl | () |
| 3. Scorpions | Insects | () |
| 4. Kangaroos | scavengers | () |
| 5. Toucans | Big animals | () |

V. GIVE ONE WORD FOR THE FOLLOWING:

1. Food for cattle - _____
2. Threat or danger - _____

VI. GIVE ANY TWO EXAMPLES:

1. Animals that fly : _____ , _____
2. Small Animals : _____ , _____
3. Animals that eat both plants and flesh : _____ , _____

VII. CIRCLE THE ODD ONE OUT:

1. Cow , Sheep, Horse , Lion
2. Mosquitoes, Bugs, Monkeys, Ants.
3. Elephant , Giraffe, Ostrich, Dolphin
4. Scorpion, Crab, Parrot, Spider

L: 18 AIR AND WATER

I. FILL IN THE BLANKS:

1. Plants require _____ to prepare food and _____ for growth.
2. _____ is used to generate electricity by moving blades or turbines of wind mills.
3. Aerated drinks contain _____.
4. Water is a colourless, _____ and tasteless liquid.
5. _____ is the main source of water on the Earth.
6. Water exists in three forms such as solid, liquid, and _____.

II. CHOOSE THE CORRECT ANSWER:

1. _____ provides a medium for sound to travel.
a. Snow b. Air c. Tree d. Water
2. Smoke and air emitted from vehicles is a major cause of _____ pollution.
a. Water b. Soil c. Air d. Sound

3. _____ of the Earth is covered with water.
a. 1/2 b. 2/4 c. 1/4 d. 3/4

4. _____ is required for breathing.
a. Helium b. Argon c. Nitrogen d. Oxygen

5. _____ traps heat.
a. Nitrogen b. Carbon dioxide c. Oxygen d. Argon

III. STATE WHETHER TRUE OR FALSE. IF FALSE, CORRECT THE STATEMENT:

1. Water exists in three forms; they are not interchangeable. ()

2. Water is a universal solvent. ()

3. The process of conversion of water into water vapor on heating is evaporation. ()

4. Composition of air contains 26% of oxygen. ()

5. Substances that dissolvable in water are called soluble substances. ()

IV. MATCH THE FOLLOWING:

- | | |
|--------------------|------------------------------|
| 1. Condensation | Water-borne disease () |
| 2. Air pollutant | Methane () |
| 3. Typhoid | Water cycle () |
| 4. Greenhouse gas | Burning of wood () |
| 5. Water pollutant | Industry waste () |

V. DEFINE:

1. Insoluble substances: _____

VI. UNSCRAMBLE THE WORD BY USING HINTS GIVEN BELOW:

1. GNOYXE _____ (Gas present in air)
2. IOLPNTUOL _____ (Dirt in air)
3. GONRA _____ (Type of gas)
4. REODSLUOS _____ (Do not taste)
5. SAIVUNREL _____ (Worldwide)

L-19 WEATHER AND SEASONS

I. CHOOSE THE CORRECT ANSWER

1. _____ is the daily atmospheric condition of a place.
a) Weather b) Seasons c) Temperature d) Revolution
2. Monsoon is followed by _____ season.
a) Winter b) Spring c) Autumn d) Summer
3. The uneven heating and cooling of different parts of earth causes _____.
a) rain b) day c) night d) wind

II. FILL IN THE BLANKS

1. Change in seasons are caused due to the _____.
2. Excessive rain is very harmful as they cause _____.
3. Warm air can carry more _____ than cooler air.
4. _____ is the hottest season.
5. Places near the _____ get more heat from the sun.

III. STATE TRUE OR FALSE AND CORRECT THE FALSE STATEMENTS.

i. Spring is known as golden season ()

ii. People living in coastal areas such as Kerala prefer wearing light coloured cotton clothes. ()

iii. Weather is for longer span of time. ()

IV. GIVE ONE WORD FOR THE FOLLOWING

1. Season when trees shed their leaves. _____
2. Season when days are smaller than nights. _____
3. Path on which the earth moves around the sun _____

V. MATCH THE FOLLOWING

- | | | |
|------------------|---------------|-----|
| a. Moving air | gujjak | () |
| b. Hilly areas | spring season | () |
| c. Winter season | wind | () |
| d. Harvesting | warm clothes | () |

VI. IDENTIFY THE SEASONS



L-20 UNIVERSAL BODIES

I. FILL IN THE BLANKS:

- a. _____ is the largest planet in our solar system.
- b. The Sun, the Moon, the Earth and the planets are all _____ bodies.
- c. The Earth is surrounded by a thin layer of air called the _____.
- d. It takes about 24 hours for the earth to complete one _____.
- e. The movement of the Earth around the Sun in a fixed path is called _____.
- f. All eight planets move around the Sun in their respective _____.
- g. The Moon is a natural _____.

II. STATE WHETHER TRUE OR FALSE AND CORRECT THE FALSE STATEMENT.

- a. Moon is made up of hot burning gases. ()
-

- b. The surface of the Moon has big holes called Craters ()

- c. Rotation of Earth around the Sun causes change in seasons. ()

- d. The different shapes of moon are called the Phases of Moon ()

- e. The light from the Sun reaches our earth in 1 hour ()

III. GIVE ONE WORD FOR THE FOLLOWING:

- a. A group of stars appears to form pattern in the sky. _____
- b. A celestial body orbiting the earth or another planet. _____
- c. The Romans name of "Sun God". _____
- d. The Moon comes between the Earth and the Sun. _____

IV. CHOOSE THE CORRECT ANSWER:

1. The Sun is one million times bigger than the _____
a. Moon b. Earth c. Jupiter d. Mars
2. Orion, Great Bear and Hunter are some of the _____
a. Phases of Moon b. Stars c. Constellations d. satellite
3. The Earth takes _____ to complete one Revolution.
a. 365 days 6 hours b. 270 days c. 366 days d. 395 days
4. The Earth is _____ in shape.
a. Circular b. Spherical c. Cylindrical d. flat


V. READ AND ANSWER THE FOLLOWING QUESTIONS:

The Earth spins on its axis like a top. The axis is an imaginary line that runs through the center of the Earth. This movement is called rotation. It takes about 24 hours or one day for the Earth to complete on rotation.

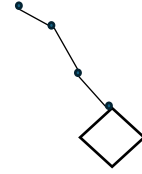
- 1) An imaginary line that runs through the Centre of the Earth
a. Axis b. Tropic of Cancer c. Orbit
- 2) The movement of Earth on its own axis
a. Revolution b. Rotation c. Phases
- 3) How long does it take for the Earth to complete one rotation?
a. 366 days b. 27 days c. 24 hours

VI. IDENTIFY THE PICTURES

a.



b.



VII. UNSCRAMBLE THE WORDS GIVEN BELOW:

1. RAOSL YESMST _____ (System of the Sun)
2. NTIARTOON _____ (Movement of the Earth)
3. EARTEMHOPS _____ (Blanket of air)
4. OTRIB _____ (Fixed path)
5. SCRREAT _____ (Big holes on the Moon)

VIII. FIND THE ANSWER FROM THE GRID AND FILL IN THE BLANKS:

A	G	I	R	A	F	F	E	I	D
G	Y	E	K	N	O	M	Y	I	S
R	O	T	H	P	C	N	R	V	P
E	S	B	I	L	J	M	U	P	R
E	U	L	O	T	U	L	P	S	I
N	M	E	R	C	U	R	Y	O	N
U	P	Q	R	T	D	R	E	J	G
S	H	A	N	D	P	U	M	P	S

1. National Flower is _____.
2. Very big animal with long neck _____.
3. Water is drawn out from _____.
4. _____ is called as a golden season.
5. Smallest planet _____.
6. Bottom stripe in Indian flag is _____ in colour.